



New Maths GCSE: G7 - Which Transformation?

Name:.....

Date:.....

What type of transformation is this?

- a) Rotation
- b) Reflection
- c) Translation
- d) Enlargement

Designed using Autograph

Correct Answer: A B C D

Explanation:

.....

.....

.....

.....

.....

.....

What type of transformation is this?

- a) Rotation
- b) Reflection
- c) Translation
- d) Enlargement

Designed using Autograph

Correct Answer: A B C D

Explanation:

.....

.....

.....

.....

.....

.....

What type of transformation is this?

- a) Rotation
- b) Reflection
- c) Translation
- d) Enlargement

Designed using Autograph

Correct Answer: A B C D

Explanation:

.....

.....

.....

.....

.....

.....

What type of transformation is this?

a) Rotation
b) Reflection
c) Translation
d) Enlargement

Designed using: **Autograph**

Correct Answer: A B C D

Explanation:

.....

.....

.....

.....

.....

.....

What type of transformation is this?

a) Rotation
b) Reflection
c) Translation
d) Enlargement

Designed using: **Autograph**

Correct Answer: A B C D

Explanation:

.....

.....

.....

.....

.....

.....

What type of transformation is this?

a) Rotation
b) Reflection
c) Translation
d) Enlargement

Designed using: **Autograph**

Correct Answer: A B C D

Explanation:

.....

.....

.....

.....

.....

.....

What type of transformation is this?

a) Rotation
b) Reflection
c) Translation
d) Enlargement

Designed using: **Autograph**

Correct Answer: A B C D

Explanation:

.....

.....

.....

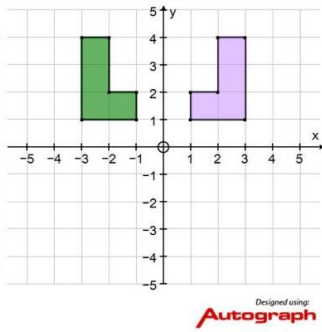
.....

.....

.....

What type of transformation is this?

- a) Rotation
- b) Reflection
- c) Translation
- d) Enlargement



Correct Answer: A B C D

Explanation:

.....

.....

.....

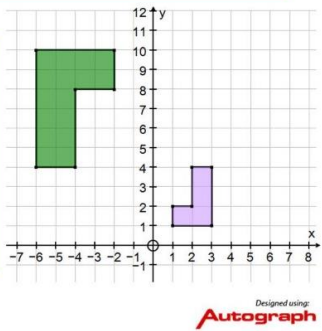
.....

.....

.....

What type of transformation is this?

- a) Rotation
- b) Reflection
- c) Translation
- d) Enlargement



Correct Answer: A B C D

Explanation:

.....

.....

.....

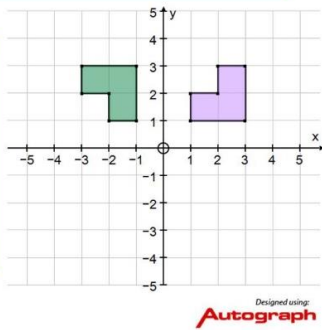
.....

.....

.....

What type of transformation is this?

- a) Rotation
- b) Reflection
- c) Translation
- d) Enlargement



Correct Answer: A B C D

Explanation:

.....

.....

.....

.....

.....

.....