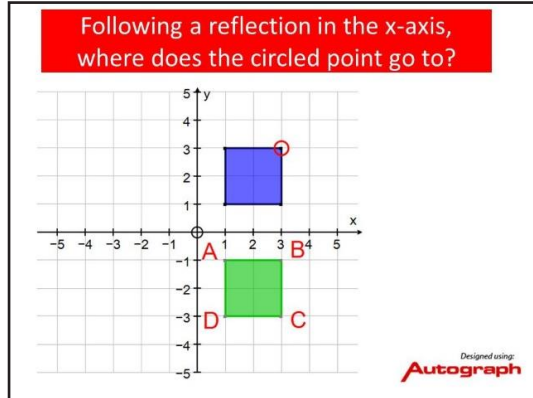




New Maths GCSE: G7 - Transformations - follow the point

Name:.....

Date:.....



Correct Answer: A B C D

Explanation:

.....

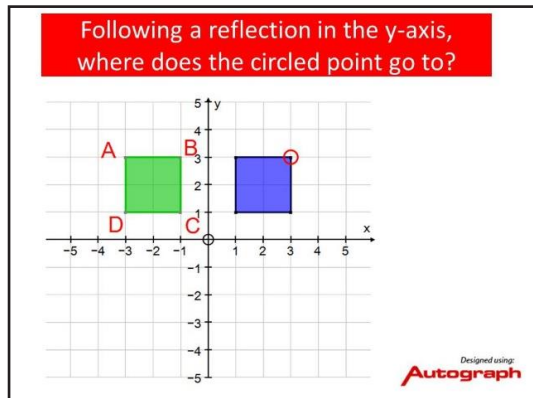
.....

.....

.....

.....

.....



Correct Answer: A B C D

Explanation:

.....

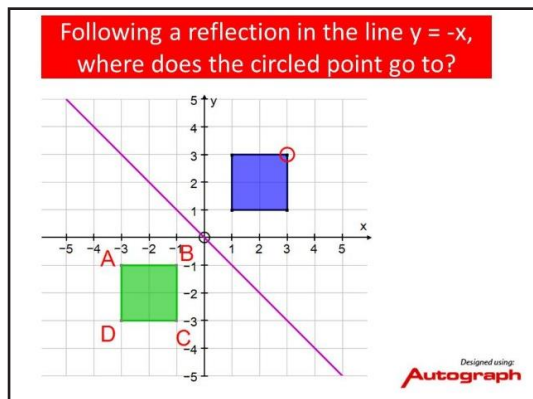
.....

.....

.....

.....

.....



Correct Answer: A B C D

Explanation:

.....

.....

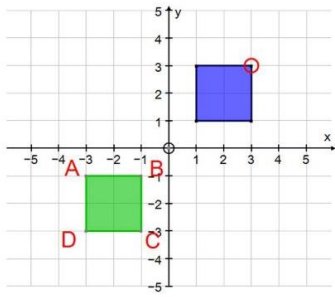
.....

.....

.....

.....

Following a rotation 180° clockwise about the origin, where does the circled point go to?



Designed using:
Autograph

Correct Answer: A B C D

Explanation:

.....

.....

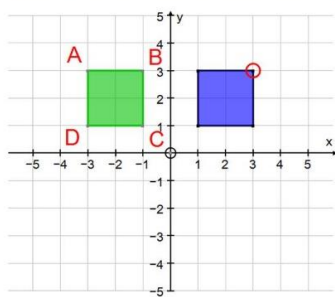
.....

.....

.....

.....

Following a rotation 270° clockwise about the origin, where does the circled point go to?



Designed using:
Autograph

Correct Answer: A B C D

Explanation:

.....

.....

.....

.....

.....

.....