

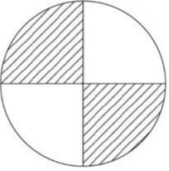


# GCSE Maths Takeaway 44 - Symmetry

Name: .....

Date: .....

How many lines of symmetry does this shape have?



(A) 0  
(B) 1  
(C) 2  
(D) 4

Correct Answer: A B C D

Explanation:

.....

.....

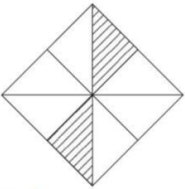
.....

.....

.....

.....

What is the order of rotational symmetry of this shape?



(A) 1  
(B) 2  
(C) 4  
(D) 8

Correct Answer: A B C D

Explanation:

.....

.....


.....


.....


.....


.....

Which figure has no lines of symmetry?

A. 

B. 

C. 

D. 

Correct Answer: A B C D

Explanation:

.....


.....

.....

.....

.....

.....



How many lines of symmetry does this shape have?

A) 0    B) 1    C) 2    D) 4

Correct Answer: A B C D

Explanation:

.....

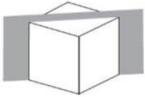
.....

.....



.....



.....

.....



Which shape best represents the 2-dimensional shape formed by the slice made by the plane through the vertices of the cube shown?

A.       C. 

B.       D. 

Correct Answer: A B C D

Explanation:

.....

.....

.....

.....

.....

.....