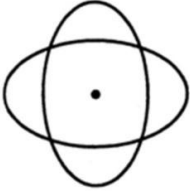




New Maths GCSE: G1 - Rotational Symmetry

Name:.....

Date:.....



What is the order of rotational symmetry of this shape?

A) 0 B) 1 C) 2 D) 4

Correct Answer: A B C D

Explanation:

.....


.....

.....

.....

.....

.....



What is the order of rotational symmetry of this shape?

A) 2 B) 3 C) 4 D) 8

Correct Answer: A B C D

Explanation:

.....

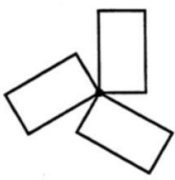
.....

.....

.....

.....

.....



What is the order of rotational symmetry of this shape?

A) 0 B) 1 C) 2 D) 3

Correct Answer: A B C D

Explanation:

.....

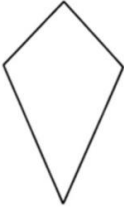
.....

.....

.....

.....

.....



What is the order of rotational symmetry of this shape?

A) 0 B) 1 C) 2 D) 4

Correct Answer: A B C D

Explanation:

.....

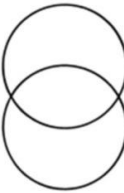
.....

.....

.....

.....

.....



What is the order of rotational symmetry of this shape?

A) 0 B) 1 C) 2 D) 4

Correct Answer: A B C D

Explanation:

.....

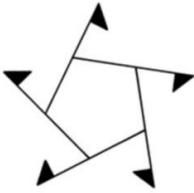
.....

.....

.....

.....

.....



What is the order of rotational symmetry of this shape?

A) 0 B) 1 C) 5 D) 10

Correct Answer: A B C D

Explanation:

.....


.....

.....

.....

.....

.....



What is the order of rotational symmetry of this shape?

A) 0 B) 1 C) 5 D) 10

Correct Answer: A B C D

Explanation:

.....


.....

.....

.....

.....

.....



What is the order of rotational symmetry of this shape?

A) 1 B) 2 C) 4 D) 5

Correct Answer: A B C D

Explanation:

.....


.....

.....

.....

.....

.....



What is the order of rotational symmetry of this shape?

A) 1 B) 2 C) 5 D) 6

Correct Answer: A B C D

Explanation:

.....


.....

.....

.....

.....

.....



What is the order of rotational symmetry of this shape?

A) 0 B) 1 C) 2 D) 3

Correct Answer: A B C D

Explanation:

.....

.....

.....

.....

.....

.....