




Planes of Symmetry

Name:.....

Date:.....



How many planes of symmetry does this shape have?

A) 1 B) 3 C) 5 D) 9

Correct Answer: A B C D

Explanation:

.....

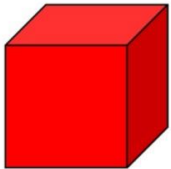
.....

.....

.....

.....

.....



How many planes of symmetry does this shape have?

A) 3 B) 4 C) 9 D) 12

Correct Answer: A B C D

Explanation:

.....

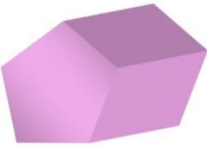
.....

.....

.....

.....

.....



How many planes of symmetry does this shape have?

A) 0 B) 1 C) 5 D) 6

Correct Answer: A B C D

Explanation:

.....


.....

.....

.....

.....

.....



How many planes of symmetry does this shape have?

A) 0 B) 2 C) 5 D) ∞

Correct Answer: A B C D

Explanation:

.....


.....

.....

.....

.....

.....



How many planes of symmetry does this shape have?

A) 0 B) 1 C) 2 D) 4

Correct Answer: A B C D

Explanation:

.....


.....

.....

.....

.....

.....



How many planes of symmetry does this shape have?

A) 2 B) 3 C) 4 D) 5

Correct Answer: A B C D

Explanation:

.....


.....

.....

.....

.....

.....



How many planes of symmetry does this shape have?

A) 1 B) 2 C) 3 D) 5

Correct Answer: A B C D

Explanation:

.....


.....

.....

.....

.....

.....



How many planes of symmetry does this shape have?

A) 1 B) 2 C) 3 D) 4

Correct Answer: A B C D

Explanation:

.....

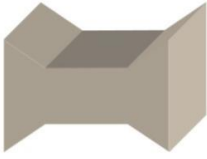
.....

.....

.....

.....

.....



How many planes of symmetry does this shape have?

A) 1 B) 2 C) 3 D) 4

Correct Answer: A B C D

Explanation:

.....


.....

.....

.....

.....

.....



How many planes of symmetry does this shape have?

A) 1 B) 2 C) 3 D) 4

Correct Answer: A B C D

Explanation:

.....

.....

.....

.....

.....

.....