




# New Maths GCSE: G1 - Lines of Symmetry

Name:.....

Date:.....



How many lines of symmetry does this shape have?

A) 0   B) 1   C) 2   D) 4

Correct Answer: A B C D

Explanation:

.....


.....

.....

.....

.....

.....



How many lines of symmetry does this shape have?

A) 0   B) 1   C) 2   D) 4

Correct Answer: A B C D

Explanation:

.....


.....

.....

.....

.....

.....



How many lines of symmetry does this shape have?

A) 0   B) 1   C) 2   D) 4

Correct Answer: A B C D

Explanation:

.....


.....

.....

.....

.....

.....



How many lines of symmetry does this shape have?

A) 0   B) 1   C) 2   D) 4

Correct Answer: A B C D

Explanation:

.....


.....

.....

.....

.....

.....



How many lines of symmetry does this shape have?

A) 0   B) 1   C) 2   D) 4

Correct Answer: A B C D

Explanation:

.....


.....

.....

.....

.....

.....



How many lines of symmetry does this shape have?

A) 1   B) 2   C) 4   D) 8

Correct Answer: A B C D

Explanation:

.....


.....

.....

.....

.....

.....



How many lines of symmetry does this shape have?

A) 0   B) 1   C) 2   D) 4

Correct Answer: A B C D

Explanation:

.....


.....

.....

.....

.....

.....



How many lines of symmetry does this shape have?

A) 0   B) 1   C) 2   D) 4

Correct Answer: A B C D

Explanation:

.....

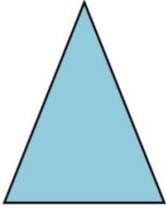
.....

.....

.....

.....

.....



How many lines of symmetry does this shape have?

A) 0   B) 1   C) 2   D) 3

Correct Answer: A B C D

Explanation:

.....


.....

.....

.....

.....

.....



How many lines of symmetry does this shape have?

A) 0   B) 1   C) 2   D) 3

Correct Answer: A B C D

Explanation:

.....

.....

.....

.....

.....

.....