



New Maths GCSE: G13 - Plans and Elevations

Name:.....

Date:.....

This is what I can see.
From which side am I viewing the shape?

A) B) C) D)

Correct Answer: A B C D

Explanation:

.....

.....

.....

.....

.....

.....

This is what I can see.
From which side am I viewing the shape?

A) B) C) D)

Correct Answer: A B C D

Explanation:

.....

.....

.....

.....

.....

.....

Which is the correct 3-D shape?

A) B) C) D)

Correct Answer: A B C D

Explanation:

.....

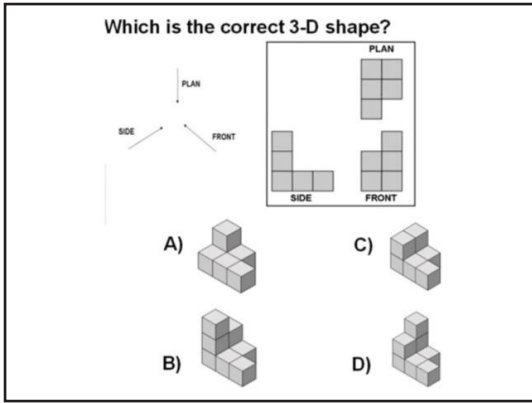
.....

.....

.....

.....

.....



Correct Answer: A B C D

Explanation:

.....

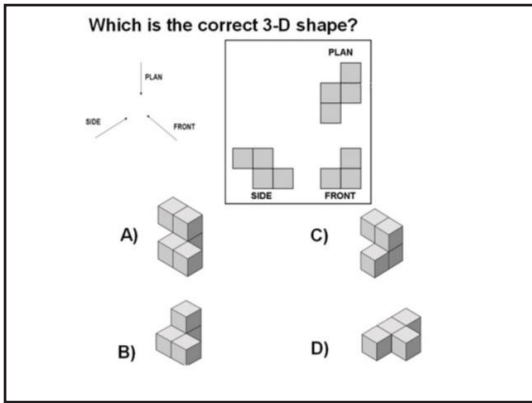
.....

.....

.....

.....

.....



Correct Answer: A B C D

Explanation:

.....

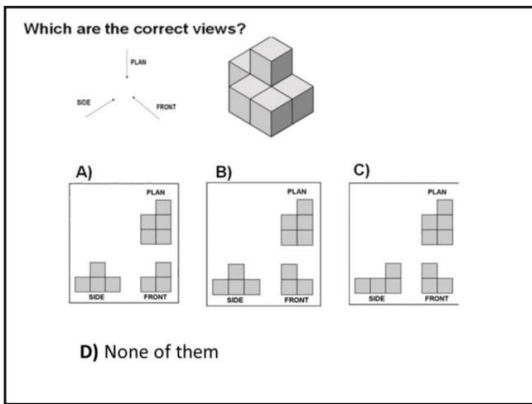
.....

.....

.....

.....

.....



Correct Answer: A B C D

Explanation:

.....

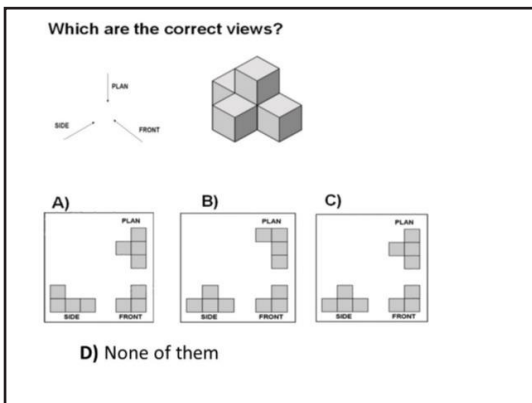
.....

.....

.....

.....

.....



Correct Answer: A B C D

Explanation:

.....

.....

.....

.....

.....

.....

Which are the correct views?

A)

B)

C)

D) None of them

Correct Answer: A B C D

Explanation:

.....

.....

.....

.....

.....

.....

Which are the correct views?

A)

B)

C)

D) None of them

Correct Answer: A B C D

Explanation:

.....

.....

.....

.....

.....

.....

This is what I can see.
From which side am I viewing the shape?

A)

B)

C)

D)

Correct Answer: A B C D

Explanation:

.....

.....

.....

.....

.....

.....