




Planes of Symmetry

Name:.....

Date:.....



How many planes of symmetry does this shape have?

A) 1

B) 3

C) 5

D) 9

Correct Answer: A B C D

Explanation:

.....

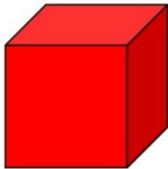
.....

.....

.....

.....

.....



How many planes of symmetry does this shape have?

A) 3

B) 4

C) 9

D) 12

Correct Answer: A B C D

Explanation:

.....


.....

.....

.....

.....

.....



How many planes of symmetry does this shape have?

A) 0

B) 1

C) 5

D) 6

Correct Answer: A B C D

Explanation:

.....

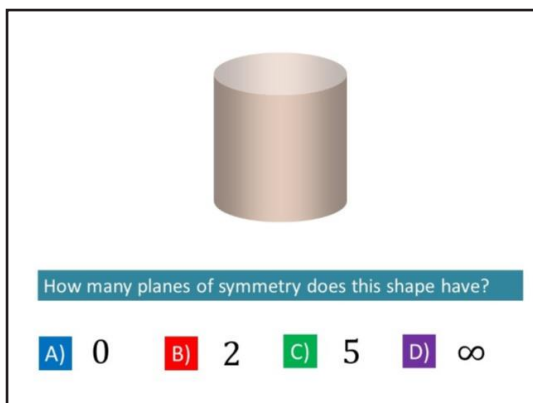
.....

.....

.....

.....

.....



Correct Answer: A B C D

Explanation:

.....

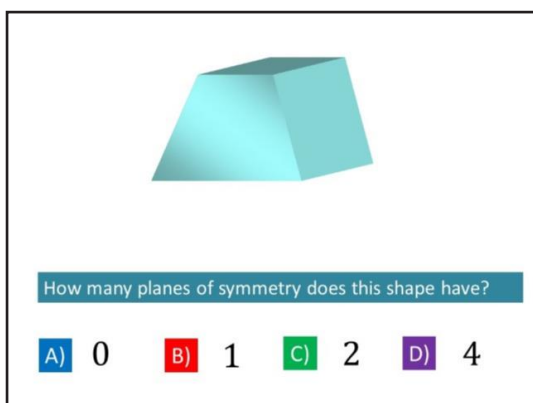
.....

.....

.....

.....

.....



Correct Answer: A B C D

Explanation:

.....

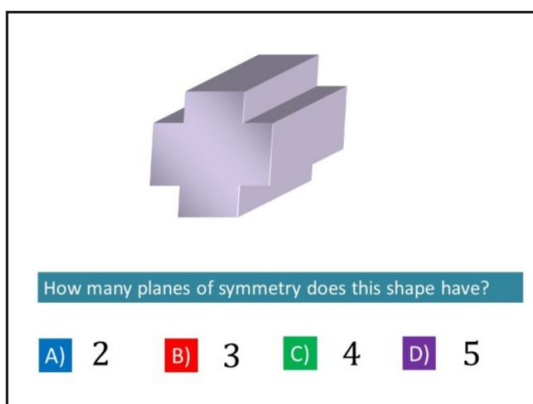
.....

.....

.....

.....

.....



Correct Answer: A B C D

Explanation:

.....

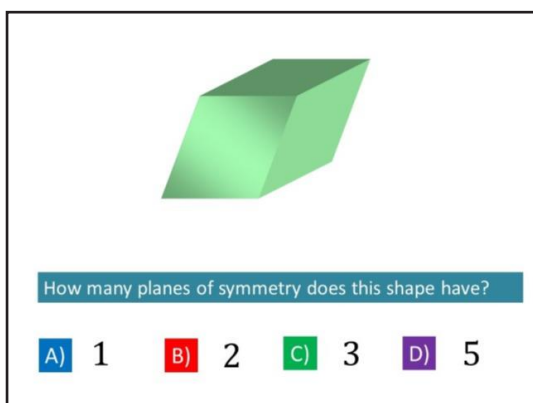
.....

.....

.....

.....

.....



Correct Answer: A B C D

Explanation:

.....

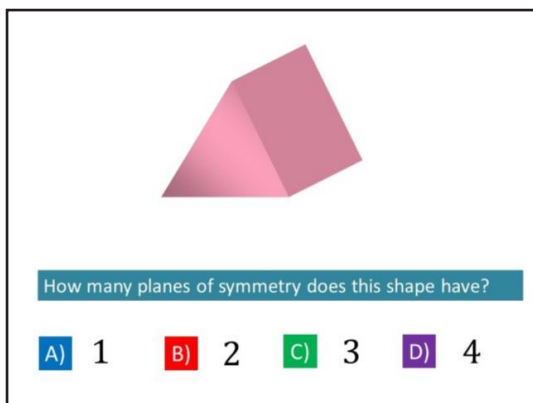
.....

.....

.....

.....

.....



Correct Answer: A B C D

Explanation:

.....

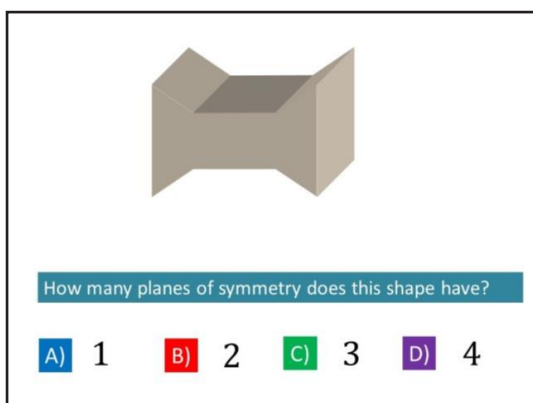
.....

.....

.....

.....

.....



Correct Answer: A B C D

Explanation:

.....

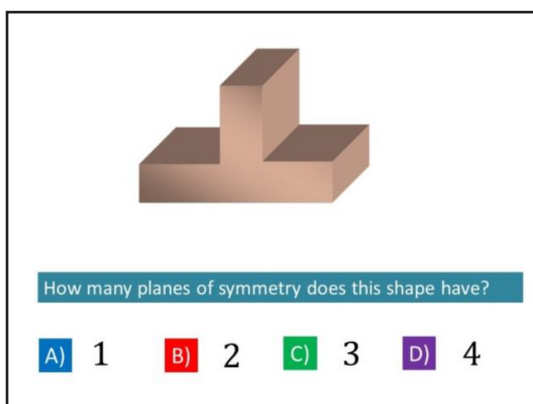
.....

.....

.....

.....

.....



Correct Answer: A B C D

Explanation:

.....

.....

.....

.....

.....

.....