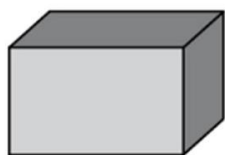




New Maths GCSE: G12 - Names of 3D Shapes

Name:.....

Date:.....



What is the name of this shape?

- | | | | |
|-------------------------|--------|-------------------------|-----------|
| <input type="radio"/> A | Cuboid | <input type="radio"/> B | Rectangle |
| <input type="radio"/> C | Cube | <input type="radio"/> D | Square |

Correct Answer: A B C D

Explanation:

.....

.....

.....

.....

.....

.....



What is the name of this shape?

- | | | | |
|-------------------------|--------|-------------------------|------------|
| <input type="radio"/> A | Sphere | <input type="radio"/> B | Hemisphere |
| <input type="radio"/> C | Cone | <input type="radio"/> D | Cylinder |

Correct Answer: A B C D

Explanation:

.....

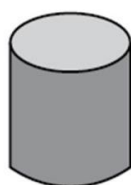
.....

.....

.....

.....

.....



What is the name of this shape?

- | | | | |
|-------------------------|--------|-------------------------|----------|
| <input type="radio"/> A | Sphere | <input type="radio"/> B | Circle |
| <input type="radio"/> C | Cone | <input type="radio"/> D | Cylinder |

Correct Answer: A B C D

Explanation:

.....

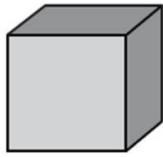
.....

.....

.....

.....

.....



What is the name of this shape?

- | | | | |
|-------------------------|--------|-------------------------|-----------|
| <input type="radio"/> A | Cube | <input type="radio"/> B | Square |
| <input type="radio"/> C | Cuboid | <input type="radio"/> D | Rectangle |

Correct Answer: A B C D

Explanation:

.....

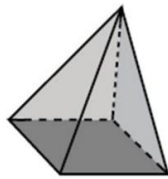
.....

.....

.....

.....

.....



What is the name of this shape?

- | | | | |
|-------------------------|------------------|-------------------------|----------------------|
| <input type="radio"/> A | Triangular Prism | <input type="radio"/> B | Square based pyramid |
| <input type="radio"/> C | Cone | <input type="radio"/> D | Rectangular Prism |

Correct Answer: A B C D

Explanation:

.....

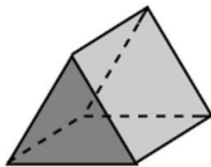
.....

.....

.....

.....

.....



What is the name of this shape?

- | | | | |
|-------------------------|------------------|-------------------------|-------------------|
| <input type="radio"/> A | Triangular Prism | <input type="radio"/> B | Triangle |
| <input type="radio"/> C | Pyramid | <input type="radio"/> D | Rectangular Prism |

Correct Answer: A B C D

Explanation:

.....

.....

.....

.....

.....

.....



What is the name of this shape?

- | | | | |
|-------------------------|------------------|-------------------------|--------------------------|
| <input type="radio"/> A | Triangular Prism | <input type="radio"/> B | Cone |
| <input type="radio"/> C | Triangle | <input type="radio"/> D | Triangular based Pyramid |

Correct Answer: A B C D

Explanation:

.....

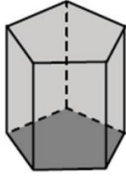
.....

.....

.....

.....

.....



What is the name of this shape?

- | | | | |
|----------|-----------------|----------|-------------------|
| A | Hexagonal Prism | B | Pentagonal Prism |
| C | Octagonal Prism | D | Rectangular Prism |

Correct Answer: A B C D

Explanation:

.....

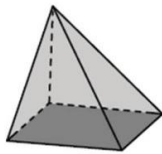
.....

.....

.....

.....

.....



What is the name of this shape?

- | | | | |
|----------|----------------------|----------|---------------------------|
| A | Square based Pyramid | B | Rectangular based Pyramid |
| C | Rectangle Prism | D | Square Prism |

Correct Answer: A B C D

Explanation:

.....

.....

.....

.....

.....

.....



What is the name of this shape?

- | | | | |
|----------|-----------------|----------|-------------------|
| A | Hexagonal Prism | B | Pentagonal Prism |
| C | Octagonal Prism | D | Rectangular Prism |

Correct Answer: A B C D

Explanation:

.....

.....

.....

.....

.....

.....