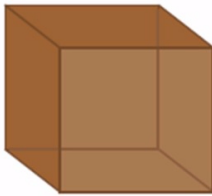




New Maths GCSE: G12 - Faces, Edges and Vertices

Name:

Date:



How many faces does this shape have?

A4

B6

C8

D12

Correct Answer: A B C D

Explanation:

.....


.....

.....

.....

.....

.....



How many edges does this shape have?

A5

B6

C7

D8

Correct Answer: A B C D

Explanation:

.....


.....

.....

.....

.....

.....



How many vertices does this shape have?

A6

B3

C12

D9

Correct Answer: A B C D

Explanation:

.....

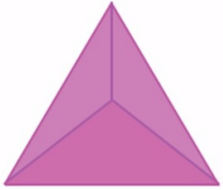
.....

.....

.....

.....

.....



How many faces does this shape have?

A	3	B	4
C	5	D	6

Correct Answer: A B C D

Explanation:

.....


.....

.....

.....

.....

.....



How many edges does this shape have?

A	12	B	16
C	18	D	24

Correct Answer: A B C D

Explanation:

.....


.....

.....

.....

.....

.....



How many vertices does this shape have?

A	1	B	5
C	6	D	10

Correct Answer: A B C D

Explanation:

.....


.....

.....

.....

.....

.....



How many faces does this shape have?

A	3	B	4
C	5	D	9

Correct Answer: A B C D

Explanation:

.....

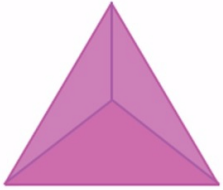
.....

.....

.....

.....

.....



How many edges does this shape have?

A	3	B	4
C	5	D	6

Correct Answer: A B C D

Explanation:

.....

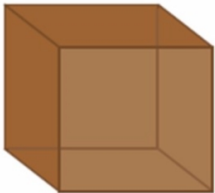
.....

.....

.....

.....

.....



How many vertices does this shape have?

A	4	B	6
C	8	D	12

Correct Answer: A B C D

Explanation:

.....


.....

.....

.....

.....

.....



How many edges does this shape have?

A	12	B	5
C	7	D	10

Correct Answer: A B C D

Explanation:

.....

.....

.....

.....

.....

.....