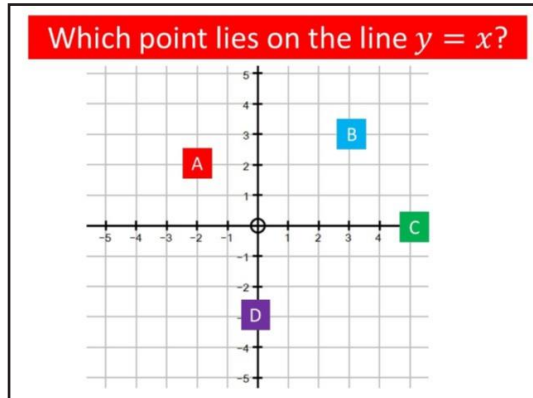




New Maths GCSE: A9 - Points on a Line

Name:

Date:



Correct Answer: A B C D

Explanation:

.....

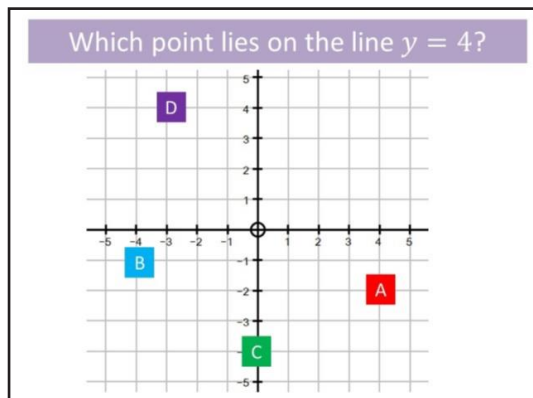
.....

.....

.....

.....

.....



Correct Answer: A B C D

Explanation:

.....

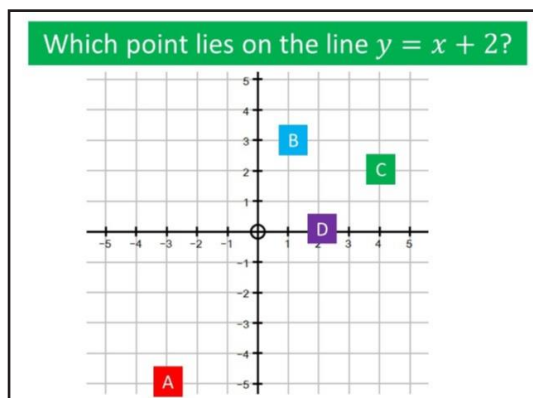
.....

.....

.....

.....

.....



Correct Answer: A B C D

Explanation:

.....

.....

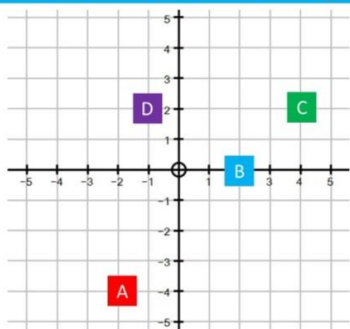
.....

.....

.....

.....

Which point lies on the line $y = 2x$?



Correct Answer: A B C D

Explanation:

.....

.....

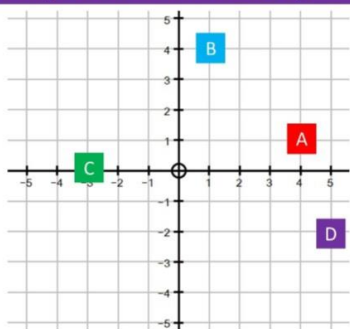
.....

.....

.....

.....

Which point lies on the line $y = 3 - x$?



Correct Answer: A B C D

Explanation:

.....

.....

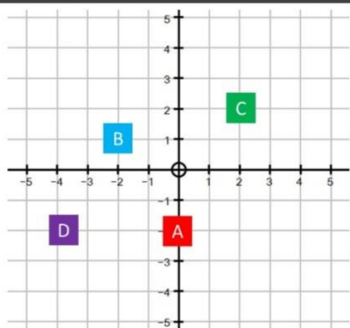
.....

.....

.....

.....

Which point lies on the line $x = -2$?



Correct Answer: A B C D

Explanation:

.....

.....

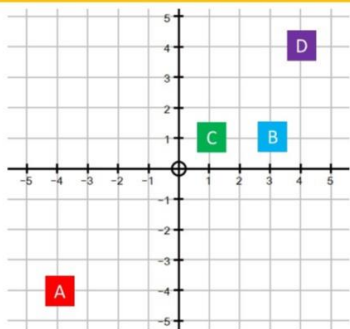
.....

.....

.....

.....

Which point lies on the line $x + y = 4$?



Correct Answer: A B C D

Explanation:

.....

.....

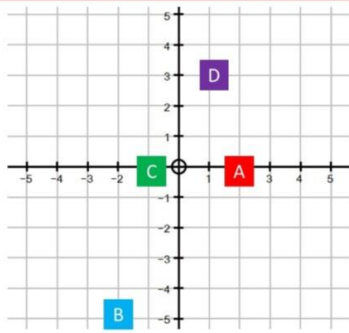
.....

.....

.....

.....

Which point lies on the line $y = 2x - 1$?



Correct Answer: A B C D

Explanation:

.....

.....

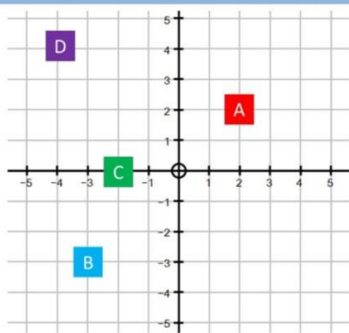
.....

.....

.....

.....

Which point lies on the line $y = -x$?



Correct Answer: A B C D

Explanation:

.....

.....

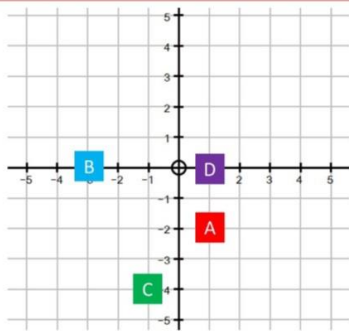
.....

.....

.....

.....

Which point lies on the line $y = -3x + 1$?



Correct Answer: A B C D

Explanation:

.....

.....

.....

.....

.....

.....