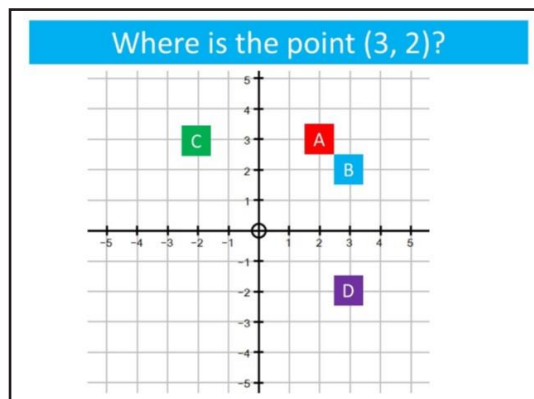




## New Maths GCSE: A8 - 2D Co-ordinates

Name: .....

Date: .....



Correct Answer: A B C D

Explanation:

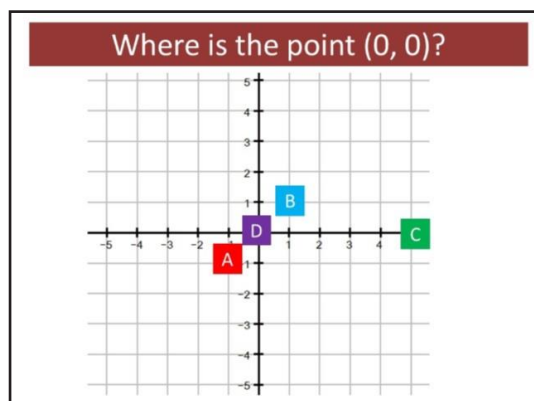
.....

.....

.....

.....

.....



Correct Answer: A B C D

Explanation:

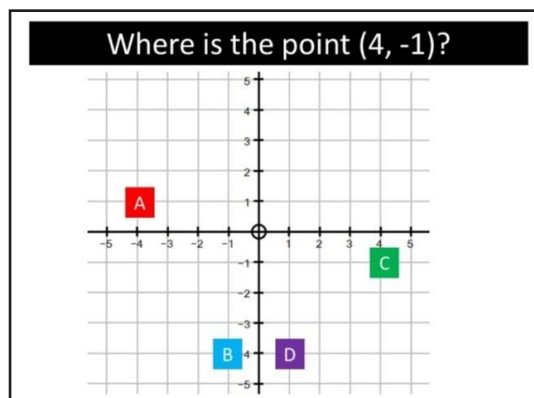
.....

.....

.....

.....

.....



Correct Answer: A B C D

Explanation:

.....

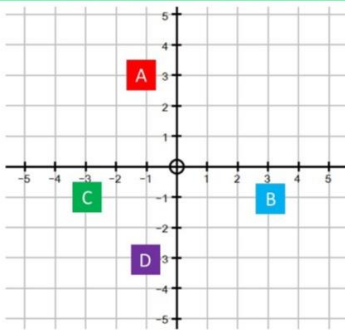
.....

.....

.....

.....

Where is the point  $(-1, -3)$ ?



Correct Answer: A B C D

Explanation:

.....

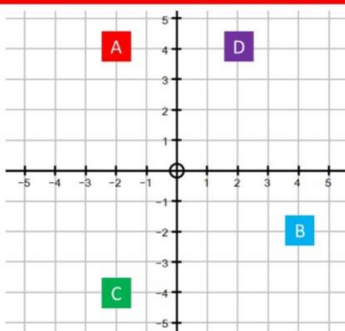
.....

.....

.....

.....

Where is the point  $(-2, 4)$ ?



Correct Answer: A B C D

Explanation:

.....

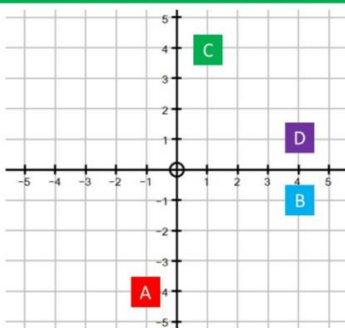
.....

.....

.....

.....

Where is the point  $(1, 4)$ ?



Correct Answer: A B C D

Explanation:

.....

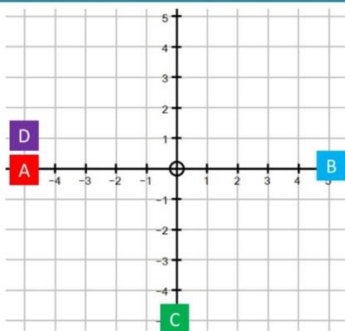
.....

.....

.....

.....

Where is the point  $(-5, 0)$ ?



Correct Answer: A B C D

Explanation:

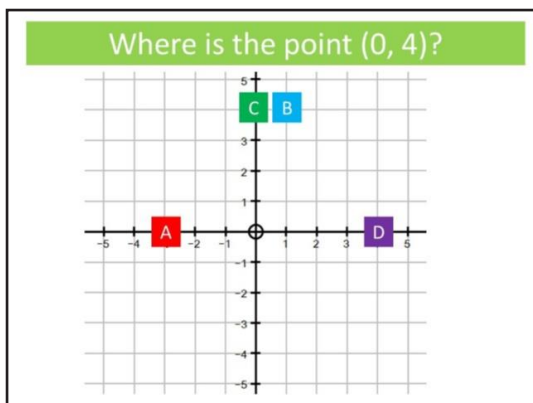
.....

.....

.....

.....

.....



Correct Answer: A B C D

Explanation:

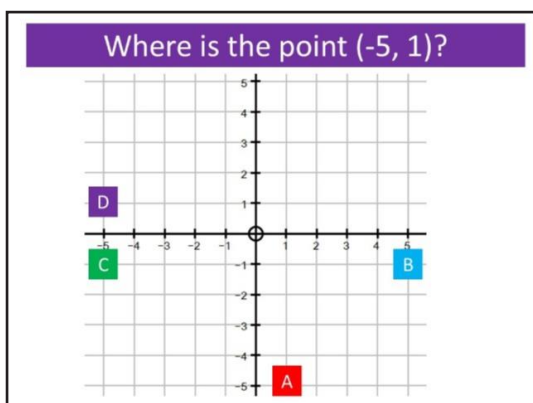
.....

.....

.....

.....

.....



Correct Answer: A B C D

Explanation:

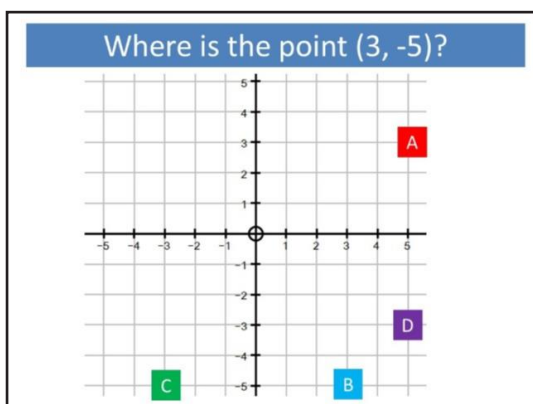
.....

.....

.....

.....

.....



Correct Answer: A B C D

Explanation:

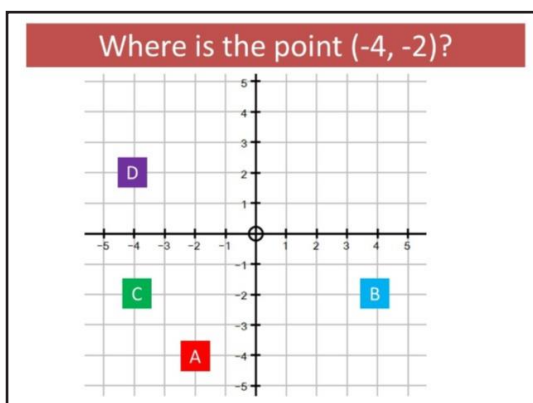
.....

.....

.....

.....

.....



Correct Answer: A B C D

Explanation:

.....

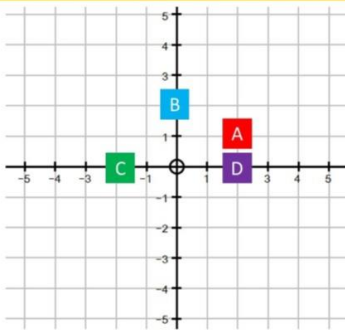
.....

.....

.....

.....

Where is the point  $(2, 0)$ ?



Correct Answer: A B C D

Explanation:

.....

.....

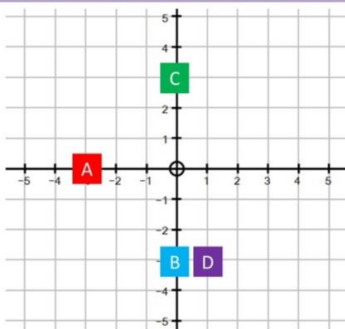
.....

.....

.....

.....

Where is the point  $(0, -3)$ ?



Correct Answer: A B C D

Explanation:

.....

.....

.....

.....

.....

.....