




GCSE Maths Takeaway 28 - Ratio

Name:.....

Date:.....

What is the ratio of triangles to squares?



a) 3 : 7 b) 3 : 4
c) 4 : 3 d) 7 : 3

Correct Answer: A B C D

Explanation:

.....
.....
.....
.....
.....

Simplify the ratio

9 : 12





A **B** **C** **D**
1 : 4 **3 : 4** **4.5 : 6** **1 : 3**

Correct Answer: A B C D

Explanation:

.....
.....
.....
.....
.....

Three quarters of the junior members of a tennis club are boys and the rest are girls.
What is the ratio of boys to girls?

A.  B. 
C.  D. 

Correct Answer: A B C D

Explanation:

.....
.....
.....
.....
.....

Share £80 in the ratio 1:4

A) £5 : £20
B) £15 : £65
C) £16 : £64
D) £64 : £16

Correct Answer: A B C D

Explanation:

.....
.....
.....
.....
.....
.....

The ratio of men to women at a party was 6 : 7, respectively.
There were 28 women. Calculate the number of people at the party.

(A) 24
(B) 28
(C) 52
(D) 104

Correct Answer: A B C D

Explanation:

.....
.....
.....
.....
.....
.....