



New Maths GCSE: N8 - Fractions of an Amount

Name:.....

Date:.....

$\frac{2}{5}$ of 15 =

A) 10	B) 3
C) 5	D) 6

Correct Answer: A B C D

Explanation:

.....

.....

.....

.....

.....

.....

What is..

$\frac{1}{4}$ of 60

A) 20	B) 15
C) 4	D) 12

www.coopsonline.co.uk

Correct Answer: A B C D

Explanation:

.....

.....

.....

.....

.....

.....

What is..

$\frac{3}{4}$ of 36

A) 32	B) 9
C) 18	D) 27

www.coopsonline.co.uk

Correct Answer: A B C D

Explanation:

.....

.....

.....

.....

.....

.....

What is..

$\frac{1}{3}$ of 36

A) B)

C) D)

www.coopsonline.co.uk

Correct Answer: A B C D

Explanation:

.....

.....

.....

.....

.....

.....

There are 30 children in a class. $\frac{2}{5}$ of the class are boys. How many girls are there?

A)12
B)6
C)15
D)18

Correct Answer: A B C D

Explanation:

.....

.....

.....

.....

.....

.....

In Mr Ang's class, $\frac{3}{5}$ of the pupils wore glasses.
18 pupils did not wear glasses.
How many pupils were there in Mr Ang's class?

A 6
 B 27
 C 30
 D 45

Correct Answer: A B C D

Explanation:

.....

.....

.....

.....

.....

.....

There are 40 children in a class. $\frac{3}{10}$ of the class like football. The rest of the class prefer tennis. How many more like tennis?

A)12
B)28
C)16
D)8

Correct Answer: A B C D

Explanation:

.....

.....

.....

.....


.....

.....

Fractions

Cory has 2 red crayons and 1 blue crayon.
What fraction of Cory's crayons is red?

- A. $\frac{1}{3}$
- B. $\frac{1}{2}$
- C. $\frac{2}{3}$
- D. $\frac{3}{2}$



Correct Answer: A B C D

Explanation:

.....

.....

.....

.....

.....

.....

John wins £200. He gives $\frac{1}{4}$ to his mother and $\frac{2}{5}$ to his girlfriend.
How much does he have left?

A. £50 B. £60

C. £70 D. £80

Correct Answer: A B C D

Explanation:

.....



.....

.....

.....

.....

.....

$$\frac{3}{4} \text{ of } 100 = \frac{1}{2} \text{ of } \quad$$

A: 100 B: 37.5

C: 75 D: 150

Correct Answer: A B C D

Explanation:

.....

.....

.....

.....

.....

.....