





GCSE Maths Takeaway 30 - Calculator Use


Name:.....


Date:.....


Which button do you press if you want to type in a fraction?

A) 

B) 

C) 

D) 



Correct Answer: A B C D

Explanation:

.....

.....


.....


.....


.....


.....


Which button do you press to raise a number to a power?

A) 

B) 

C) 

D) 



Correct Answer: A B C D

Explanation:

.....

.....

.....

.....

.....

.....

$$\sqrt{\frac{2 + 4^2}{8 - 2 \times 3}} = ?$$

a) 1	b) 3
c) 0	d) 4

Correct Answer: A B C D

Explanation:

.....

.....

.....

.....

.....

.....

By rounding each number to one significant figure, which is the correct estimation of the following calculation:

$$\frac{5.46 \times 3.82}{8.61^2}$$

A $\frac{5.4 \times 3.8}{8.6^2}$

B $\frac{5 \times 3}{8^2}$

C $\frac{5.5 \times 3.8}{8.6^2}$

D $\frac{5 \times 4}{9^2}$

Correct Answer: A B C D

Explanation:

.....

.....

.....

.....

.....

.....

What would answer would your calculator give if you typed in:

$$-6^2$$

A) 12

B) -12

C) 36

D) -36



Correct Answer: A B C D

Explanation:

.....

.....

.....

.....

.....

.....