



New Maths GCSE: N1 - Reading Decimal Scales - Negative

Name:.....

Date:.....

What number is the arrow pointing to?

A) -11 B) -10.5
C) -10.25 D) -10.1

Designed using:
Autograph

Correct Answer: A B C D

Explanation:

.....
.....
.....
.....
.....
.....

What number is the arrow pointing to?

A) -12 B) -11.2
C) -10 D) -11.5

Designed using:
Autograph

Correct Answer: A B C D

Explanation:

.....
.....
.....
.....
.....
.....

What number is the arrow pointing to?

A) -8.75 B) -8.9
C) -8.5 D) -9.25


Designed using:
Autograph

Correct Answer: A B C D

Explanation:

.....
.....
.....
.....
.....
.....

What number is the arrow pointing to?



A) -3.2 B) -3.4
C) -3.5 D) -4.5

Designed using:
Autograph

Correct Answer: A B C D

Explanation:

.....

.....

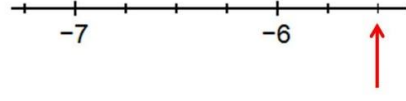
.....

.....

.....

.....

What number is the arrow pointing to?



A) -6.2 B) -6.5
C) -5.5 D) -5.8

Designed using:
Autograph

Correct Answer: A B C D

Explanation:

.....

.....


.....

.....

.....

.....

What number is the arrow pointing to?



A) -8.2 B) -7.8
C) -7 D) -8.1

Designed using:
Autograph

Correct Answer: A B C D

Explanation:

.....

.....

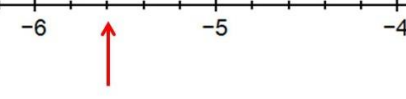
.....

.....

.....

.....

What number is the arrow pointing to?



A) -6.2 B) -6.4
C) -5.5 D) -5.6

Designed using:
Autograph

Correct Answer: A B C D

Explanation:

.....

.....

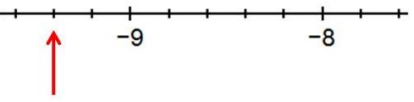
.....

.....

.....

.....

What number is the arrow pointing to?



A) -9.5 B) -9.2
C) -9.4 D) -10

Designed using:
Autograph

Correct Answer: A B C D

Explanation:

.....

.....

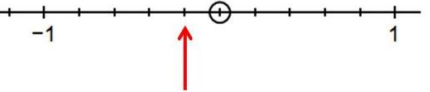
.....

.....

.....

.....

What number is the arrow pointing to?



A) 0.1 B) -0.1
C) -0.2 D) -0.25

Designed using:
Autograph

Correct Answer: A B C D

Explanation:

.....

.....

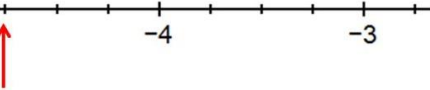
.....

.....

.....

.....

What number is the arrow pointing to?



A) -5 B) -4.3
C) -4.6 D) -4.75

Designed using:
Autograph

Correct Answer: A B C D

Explanation:

.....

.....

.....

.....

.....

.....