



New Maths GCSE: N1 & G14 - Reading Decimal Scales - Positive

Name:.....

Date:.....

What number is the arrow pointing to?

A) 6.5 B) 6.1
C) 6.25 D) 7

Designed using:
Autograph

Correct Answer: A B C D

Explanation:

.....
.....
.....
.....
.....
.....

What number is the arrow pointing to?

A) 10 B) 9.5
C) 9.2 D) 10.5

Designed using:
Autograph

Correct Answer: A B C D

Explanation:

.....
.....
.....
.....
.....

What number is the arrow pointing to?

A) 4.75 B) 4.8
C) 4.9 D) 5.25

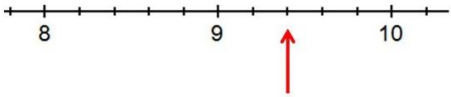
Designed using:
Autograph

Correct Answer: A B C D

Explanation:

.....
.....
.....
.....
.....

What number is the arrow pointing to?



A) 9.2 B) 9.4
C) 9.5 D) 9.02

Designed using:
Autograph

Correct Answer: A B C D

Explanation:

.....

.....

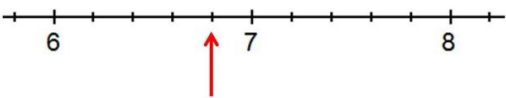
.....

.....

.....

.....

What number is the arrow pointing to?



A) 6.9 B) 6.8
C) 6.75 D) 7.1

Designed using:
Autograph

Correct Answer: A B C D

Explanation:

.....

.....

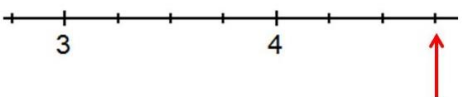
.....

.....

.....

.....

What number is the arrow pointing to?



A) 4.3 B) 4.75
C) 4.6 D) 5

Designed using:
Autograph

Correct Answer: A B C D

Explanation:

.....

.....

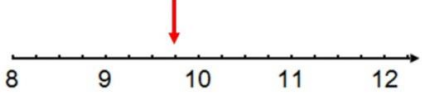
.....

.....

.....

.....

What number is the arrow pointing to?



a) 9.9 b) 9.8
c) 9.75 d) 9.3

Designed using:
Autograph

Correct Answer: A B C D

Explanation:

.....

.....

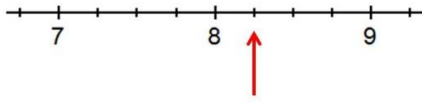
.....

.....

.....

.....

What number is the arrow pointing to?



- A) 8.1 B) 8.2
- C) 8.25 D) 8.3

Designed using: **Autograph**

Correct Answer: A B C D

Explanation:

.....

.....

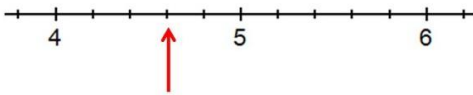
.....

.....

.....

.....

What number is the arrow pointing to?



- A) 4.6 B) 4.75
- C) 4.5 D) 4.3

Designed using: **Autograph**

Correct Answer: A B C D

Explanation:

.....

.....

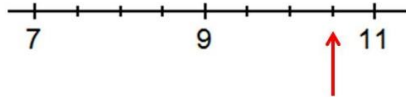
.....

.....

.....

.....

What number is the arrow pointing to?



- A) 9.9 B) 10.75
- C) 10.5 D) 10

Designed using: **Autograph**

Correct Answer: A B C D

Explanation:

.....

.....

.....

.....

.....

.....