



# GCSE Maths Takeaway 1 - Place Value


Name:.....

Date:.....

**Place Value**

Which number has a 5 in the ten thousands place?

- A 104,352
- B 365,971
- C 582,607
- D 951,480



Correct Answer: A B C D

Explanation:

.....

.....

.....

.....


.....

.....

**Arithmetic**

What is another way to show 4,608?

- A  $46 + 8$
- B  $4,000 + 60 + 8$
- C  $4,000 + 600 + 8$
- D  $4,000 + 600 + 80$



Correct Answer: A B C D

Explanation:

.....

.....

.....

.....

.....

.....


**Place Value**

Connie lists her scores from a video game.

14,087 13,345 14,613 14,301

Which list shows the scores listed from greatest to least?

- A 14,613 13,345 14,301 14,087
- B 14,613 14,301 14,087 13,345
- C 14,087 14,613 14,301 13,345
- D 13,345 14,087 14,301 14,613



Correct Answer: A B C D

Explanation:

.....

.....

.....

.....

.....

.....

# Place Value

In the number 200.358, which digit is in the hundredths place?

- A. 2
- B. 3
- C. 5
- D. 8



Correct Answer: A B C D

Explanation:

.....

.....

.....

.....

.....

.....

Use the number below to answer the question.

107.792

Which statement about the two values of the digit 7 is correct?

- A. The value of the underlined 7 is 10 times less than the value of the other 7.
- B. The value of the underlined 7 is 100 times less than the value of the other 7.
- C. The value of the underlined 7 is 10 times more than the value of the other 7.
- D. The value of the underlined 7 is 100 times more than the value of the other 7.

Correct Answer: A B C D

Explanation:

.....

.....

.....

.....

.....

.....