



GCSE Maths Takeaway 2 - Ordering Numbers

Name:.....


Date:.....

Place Value

Connie lists her scores from a video game.
14,087 13,345 14,613 14,301

Which list shows the scores listed from greatest to least?

- 14,613 13,345 14,301 14,087
- 14,613 14,301 14,087 13,345
- 14,087 14,613 14,301 13,345
- 13,345 14,087 14,301 14,613



Correct Answer: A B C D

Explanation:

.....

.....

.....


.....


.....


.....


Place Value


A student creates a time line for a history project. Which shows a time line?

A. 

B. 

C. 

D. 



Correct Answer: A B C D

Explanation:

.....

.....

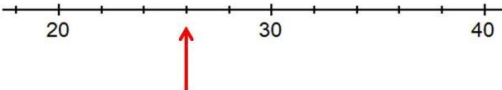
.....

.....

.....

.....

What number is the arrow pointing to?



A) 26 B) 23

C) 25 D) 28

Designed using: **Autograph**

Correct Answer: A B C D

Explanation:

.....

.....

.....

.....

.....

.....

Which of the following is true?

- A. $0.17 > 0.023$
- B. $0.091 < 0.023$
- C. $0.169 > 0.17$
- D. $0.17 < 0.091$

Correct Answer: A B C D

Explanation:

.....

.....

.....

.....

.....

.....

Which of these decimals is the largest?

A. 0.41	B. 0.4
C. 0.401	D. 0.041

Correct Answer: A B C D

Explanation:

.....

.....

.....

.....

.....

.....