



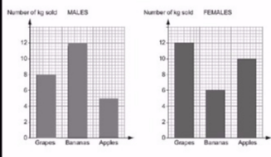
Exit Ticket Y1 - Bar Charts

Name:

Date:

Diagnostic Questions

A fruit shop owner is looking at the shopping habits of male and female customers. He shows his results on the bar charts below. Which is the most popular fruit?



Gender	Grapes	Bananas	Apples
Males	8	10	4
Females	10	4	8

A grapes
 B bananas
 C apples
 D cannot tell

Correct Answer: A B C D

Explanation:

.....

.....

.....

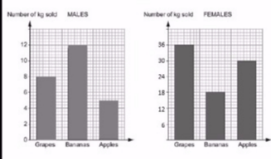
.....

.....

.....

Diagnostic Questions

A fruit shop owner is looking at the shopping habits of male and female customers. He shows his results on the bar charts below. How many more grapes did women buy than men?



Gender	Grapes	Bananas	Apples
Males	8	10	4
Females	10	4	8

A 4
 B 12
 C 28
 D 40

Correct Answer: A B C D

Explanation:

.....

.....

.....

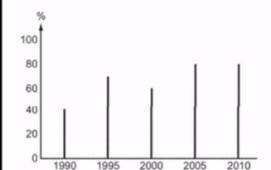
.....

.....

.....

Diagnostic Questions

The following graph was seen in a newspaper about the percentage of annual school exam pass rates between 1990 and 2010. Which statement is true?



Year	Pass Rate (%)
1990	40
1995	70
2000	60
2005	80
2010	80

A The percentage pass rate has remained constant between 2005 and 2010.
 B The number of students passing exams has increased between 2005 and 2010.
 C The number of students passing exams has remained constant between 2005 and 2010.
 D Not enough information

Correct Answer: A B C D

Explanation:

.....

.....

.....

.....

.....

.....