

What's the Sine Rule Ratio?

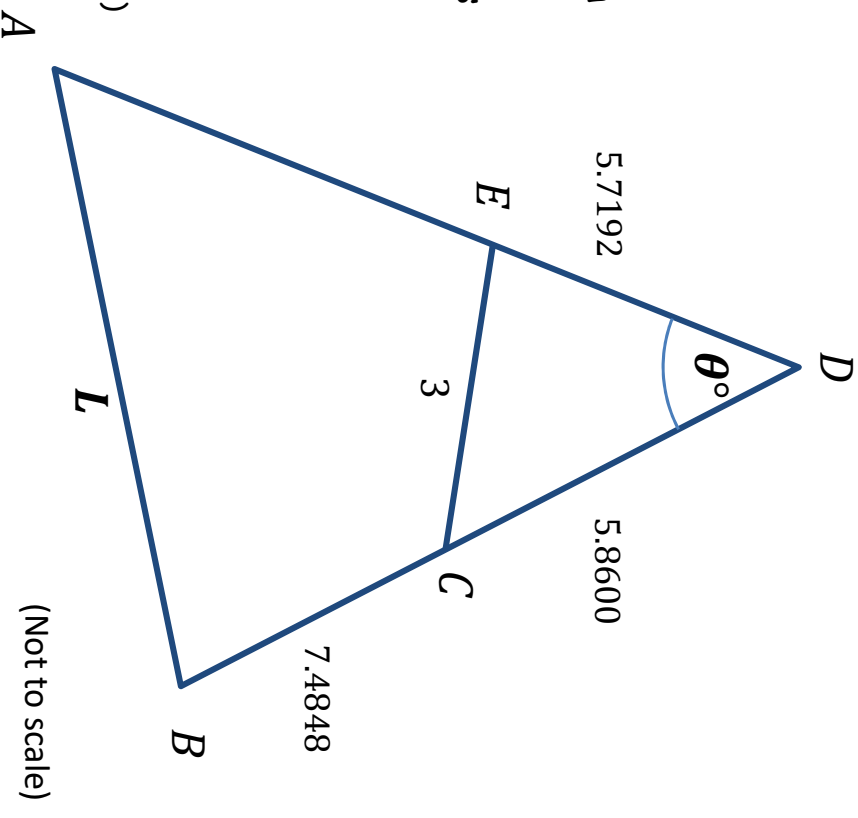
Triangle ABD is divided into two regions by straight line EC which is 3 units long.

The lengths of the line segments ED , DC and CB are shown.

Quadrilateral $ABCE$ is cyclic.

What is the value of $\frac{L}{\sin \theta}$?

(Give your answer to 4 significant figures.)



SIC_49

What's the Sine Rule Ratio?

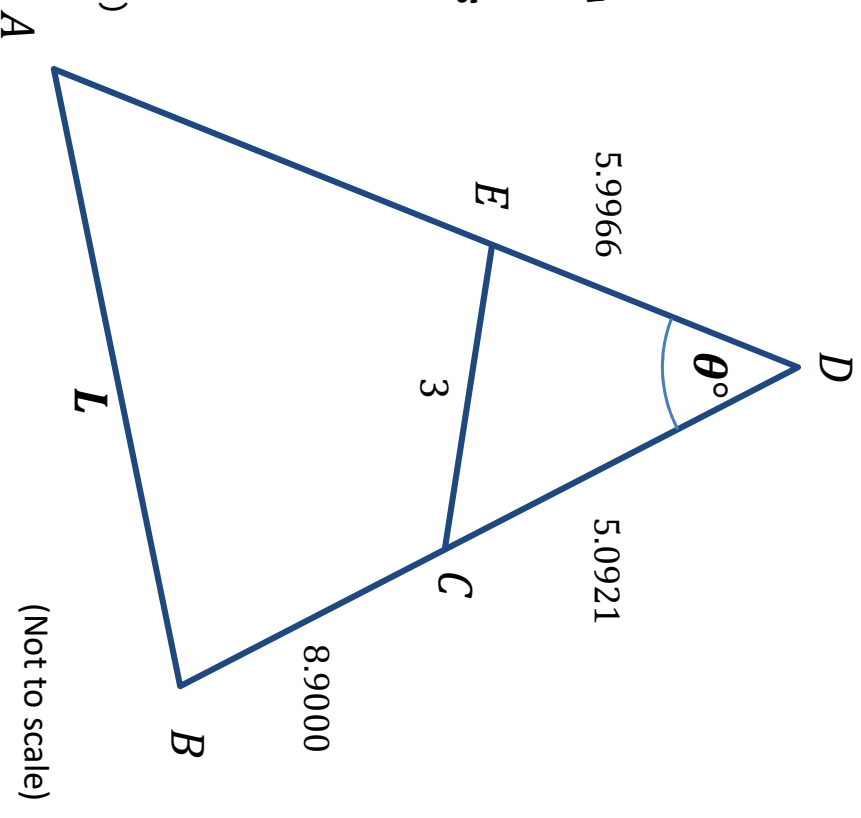
Triangle ABD is divided into two regions by straight line EC which is 3 units long.

The lengths of the line segments ED , DC and CB are shown.

Quadrilateral $ABCE$ is cyclic.

What is the value of $\frac{L}{\sin \theta}$?

(Give your answer to 4 significant figures.)



SIC_49

What's the Sine Rule Ratio?

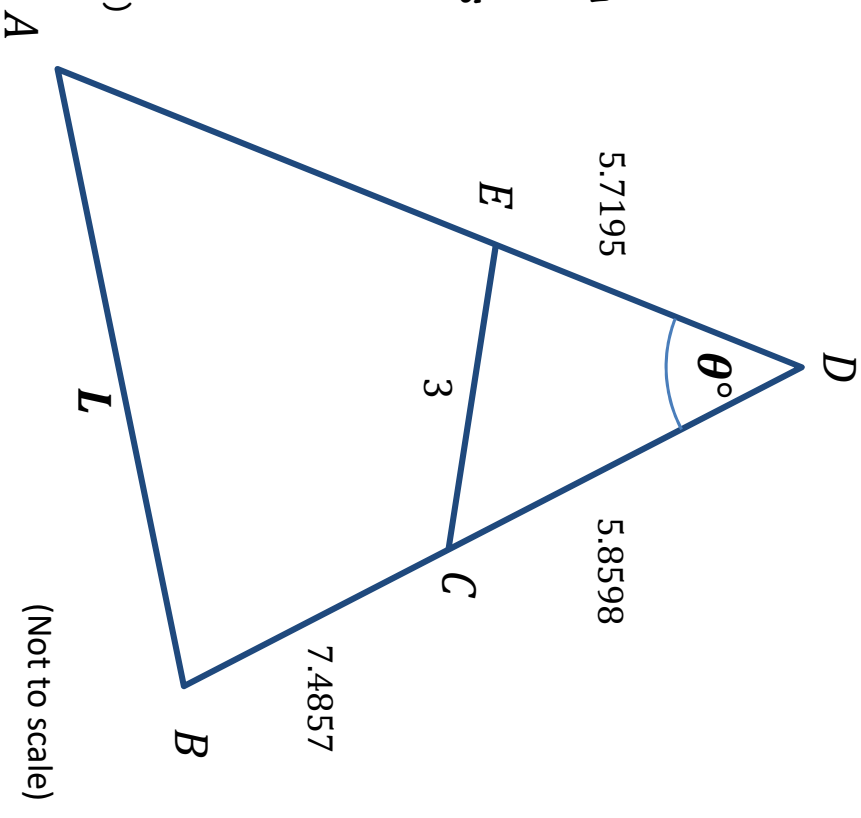
Triangle ABD is divided into two regions by straight line EC which is 3 units long.

The lengths of the line segments ED , DC and CB are shown.

Quadrilateral $ABCE$ is cyclic.

What is the value of $\frac{L}{\sin \theta}$?

(Give your answer to 4 significant figures.)



SIC_49

What's the Sine Rule Ratio?

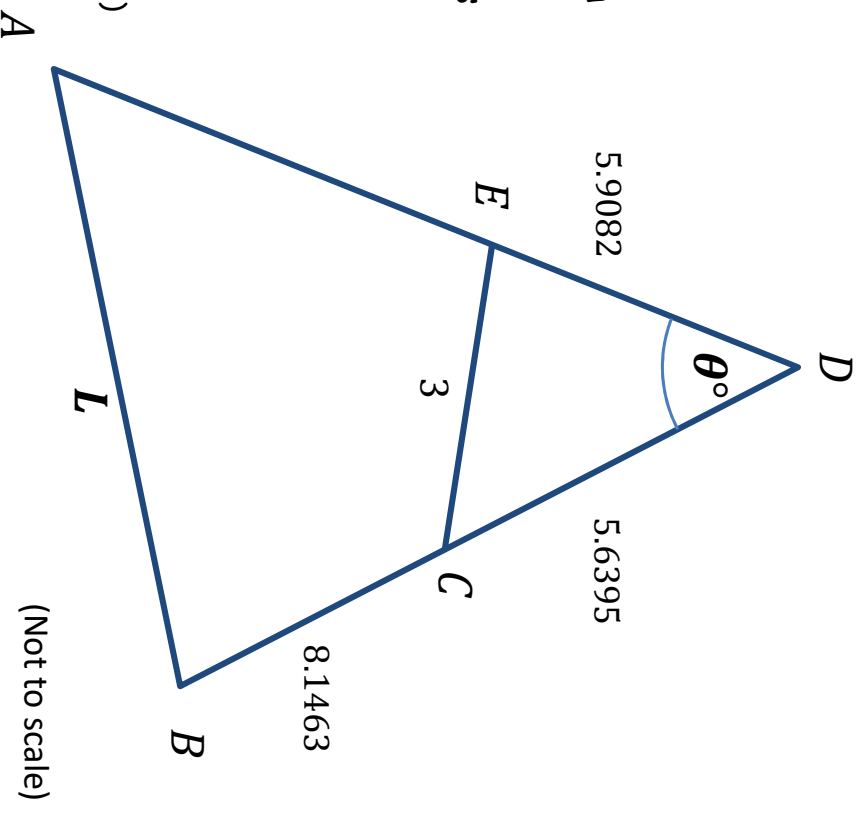
Triangle ABD is divided into two regions by straight line EC which is 3 units long.

The lengths of the line segments ED , DC and CB are shown.

Quadrilateral $ABCE$ is cyclic.

What is the value of $\frac{L}{\sin \theta}$?

(Give your answer to 4 significant figures.)



SIC_49

What's the Sine Rule Ratio?

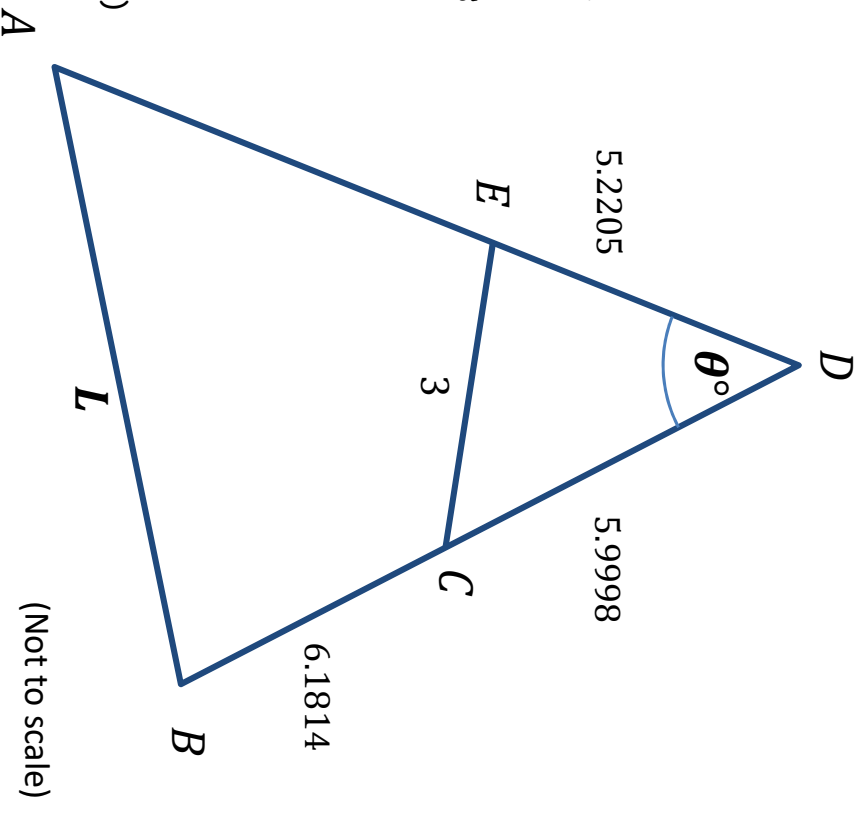
Triangle ABD is divided into two regions by straight line EC which is 3 units long.

The lengths of the line segments ED , DC and CB are shown.

Quadrilateral $ABCE$ is cyclic.

What is the value of $\frac{L}{\sin \theta}$?

(Give your answer to 4 significant figures.)



SIC_49

What's the Sine Rule Ratio?

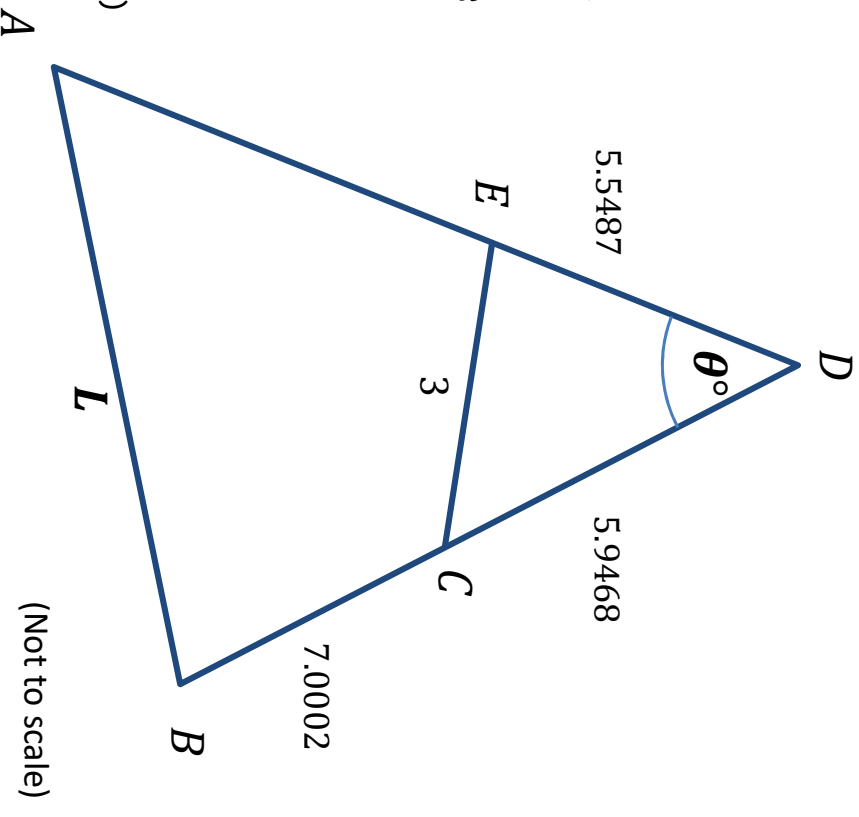
Triangle ABD is divided into two regions by straight line EC which is 3 units long.

The lengths of the line segments ED , DC and CB are shown.

Quadrilateral $ABCE$ is cyclic.

What is the value of $\frac{L}{\sin \theta}$?

(Give your answer to 4 significant figures.)



SIC_49

What's the Sine Rule Ratio?

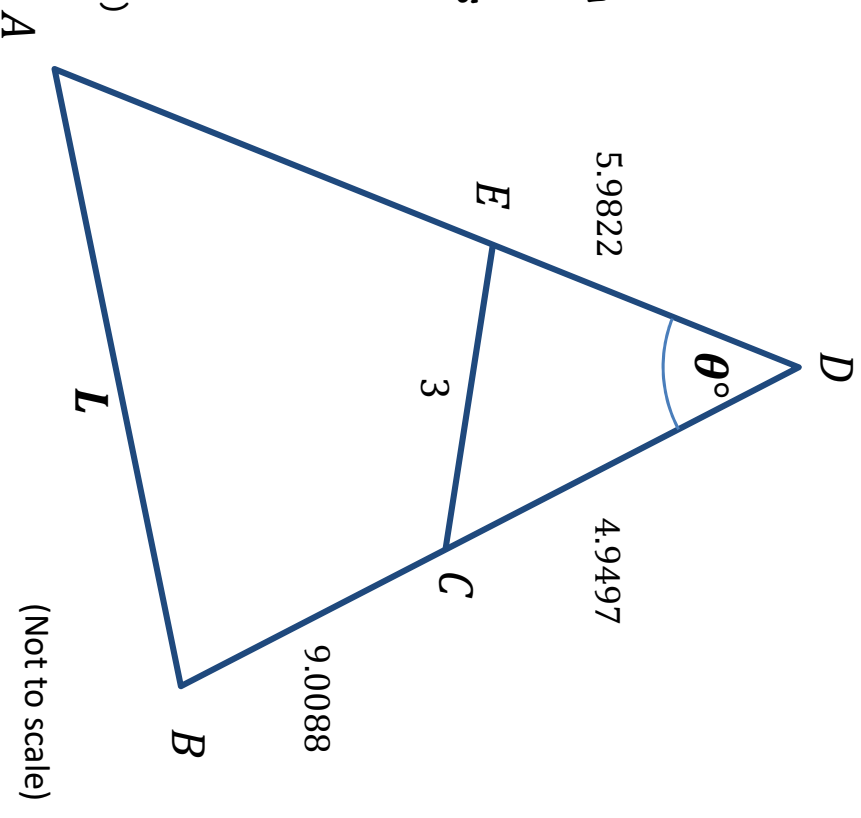
Triangle ABD is divided into two regions by straight line EC which is 3 units long.

The lengths of the line segments ED , DC and CB are shown.

Quadrilateral $ABCE$ is cyclic.

What is the value of $\frac{L}{\sin \theta}$?

(Give your answer to 4 significant figures.)



SIC_49

What's the Sine Rule Ratio?

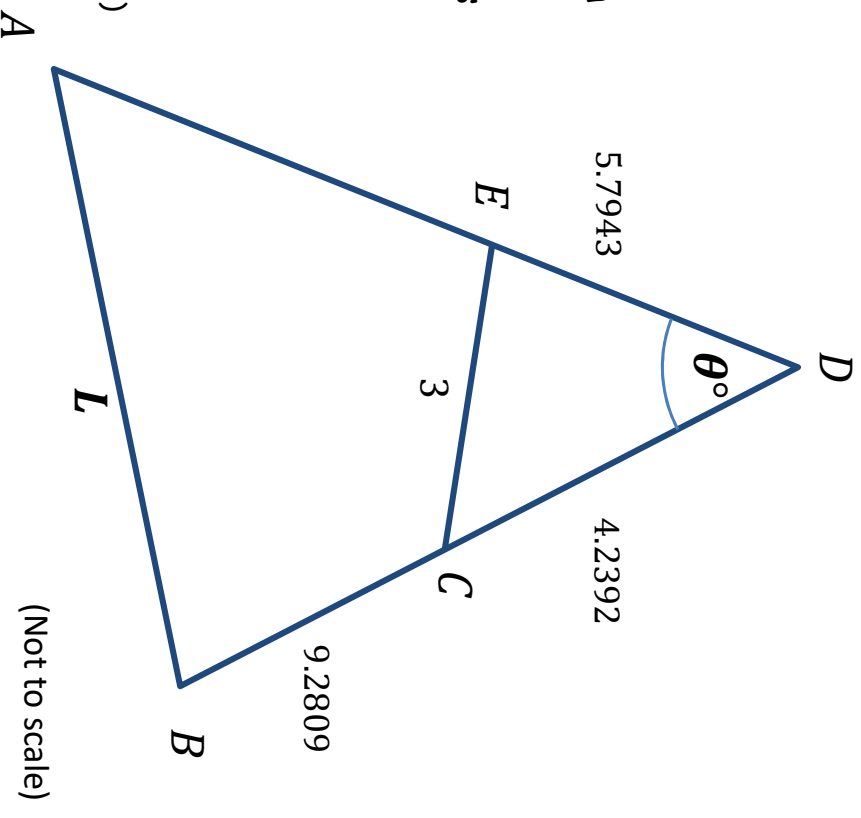
Triangle ABD is divided into two regions by straight line EC which is 3 units long.

The lengths of the line segments ED , DC and CB are shown.

Quadrilateral $ABCE$ is cyclic.

What is the value of $\frac{L}{\sin \theta}$?

(Give your answer to 4 significant figures.)



SIC_49

What's the Sine Rule Ratio?

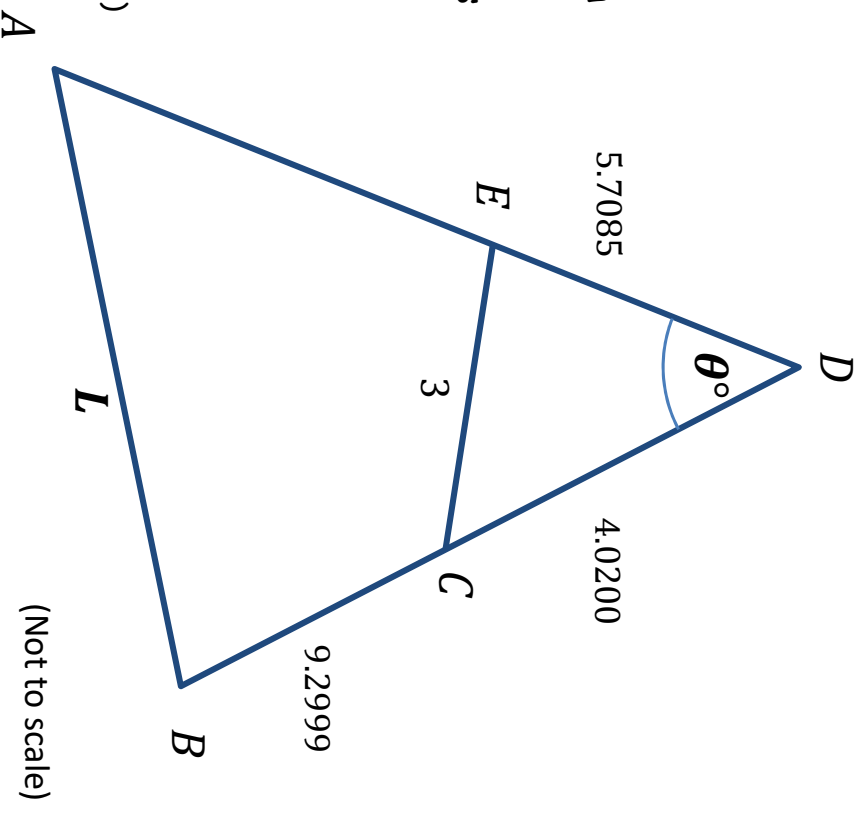
Triangle ABD is divided into two regions by straight line EC which is 3 units long.

The lengths of the line segments ED , DC and CB are shown.

Quadrilateral $ABCE$ is cyclic.

What is the value of $\frac{L}{\sin \theta}$?

(Give your answer to 4 significant figures.)



SIC_49

What's the Sine Rule Ratio?

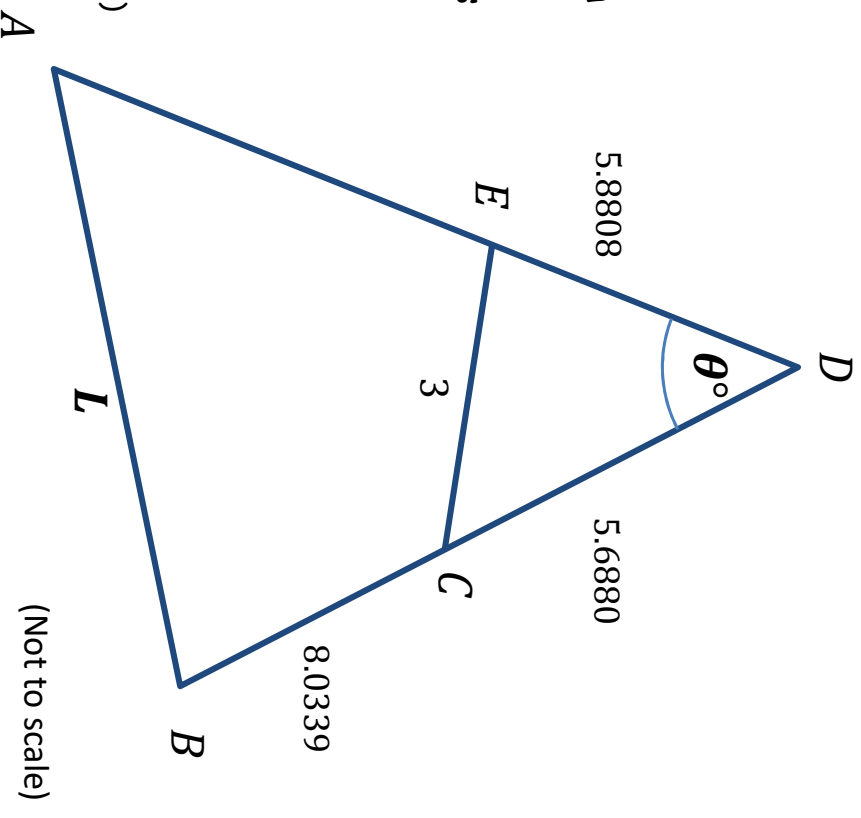
Triangle ABD is divided into two regions by straight line EC which is 3 units long.

The lengths of the line segments ED , DC and CB are shown.

Quadrilateral $ABCE$ is cyclic.

What is the value of $\frac{L}{\sin \theta}$?

(Give your answer to 4 significant figures.)



SIC_49

What's the Sine Rule Ratio?

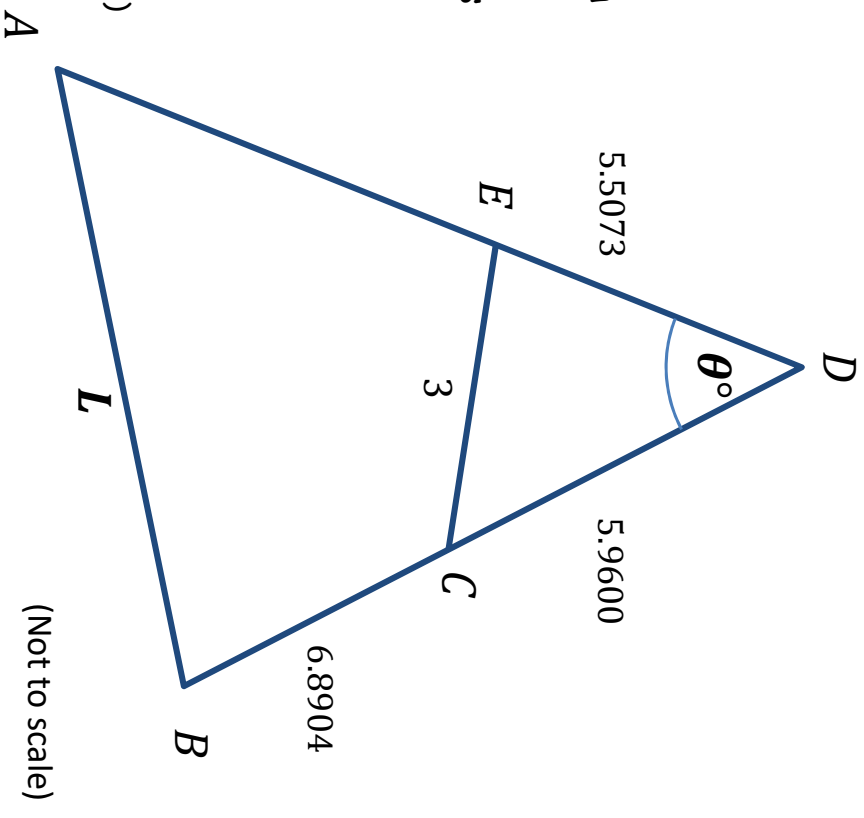
Triangle ABD is divided into two regions by straight line EC which is 3 units long.

The lengths of the line segments ED , DC and CB are shown.

Quadrilateral $ABCE$ is cyclic.

What is the value of $\frac{L}{\sin \theta}$?

(Give your answer to 4 significant figures.)



SIC_49

What's the Sine Rule Ratio?

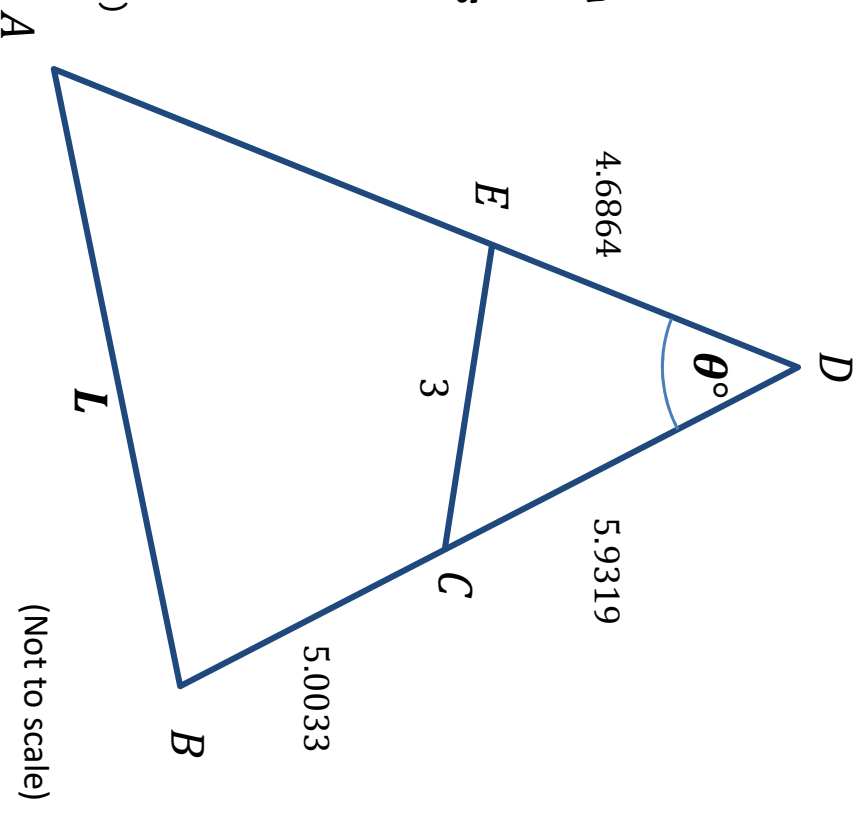
Triangle ABD is divided into two regions by straight line EC which is 3 units long.

The lengths of the line segments ED , DC and CB are shown.

Quadrilateral $ABCE$ is cyclic.

What is the value of $\frac{L}{\sin \theta}$?

(Give your answer to 4 significant figures.)



SIC_49

What's the Sine Rule Ratio?

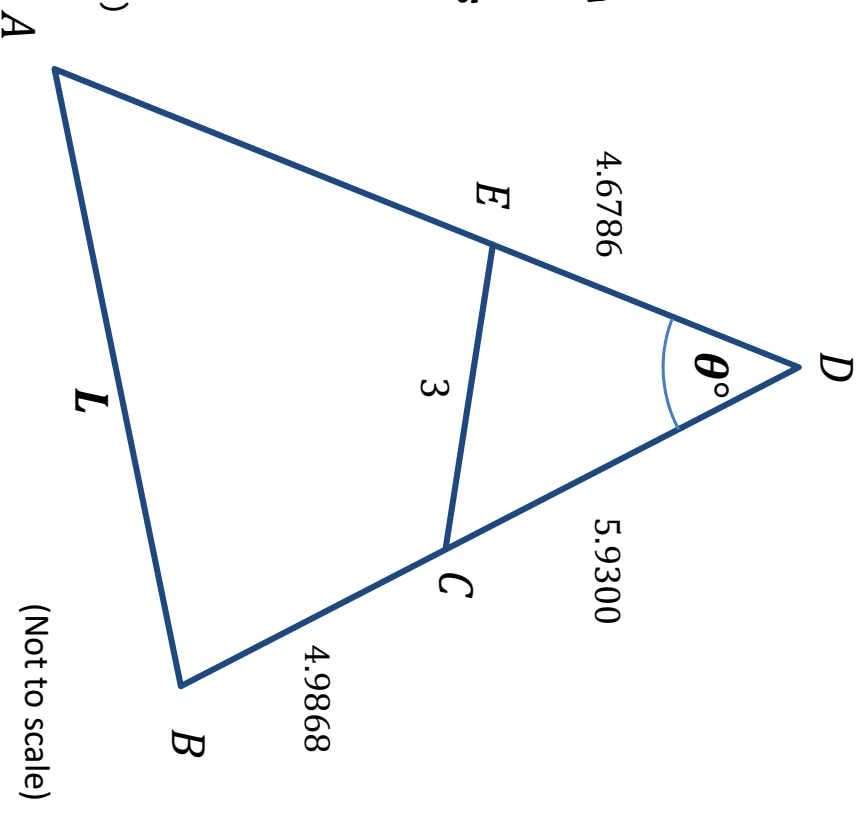
Triangle ABD is divided into two regions by straight line EC which is 3 units long.

The lengths of the line segments ED , DC and CB are shown.

Quadrilateral $ABCE$ is cyclic.

What is the value of $\frac{L}{\sin \theta}$?

(Give your answer to 4 significant figures.)



SIC_49

What's the Sine Rule Ratio?

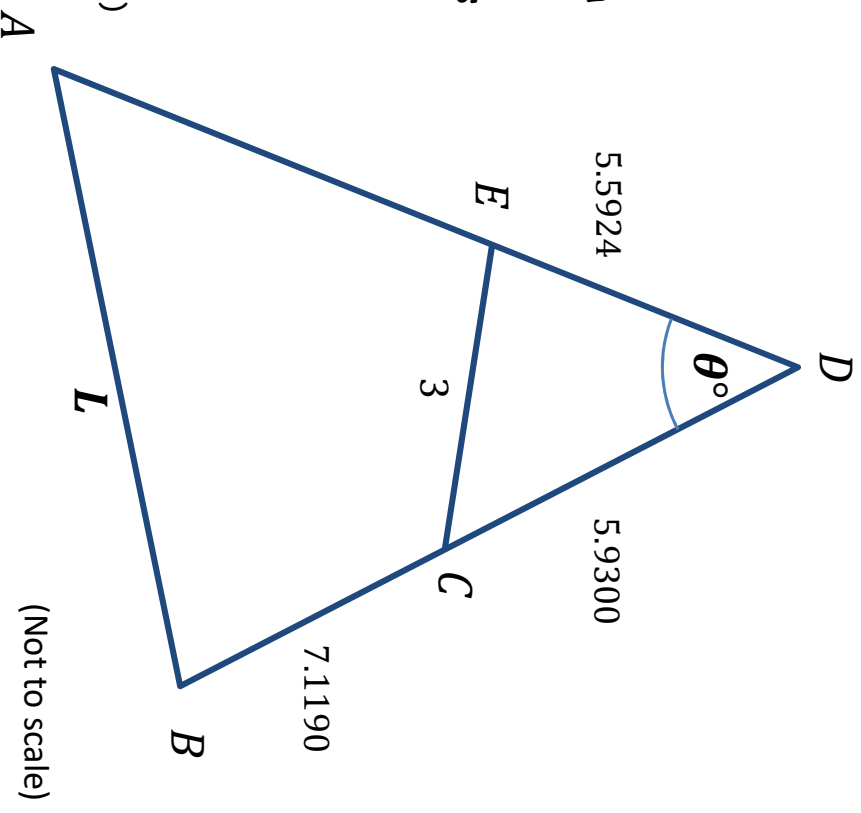
Triangle ABD is divided into two regions by straight line EC which is 3 units long.

The lengths of the line segments ED , DC and CB are shown.

Quadrilateral $ABCE$ is cyclic.

What is the value of $\frac{L}{\sin \theta}$?

(Give your answer to 4 significant figures.)



SIC_49