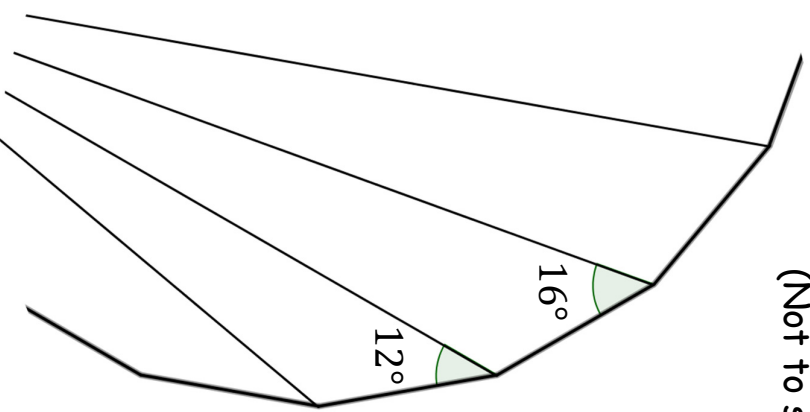


How Many Sides?

(Not to scale)

What you see here are the far ends of some of the diagonals from a single vertex of a regular polygon.

How many sides has the polygon?



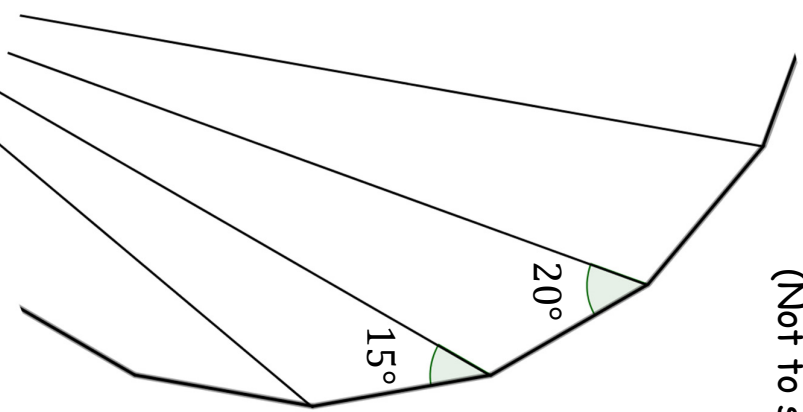
SIC_47

How Many Sides?

(Not to scale)

What you see here are the far ends of some of the diagonals from a single vertex of a regular polygon.

How many sides has the polygon?



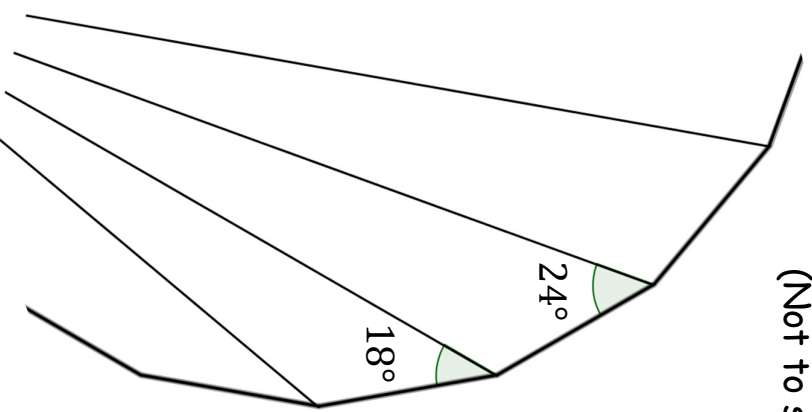
SIC_47

How Many Sides?

(Not to scale)

What you see here are the far ends of some of the diagonals from a single vertex of a regular polygon.

How many sides has the polygon?



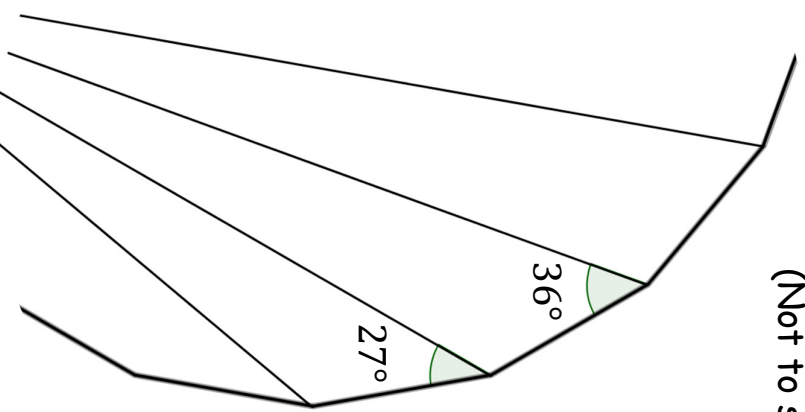
SIC_47

How Many Sides?

(Not to scale)

What you see here are the far ends of some of the diagonals from a single vertex of a regular polygon.

How many sides has the polygon?



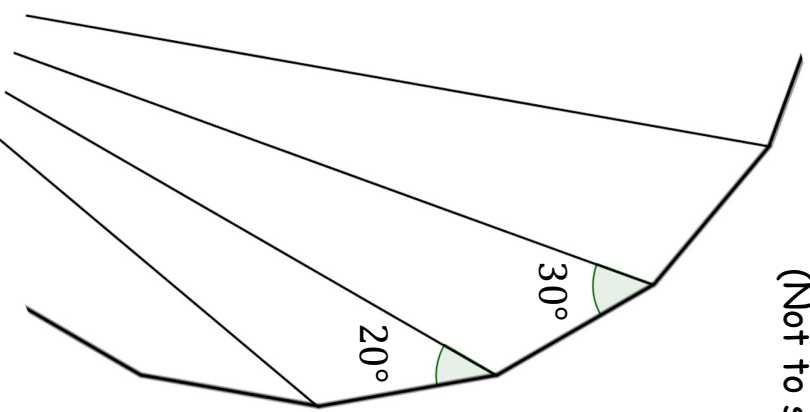
SIC_47

How Many Sides?

(Not to scale)

What you see here are the far ends of some of the diagonals from a single vertex of a regular polygon.

How many sides has the polygon?



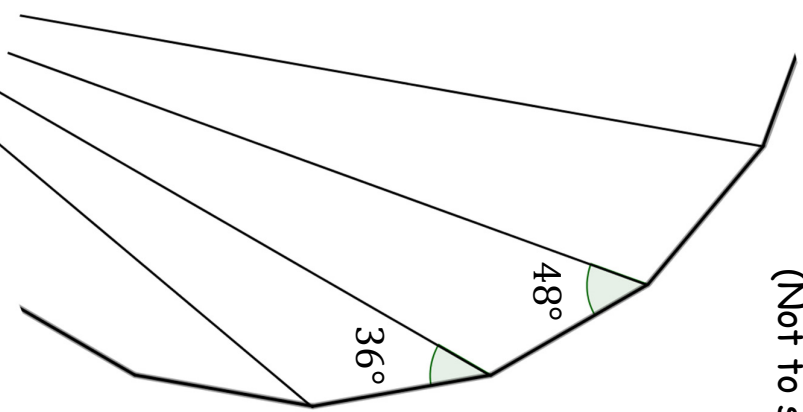
SIC_47

How Many Sides?

(Not to scale)

What you see here are the far ends of some of the diagonals from a single vertex of a regular polygon.

How many sides has the polygon?



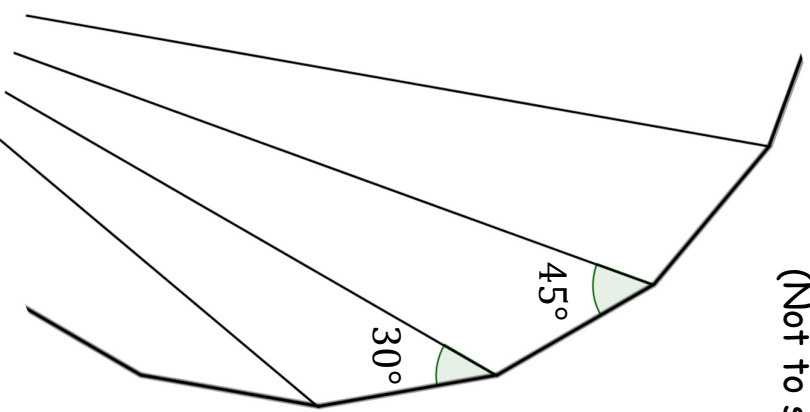
SIC_47

How Many Sides?

(Not to scale)

What you see here are the far ends of some of the diagonals from a single vertex of a regular polygon.

How many sides has the polygon?



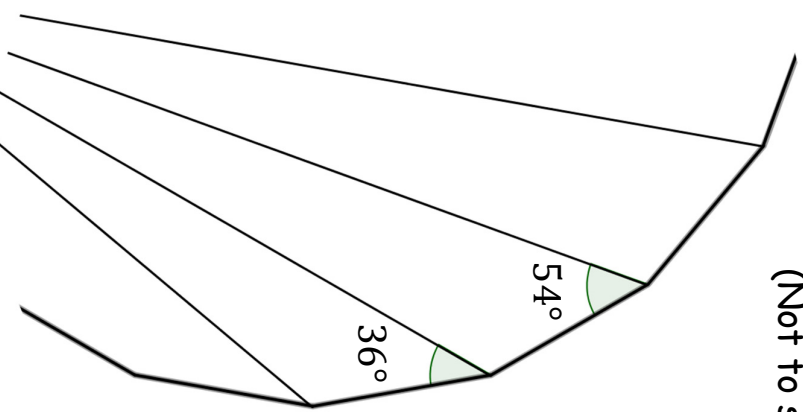
SIC_47

How Many Sides?

(Not to scale)

What you see here are the far ends of some of the diagonals from a single vertex of a regular polygon.

How many sides has the polygon?



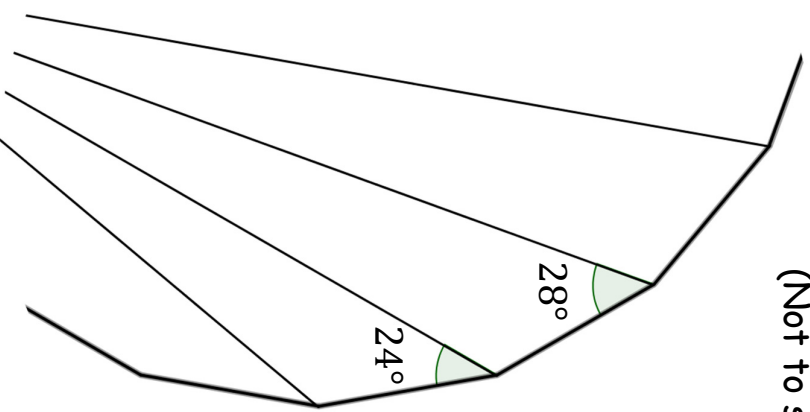
SIC_47

How Many Sides?

(Not to scale)

What you see here are the far ends of some of the diagonals from a single vertex of a regular polygon.

How many sides has the polygon?



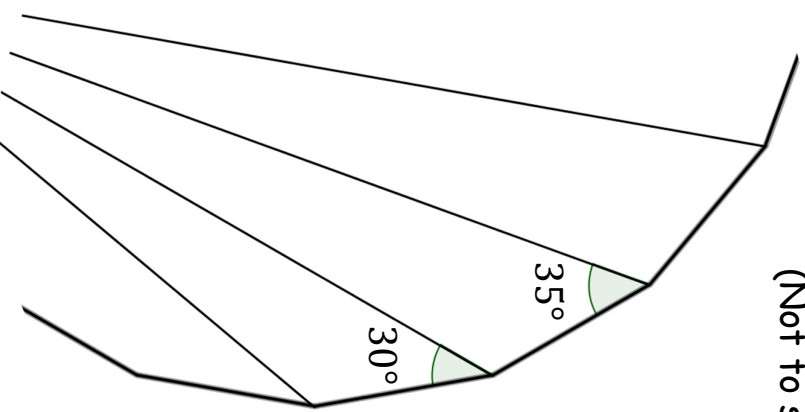
SIC_47

How Many Sides?

(Not to scale)

What you see here are the far ends of some of the diagonals from a single vertex of a regular polygon.

How many sides has the polygon?



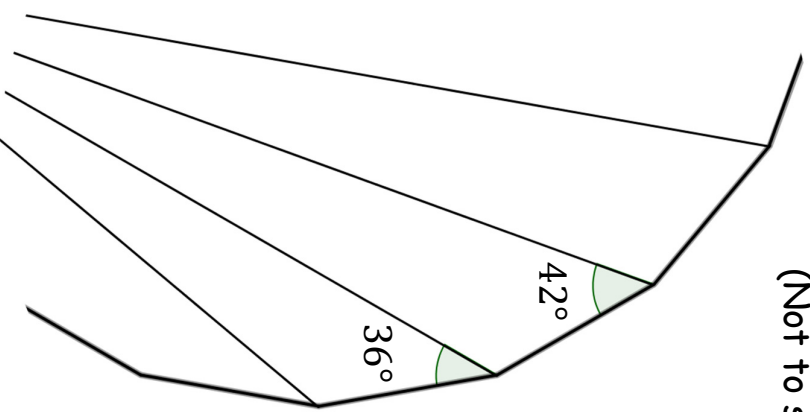
SIC_47

How Many Sides?

(Not to scale)

What you see here are the far ends of some of the diagonals from a single vertex of a regular polygon.

How many sides has the polygon?



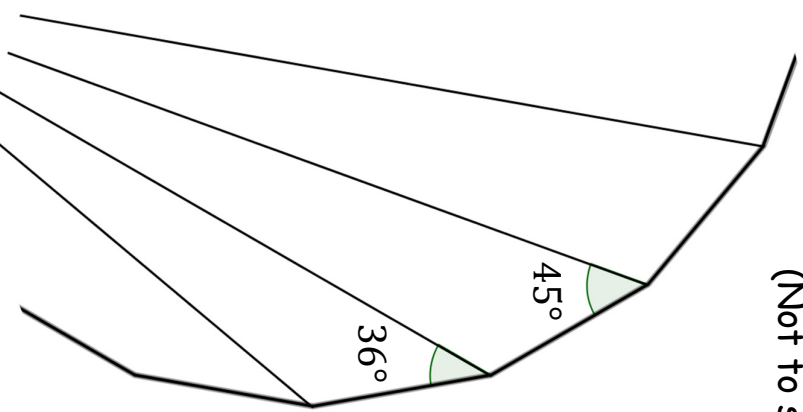
SIC_47

How Many Sides?

(Not to scale)

What you see here are the far ends of some of the diagonals from a single vertex of a regular polygon.

How many sides has the polygon?



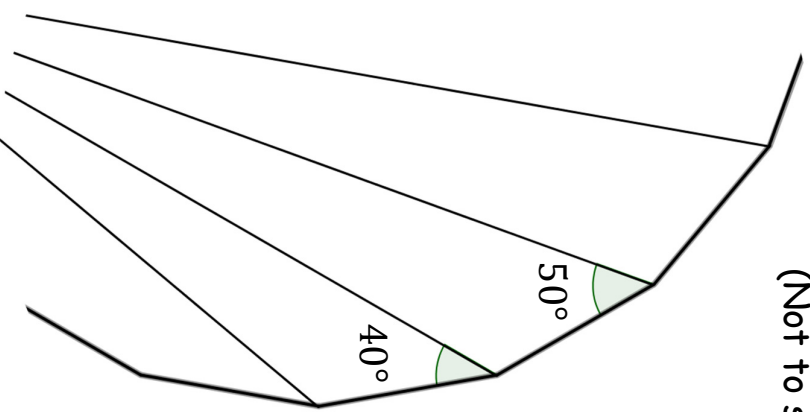
SIC_47

How Many Sides?

(Not to scale)

What you see here are the far ends of some of the diagonals from a single vertex of a regular polygon.

How many sides has the polygon?



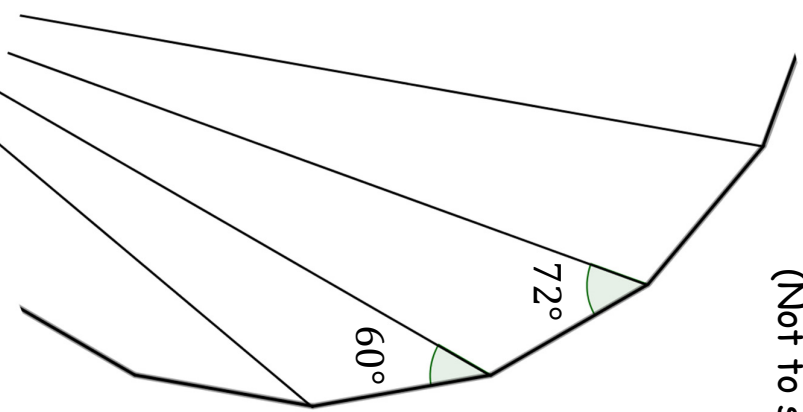
SIC_47

How Many Sides?

(Not to scale)

What you see here are the far ends of some of the diagonals from a single vertex of a regular polygon.

How many sides has the polygon?



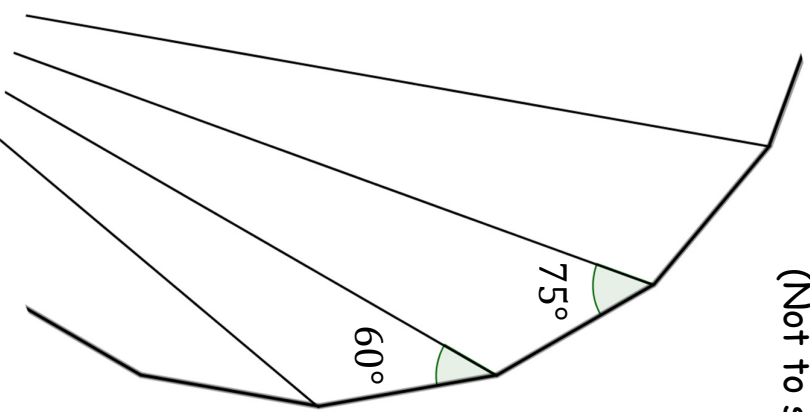
SIC_47

How Many Sides?

(Not to scale)

What you see here are the far ends of some of the diagonals from a single vertex of a regular polygon.

How many sides has the polygon?



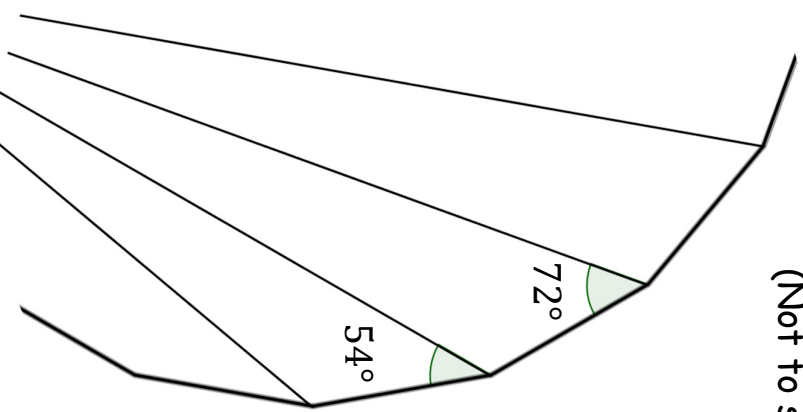
SIC_47

How Many Sides?

(Not to scale)

What you see here are the far ends of some of the diagonals from a single vertex of a regular polygon.

How many sides has the polygon?



SIC_47