




Probability with Spinners

Name:

Date:



What is the probability of getting a 3?

A) $\frac{1}{3}$ B) $\frac{3}{5}$ C) $\frac{1}{5}$ D) $\frac{3}{4}$

Correct Answer: A B C D

Explanation:

.....


.....

.....

.....

.....

.....



What is the probability of getting a prime number?

A) $\frac{1}{5}$ B) $\frac{2}{5}$ C) $\frac{3}{5}$ D) $\frac{2}{3}$

Correct Answer: A B C D

Explanation:

.....

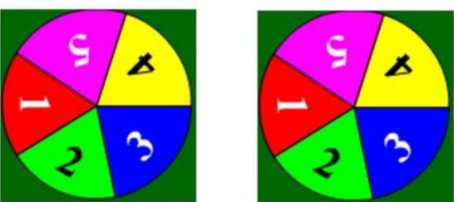
.....

.....

.....

.....

.....



What is the probability of getting a 2 on both spinners?

A) $\frac{2}{5}$ B) $\frac{2}{10}$ C) $\frac{4}{10}$ D) $\frac{1}{25}$

Correct Answer: A B C D

Explanation:

.....

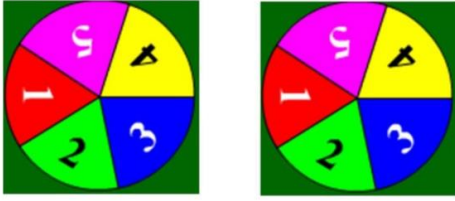
.....

.....

.....

.....

.....



What is the probability of getting an even number on both spinners?

- A) $\frac{4}{25}$ B) $\frac{4}{10}$ C) $\frac{2}{5}$ D) $\frac{2}{25}$

Correct Answer: A B C D

Explanation:

.....

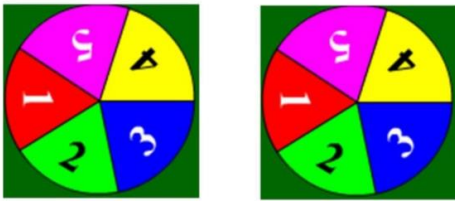
.....

.....

.....

.....

.....



What is the probability of getting an odd number on both spinners?

- A) $\frac{6}{25}$ B) $\frac{9}{25}$ C) $\frac{6}{10}$ D) $\frac{3}{5}$

Correct Answer: A B C D

Explanation:

.....

.....

.....

.....

.....

.....



What is the probability of getting a 3?

- A) $\frac{1}{4}$ B) $\frac{3}{4}$ C) $\frac{1}{3}$ D) $\frac{3}{3}$

Correct Answer: A B C D

Explanation:

.....

.....

.....

.....

.....

.....



What is the probability of getting a square number?

- A) $\frac{2}{2}$ B) $\frac{1}{2}$ C) $\frac{1}{4}$ D) $\frac{3}{4}$

Correct Answer: A B C D

Explanation:

.....

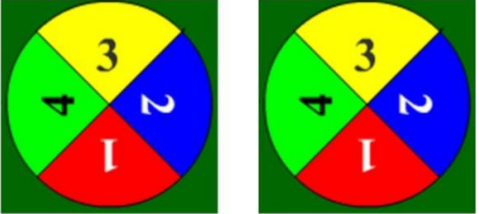
.....

.....

.....

.....

.....



What is the probability of getting a 1 on both spinners?

A) $\frac{1}{16}$ B) $\frac{1}{8}$ C) $\frac{2}{8}$ D) $\frac{2}{16}$

Correct Answer: A B C D

Explanation:

.....

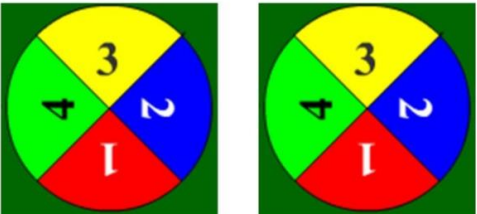
.....

.....

.....

.....

.....



What is the probability of getting a 2 on both spinners?

A) $\frac{2}{8}$ B) $\frac{2}{16}$ C) $\frac{1}{16}$ D) $\frac{1}{8}$

Correct Answer: A B C D

Explanation:

.....

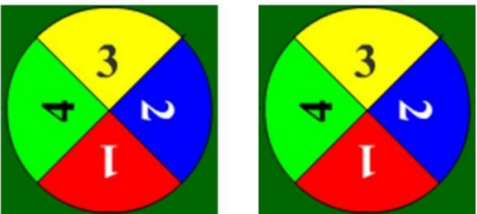
.....

.....

.....

.....

.....



What is the probability of **not** getting a 4 on either spinner?

A) $\frac{6}{8}$ B) $\frac{3}{4}$ C) $\frac{9}{8}$ D) $\frac{9}{16}$

Correct Answer: A B C D

Explanation:

.....

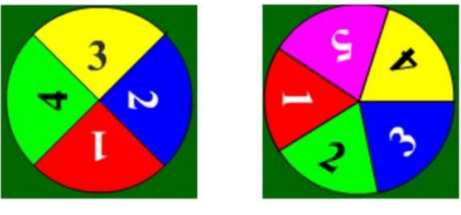
.....

.....

.....

.....

.....



What is the probability of getting a total of 2 when you add the scores together?

A) $\frac{1}{20}$ B) $\frac{2}{9}$ C) $\frac{4}{9}$ D) $\frac{2}{20}$

Correct Answer: A B C D

Explanation:

.....

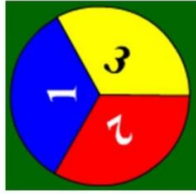
.....

.....

.....

.....

.....



What is the probability of getting a 2?

- A) $\frac{2}{3}$ B) $\frac{1}{3}$ C) $\frac{1}{2}$ D) 2

Correct Answer: A B C D

Explanation:

.....

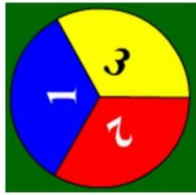
.....

.....

.....

.....

.....



What is the probability of getting a total of 6 when you add the scores together?

- A) $\frac{1}{12}$ B) $\frac{1}{7}$ C) $\frac{6}{7}$ D) $\frac{2}{12}$

Correct Answer: A B C D

Explanation:

.....

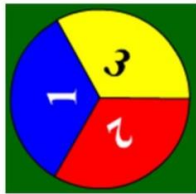
.....

.....

.....

.....

.....



What is the probability of **not** getting a 1?

- A) $\frac{2}{3}$ B) $\frac{1}{3}$ C) $\frac{1}{2}$ D) 1

Correct Answer: A B C D

Explanation:

.....

.....

.....

.....

.....

.....