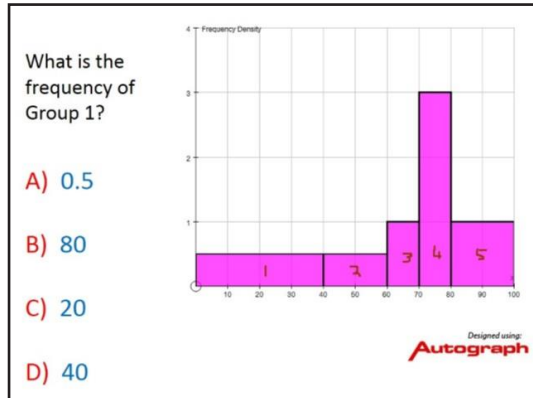




New Maths GCSE: S3 - Intepreting Histograms

Name:.....

Date:.....



Correct Answer: A B C D

Explanation:

.....

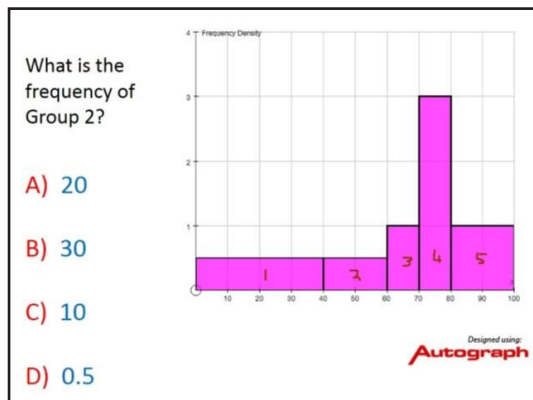
.....

.....

.....

.....

.....



Correct Answer: A B C D

Explanation:

.....

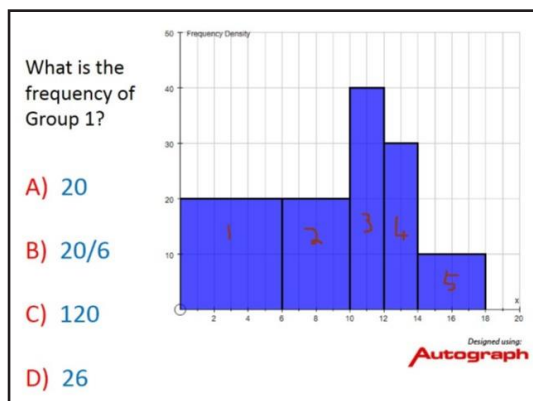
.....

.....

.....

.....

.....



Correct Answer: A B C D

Explanation:

.....

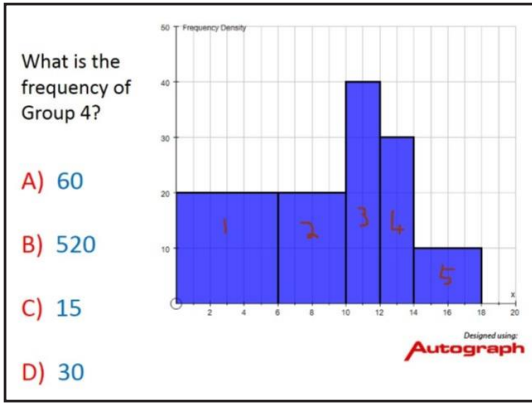
.....

.....

.....

.....

.....



Correct Answer: A B C D

Explanation:

.....

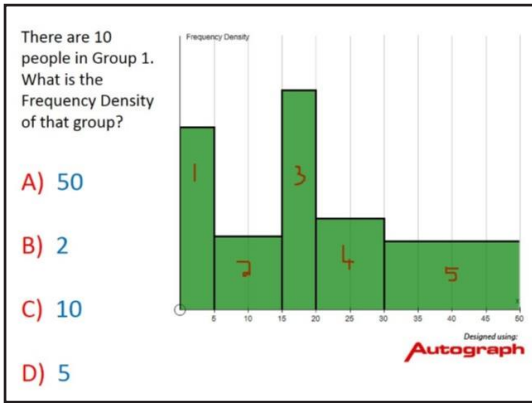
.....

.....

.....

.....

.....



Correct Answer: A B C D

Explanation:

.....

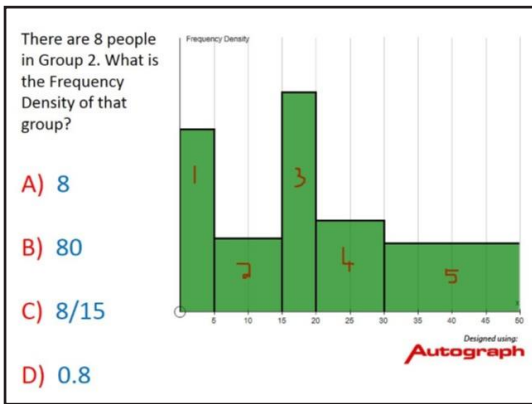
.....

.....

.....

.....

.....



Correct Answer: A B C D

Explanation:

.....

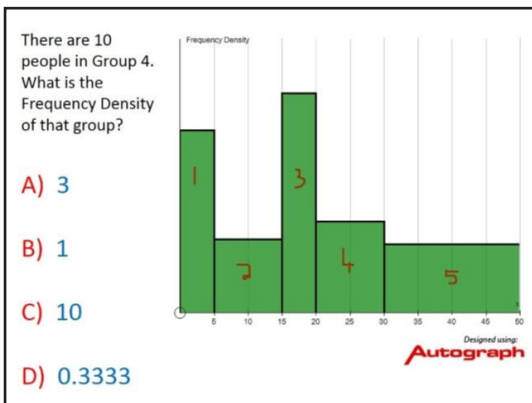
.....

.....

.....

.....

.....



Correct Answer: A B C D

Explanation:

.....

.....

.....

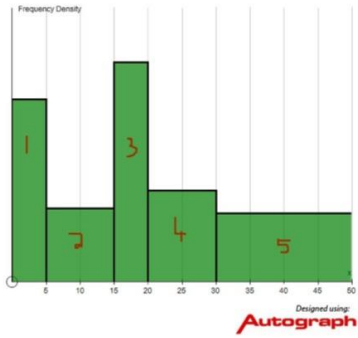
.....

.....

.....

There are 15 people in Group 5. What is the Frequency Density of that group?

- A) 0.3
- B) 0.75
- C) 15
- D) 30



Correct Answer: A B C D

Explanation:

.....

.....

.....

.....

.....

.....