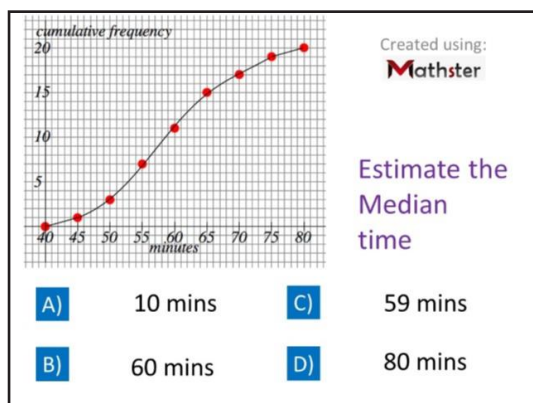




New Maths GCSE: S3 - Interpreting Cumulative Frequency Diagrams

Name:

Date:



Correct Answer: A B C D

Explanation:

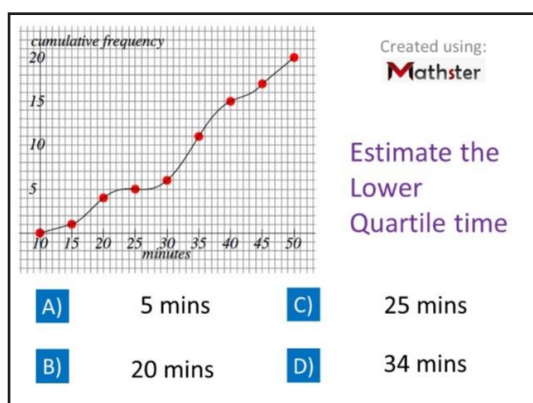
.....

.....

.....

.....

.....



Correct Answer: A B C D

Explanation:

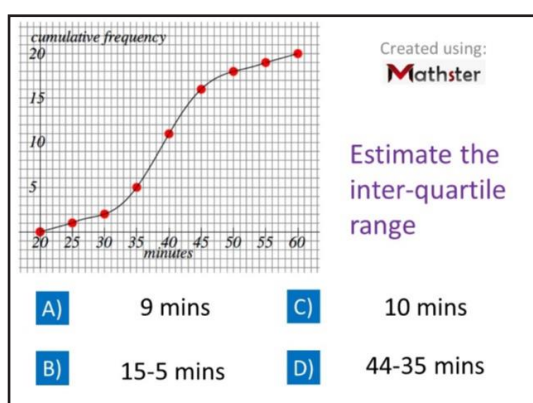
.....

.....

.....

.....

.....



Correct Answer: A B C D

Explanation:

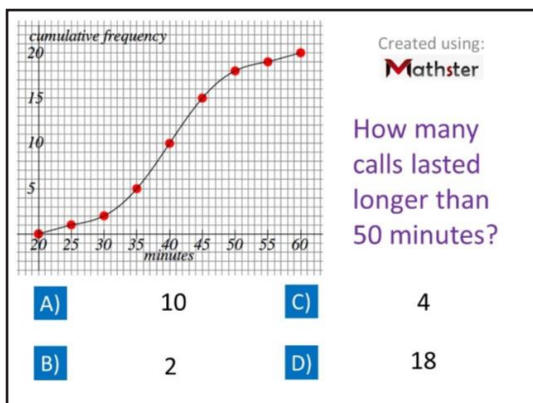
.....

.....

.....

.....

.....



Correct Answer: A B C D

Explanation:

.....

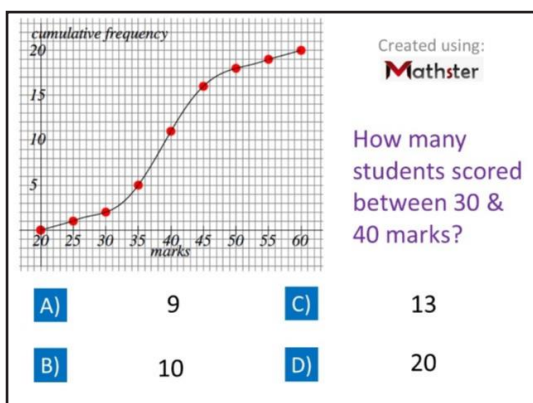
.....

.....

.....

.....

.....



Correct Answer: A B C D

Explanation:

.....

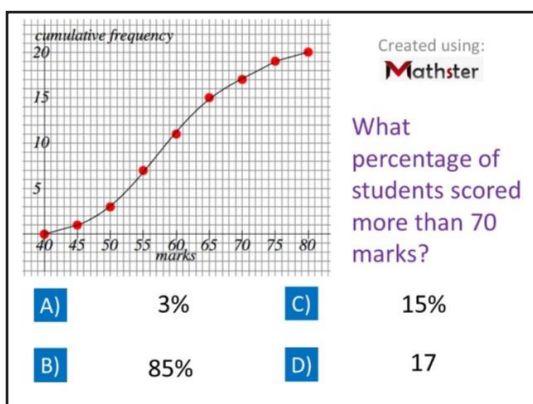
.....

.....

.....

.....

.....



Correct Answer: A B C D

Explanation:

.....

.....

.....

.....

.....

.....

Created using: **Mathster**

Score	Frequency
60 - 64	13
65 - 69	10
70 - 74	18
75 - 79	
80 - 84	13
85 - 89	53

What is the missing value?

A)	5	C)	54
B)	3	D)	13

Correct Answer: A B C D

Explanation:

.....

.....

.....

.....

.....

.....

Score	Frequency
40 - 59	19
60 - 79	12
80 - 99	16
100 - 119	
120 - 139	16
140 - 159	40

Score	Cumulative Freq
less than 60	19
less than 80	31
less than 100	47
less than 120	64
less than 140	80
less than 160	120

What is the missing value?

Created using: **Mathster**

A) 17 C) 16
B) 64 D) 7

Correct Answer: A B C D

Explanation:

.....

.....

.....

.....

.....

.....

Score	Frequency
80 - 84	10
85 - 89	19
90 - 94	15
95 - 99	
100 - 104	12
105 - 109	50

Score	Cumulative Freq
less than 85	10
less than 90	29
less than 95	44
less than 100	58
less than 105	70
less than 110	120

What is the missing value?

Created using: **Mathster**

A) 58 C) 15
B) 4 D) 14

Correct Answer: A B C D

Explanation:

.....

.....

.....

.....

.....

.....

Created using: **Mathster**

Estimate the Median time

A) 34 mins C) 35 mins
B) 10 mins D) 30 mins

Correct Answer: A B C D

Explanation:

.....

.....

.....

.....

.....

.....