



New Mmaths GCSE: S4 - Backwards Averages

Name:.....

Date:.....

The mean of four numbers is 8.
When a 5th number is added, the mean increases to 10.
What is the 5th number?

A 18 **B** 10
C 2 **D** 50

Correct Answer: A B C D

Explanation:

.....
.....
.....
.....
.....

5 3 10 ★

The above set of 4 numbers have a range of 10.
What could the mystery number under the star be?

A 15 **B** 13
C 0 or 13 **D** Any number

Correct Answer: A B C D

Explanation:

.....
.....
.....
.....
.....

3 5 3 7 ★


The above set of 5 numbers have a mode of 3.
What could the mystery number under the star be?

A Any number apart from 5 **B** Any number apart from 5 or 7
C Any number **D** 3

Correct Answer: A B C D

Explanation:

.....
.....
.....
.....
.....

3 7 12 1 

The above set of 5 numbers have a median of 9.

What could the mystery number under the star be?

A Any number less than 12 **B** 9

C Any number between 1 and 12 **D** No possible number

Correct Answer: A B C D

Explanation:

.....

.....

.....

.....

.....

.....

The mean of six numbers is 10.

When a 7th number is added, the mean increases to 11.

What is the 7th number?

A 77 **B** 1

C 7 **D** 17

Correct Answer: A B C D

Explanation:

.....


.....

.....

.....

.....

.....

5 9 1 

The above set of 4 numbers have a range of 8.

What could the mystery number under the star be?

A Any number between 1 and 9 **B** 13

C 9 **D** Any number

Correct Answer: A B C D

Explanation:

.....


.....

.....

.....

.....

.....

10 4 7 

The above set of 4 numbers have a mean of 8.

What could the mystery number under the star be?

A 21 **B** 32

C 8 **D** 11

Correct Answer: A B C D

Explanation:

.....


.....

.....

.....

.....

.....

5 10 6 1 

The above set of 5 numbers have a median of 6.

What could the mystery number under the star be?

A Any number apart from 6 **B** 6

C Any number 10 or above **D** Any number 6 or above

Correct Answer: A B C D

Explanation:

.....


.....

.....

.....

.....

.....

10 5 7 

The above set of 4 numbers have a median of 6.

What could the mystery number under the star be?

A Any number between 0 and 5 **B** Any number 5 or less

C 6 **D** Any number 10 or more

Correct Answer: A B C D

Explanation:

.....

.....

.....

.....

.....

.....

The mean of three numbers is 7.

When a 4th number is added, the mean decreases to 4.

What is the 4th number?

A -5 **B** 3

C -3 **D** 16

Correct Answer: A B C D

Explanation:

.....

.....

.....

.....

.....

.....