

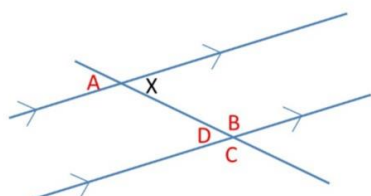
# New Maths GCSE: G3 - Naming angles in parallel lines



Name:.....

Date:.....

Which angle is alternate to angle x?



Correct Answer: A B C D

Explanation:

.....

.....

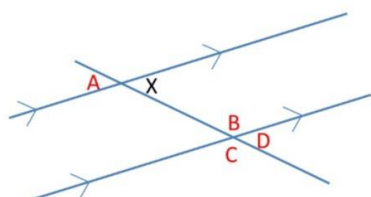
.....

.....

.....

.....

Which angle is corresponding to angle x?



Correct Answer: A B C D

Explanation:

.....

.....

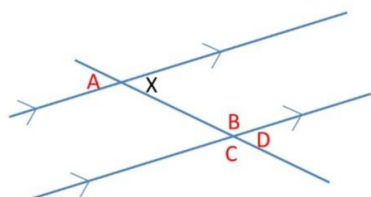
.....

.....

.....

.....

Which angle is allied/co-interior to angle x?



Correct Answer: A B C D

Explanation:

.....

.....

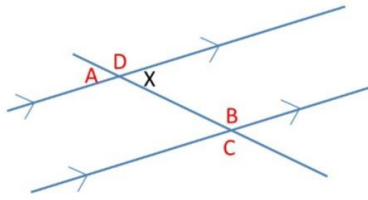
.....

.....

.....

.....

Which angle is vertically opposite to angle x?



Correct Answer: A B C D

Explanation:

.....

.....

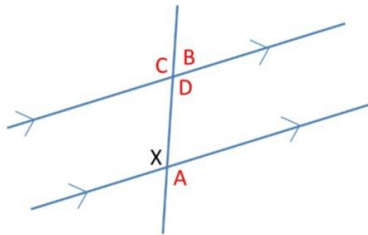
.....

.....

.....

.....

Which angle is alternate to angle x?



Correct Answer: A B C D

Explanation:

.....

.....

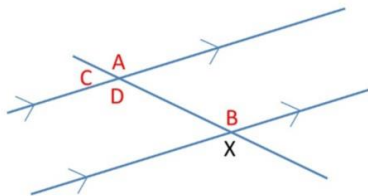
.....

.....

.....

.....

Which angle is corresponding to angle x?



Correct Answer: A B C D

Explanation:

.....

.....

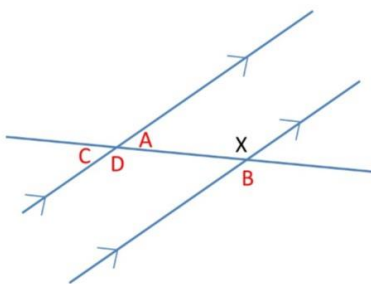
.....

.....

.....

.....

Which angle is alternate to angle x?



Correct Answer: A B C D

Explanation:

.....

.....

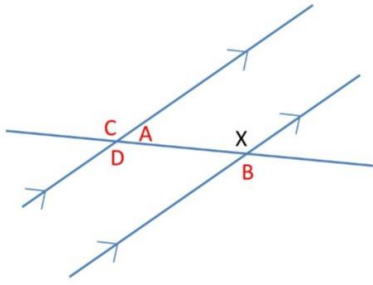
.....

.....

.....

.....

Which angle is corresponding to angle x?



Correct Answer: A B C D

Explanation:

.....

.....

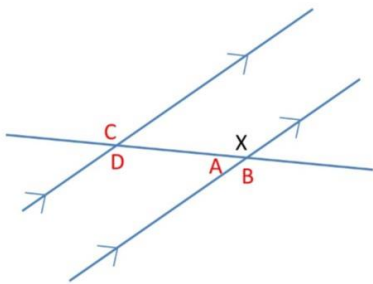
.....

.....

.....

.....

Which angle is vertically opposite to angle x?



Correct Answer: A B C D

Explanation:

.....

.....

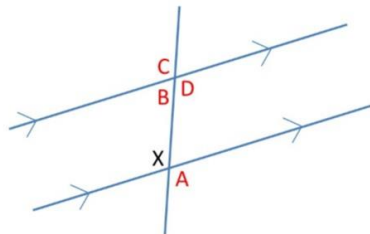
.....

.....

.....

.....

Which angle is corresponding to angle x?



Correct Answer: A B C D

Explanation:

.....

.....

.....

.....

.....

.....