



# New Maths GCSE: G3 - Naming Types of Angles

Name:.....

Date:.....

How many degrees are there in.....

**A right angle**

A)  B)

C)  D)

Correct Answer: A B C D

Explanation:

.....

.....

.....

.....

.....

How many degrees are there in.....

**An obtuse angle**

A)  B)

C)  D)

Correct Answer: A B C D

Explanation:

.....


.....

.....

.....

.....

Can you tell me what type of angle this is...



A. Obtuse B. Acute

C. Reflex D. Right Angle

Correct Answer: A B C D

Explanation:

.....


.....

.....

.....

.....

Can you tell me what type of angle this is...



A. Obtuse                      B. Acute  
C. Reflex                        D. Right Angle

Correct Answer: A B C D

Explanation:

.....  
 .....  
 .....  
 .....  
 .....

How many degrees are there in.....

**An acute angle**

A) More than 90      B) Less than 90  
C) Exactly 90        D) Less than 1

Correct Answer: A B C D

Explanation:

.....  
 .....  
 .....  
 .....  
 .....

How many degrees are there in.....

**A Reflex angle**

A) Less than 90      B) More than 90 less than 180  
C) Exactly 180        D) More than 180

Correct Answer: A B C D

Explanation:

.....  
 .....  
 .....  
 .....  
 .....

How many degrees are there in.....

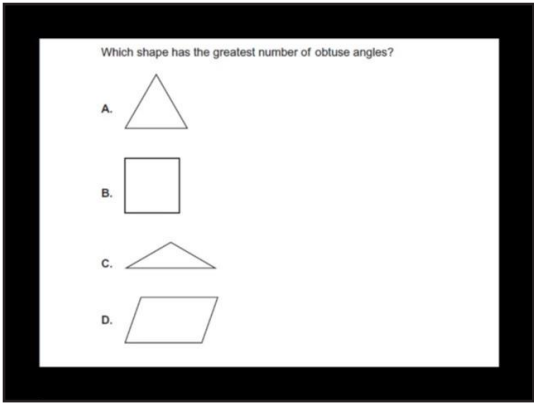
**A quarter turn**

A) 120                      B) 100  
C) 90                        D) 40

Correct Answer: A B C D

Explanation:

.....  
 .....  
 .....  
 .....  
 .....



Correct Answer: A B C D

Explanation:

.....

.....

.....

.....

.....

.....