



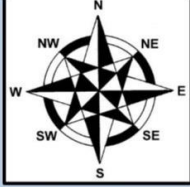
# New Maths GCSE: G3 - Angles and Compass Points

Name:.....

Date:.....

If I am facing **NORTH** and turn **CLOCKWISE**, what angle do I need to turn to point....

**EAST?**



A) 270°      B) 180°

C) 90°        D) 45°

[www.coops-online.co.uk](http://www.coops-online.co.uk)

Correct Answer: A B C D

Explanation:

.....

.....


.....

.....

.....

If I am facing **NORTH** and turn **CLOCKWISE**, what angle do I need to turn to point....

**SOUTH?**



A) 50°        B) 180°

C) 100°      D) 90°

[www.coops-online.co.uk](http://www.coops-online.co.uk)

Correct Answer: A B C D

Explanation:

.....

.....


.....

.....

.....

If I am facing **NORTH** and turn **CLOCKWISE**, what angle do I need to turn to point....

**WEST?**



A) 90°        B) 75°

C) 300°      D) 270°

[www.coops-online.co.uk](http://www.coops-online.co.uk)

Correct Answer: A B C D

Explanation:

.....

.....


.....

.....

.....

If I am facing **NORTH** and turn **CLOCKWISE**, what angle do I need to turn to point....

**NORTH EAST?**



A) 45°      B) 35°

C) 40°      D) 90°

[www.coops-online.co.uk](http://www.coops-online.co.uk)

Correct Answer: A B C D

Explanation:

.....

.....


.....

.....

.....

If I am facing **NORTH** and turn **CLOCKWISE**, what angle do I need to turn to point....

**SOUTH EAST?**



A) 130°      B) 120°

C) 125°      D) 135°

[www.coops-online.co.uk](http://www.coops-online.co.uk)

Correct Answer: A B C D

Explanation:

.....

.....


.....

.....

.....

If I am facing **NORTH** and turn **CLOCKWISE**, what angle do I need to turn to point....

**SOUTH WEST?**



A) 150°      B) 225°

C) 270°      D) 180°

[www.coops-online.co.uk](http://www.coops-online.co.uk)

Correct Answer: A B C D

Explanation:

.....

.....


.....

.....

.....

If I am facing **NORTH** and turn **CLOCKWISE**, what angle do I need to turn to point....

**NORHT WEST?**



A) 320°      B) 325°

C) 45°      D) 315°

[www.coops-online.co.uk](http://www.coops-online.co.uk)

Correct Answer: A B C D

Explanation:

.....

.....


.....

.....

.....

If I am facing **North East** and turn **CLOCKWISE**, what angle do I need to turn to point....

**SOUTH EAST?**



A) 45°      B) 60°

C) 90°      D) 180°

[www.coops-online.co.uk](http://www.coops-online.co.uk)

Correct Answer: A B C D

Explanation:

.....

.....


.....

.....

.....

If I am facing **South East** and turn **CLOCKWISE**, what angle do I need to turn to point....

**North west?**



A) 180°      B) 90°

C) 135°      D) 270°

[www.coops-online.co.uk](http://www.coops-online.co.uk)

Correct Answer: A B C D

Explanation:

.....

.....


.....

.....

.....

If I am facing **NORTH WEST** and turn **CLOCKWISE**, what angle do I need to turn to point....

**SOUTH?**



A) 180°      B) 225°

C) 200°      D) 230°

[www.coops-online.co.uk](http://www.coops-online.co.uk)

Correct Answer: A B C D

Explanation:

.....

.....

.....

.....

.....