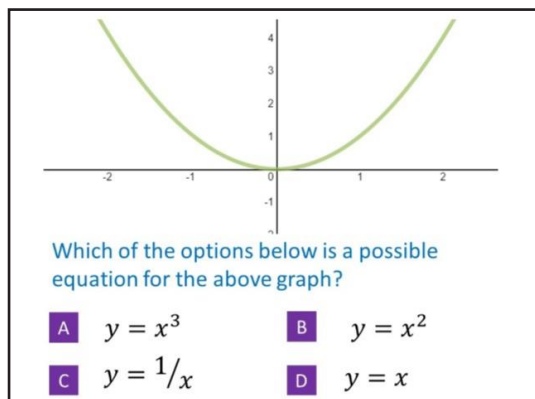




# New Maths GCSE: A12 - Name the Graph (part 2!)

Name:.....

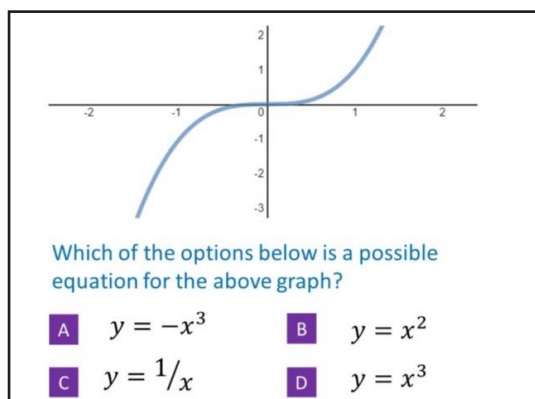
Date:.....



Correct Answer: A B C D

Explanation:

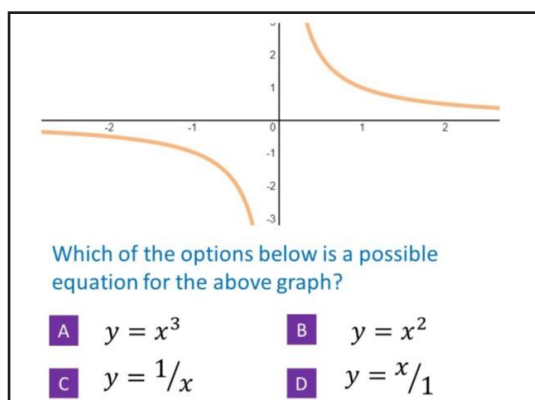
.....  
.....  
.....  
.....  
.....  
.....



Correct Answer: A B C D

Explanation:

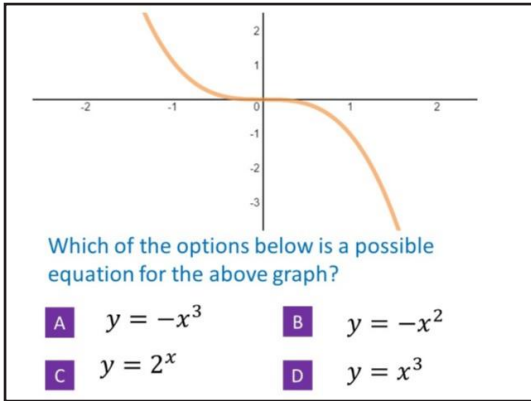
.....  
.....  
.....  
.....  
.....  
.....



Correct Answer: A B C D

Explanation:

.....  
.....  
.....  
.....  
.....  
.....



Correct Answer: A B C D

Explanation:

.....

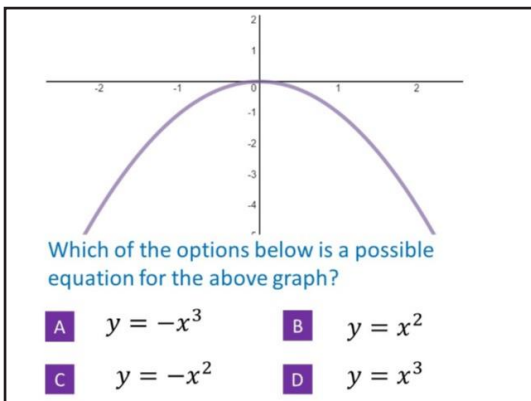
.....

.....

.....

.....

.....



Correct Answer: A B C D

Explanation:

.....

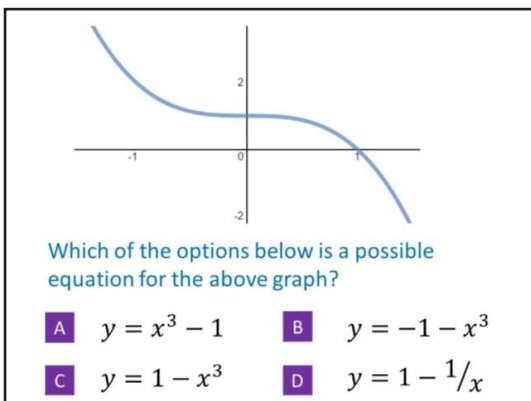
.....

.....

.....

.....

.....



Correct Answer: A B C D

Explanation:

.....

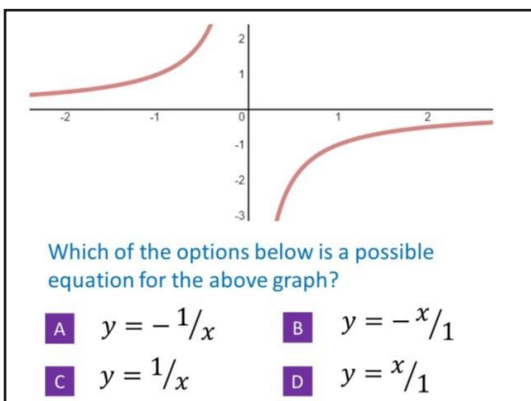
.....

.....

.....

.....

.....



Correct Answer: A B C D

Explanation:

.....

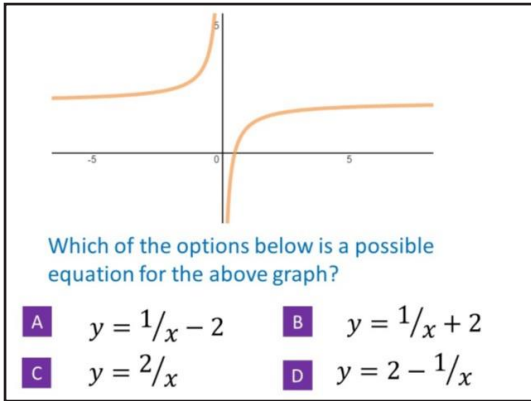
.....

.....

.....

.....

.....



Correct Answer: A B C D

Explanation:

.....

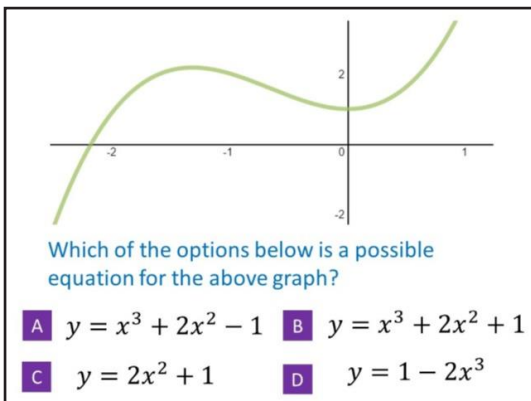
.....

.....

.....

.....

.....



Correct Answer: A B C D

Explanation:

.....

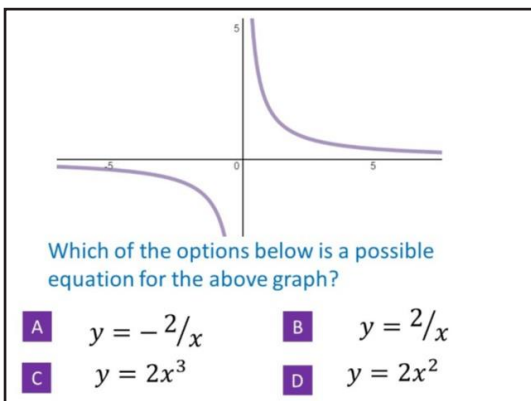
.....

.....

.....

.....

.....



Correct Answer: A B C D

Explanation:

.....

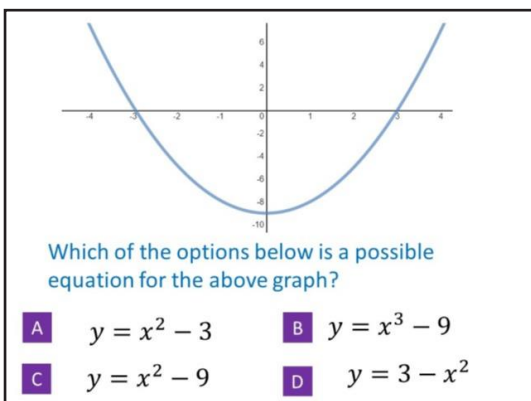
.....

.....

.....

.....

.....



Correct Answer: A B C D

Explanation:

.....

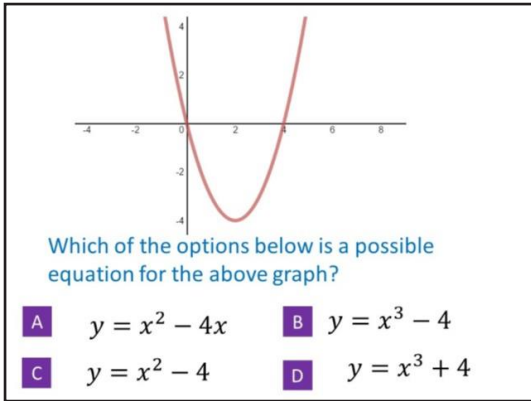
.....

.....

.....

.....

.....



Correct Answer: A B C D

Explanation:

.....

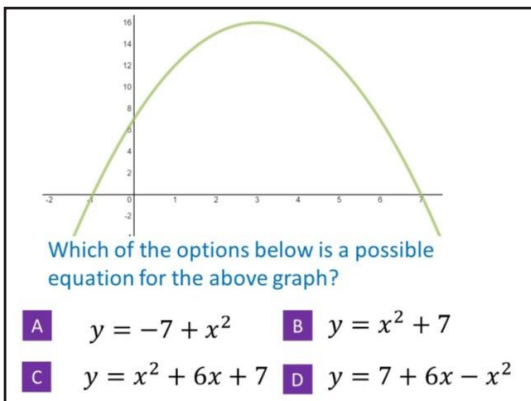
.....

.....

.....

.....

.....



Correct Answer: A B C D

Explanation:

.....

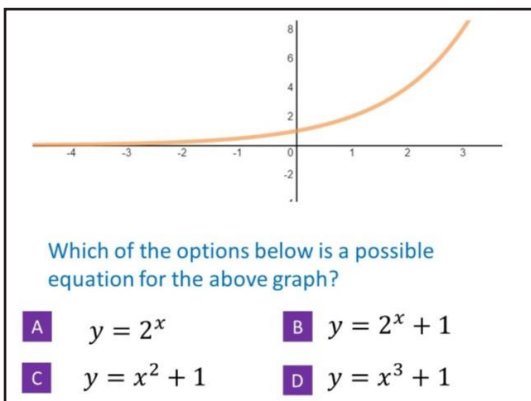
.....

.....

.....

.....

.....



Correct Answer: A B C D

Explanation:

.....

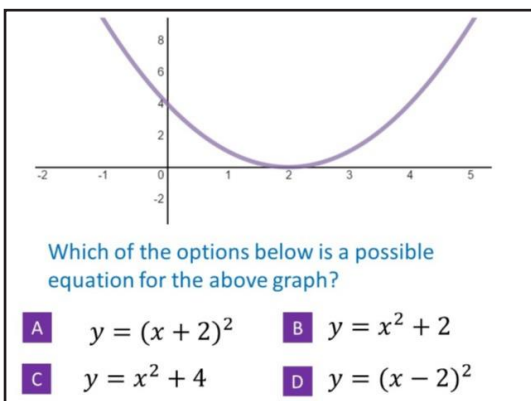
.....

.....

.....

.....

.....



Correct Answer: A B C D

Explanation:

.....

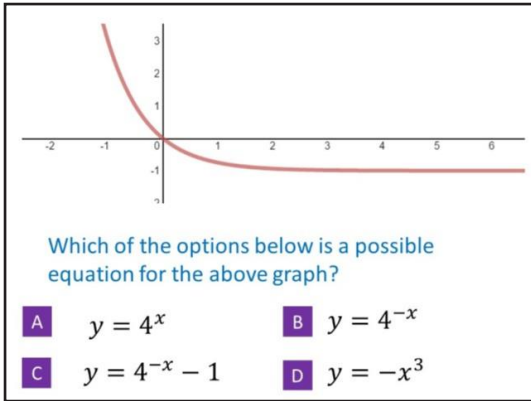
.....

.....

.....

.....

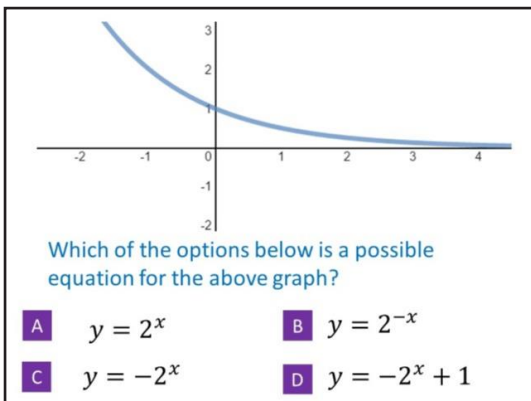
.....



Correct Answer: A B C D

Explanation:

.....  
 .....  
 .....  
 .....  
 .....  
 .....



Correct Answer: A B C D

Explanation:

.....  
 .....  
 .....  
 .....  
 .....  
 .....