



# New Mmaths GCSE: A9 - Naming the Equation of the Line

Name: .....

Date: .....

What is the equation of the line?

- a)  $y = -3x$
- b)  $x = -3y$
- c)  $y = -3$
- d)  $x = -3$

Designed using: **Autograph**

Correct Answer: A B C D

Explanation:

.....

.....

.....

.....

.....

.....

What is the equation of the line?

- a)  $y = 2$
- b)  $x = 2$
- c)  $2y$
- d)  $2y = x$

Designed using: **Autograph**

Correct Answer: A B C D

Explanation:

.....

.....

.....

.....

.....

.....

What is the equation of the line?

- a)  $y = -2x + 4$
- b)  $y = 2x + 4$
- c)  $y = 4x - 2$
- d)  $Y = \frac{1}{2}x + 4$

Designed using: **Autograph**

Correct Answer: A B C D

Explanation:

.....

.....

.....

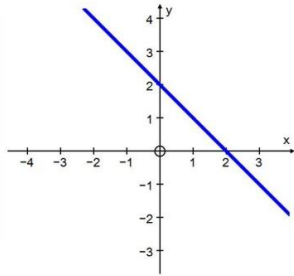
.....

.....

.....

What is the equation of the line?

- a)  $y = 2$
- b)  $y = x + 2$
- c)  $y = 2 - x$
- d)  $y = -2x$



Designed using:  
**Autograph**

Correct Answer: A B C D

Explanation:

.....

.....

.....

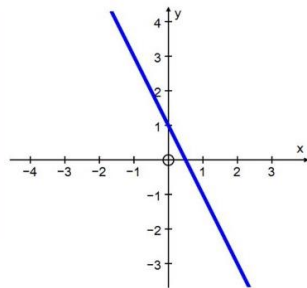
.....

.....

.....

What is the equation of the line?

- a)  $y = 2x + 1$
- b)  $y = 1 - x$
- c)  $y = 1 - 2x$
- d)  $y = 1 - 0.5x$



Designed using:  
**Autograph**

Correct Answer: A B C D

Explanation:

.....

.....

.....

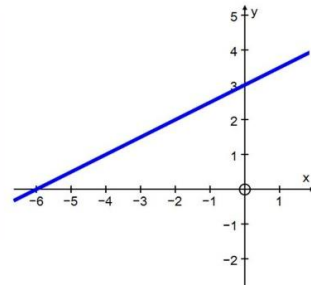
.....

.....

.....

What is the equation of the line?

- a)  $y = \frac{1}{2}x + 3$
- b)  $y = -6x + 3$
- c)  $y = 3x - 6$
- d)  $y = 2x + 3$



Designed using:  
**Autograph**

Correct Answer: A B C D

Explanation:

.....

.....

.....

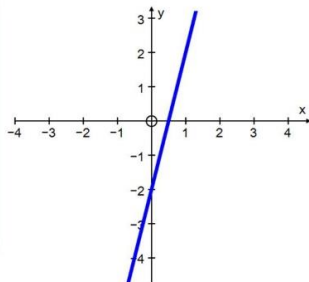
.....

.....

.....

What is the equation of the line?

- a)  $y = x - 2$
- b)  $y = 4x - 2$
- c)  $y = -2x + 0.5$
- d)  $y = 2x - 0.5$



Designed using:  
**Autograph**

Correct Answer: A B C D

Explanation:

.....

.....

.....

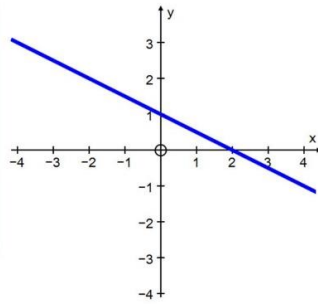
.....

.....

.....

What is the equation of the line?

- a)  $y = -\frac{1}{2}x + 1$
- b)  $y = -2x + 1$
- c)  $y = 2x + 1$
- d)  $y = x + 2$



Designed using  
**Autograph**

Correct Answer: A B C D

Explanation:

.....

.....

.....

.....

.....

.....