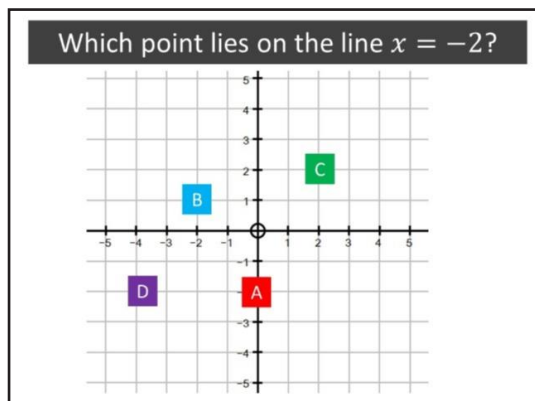




Horizontal and Vertical Lines

Name:

Date:



Correct Answer: A B C D

Explanation:

.....

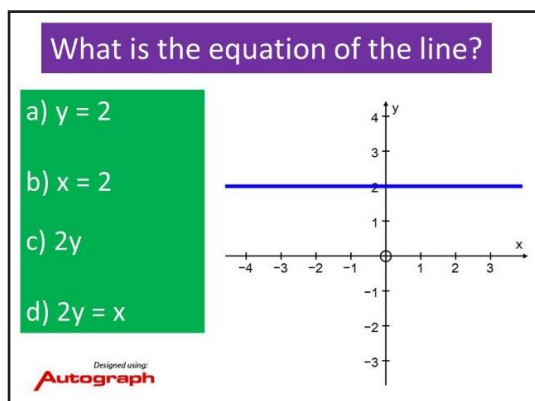
.....

.....

.....

.....

.....



Correct Answer: A B C D

Explanation:

.....

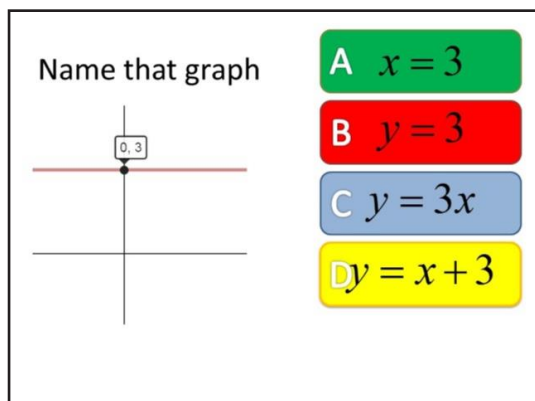
.....

.....

.....

.....

.....



Correct Answer: A B C D

Explanation:

.....

.....

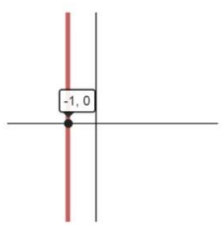
.....

.....

.....

.....

Name that graph



A $x = -1$

B $y = -1$

C $x + y = -1$

D $x - 1 = 0$

Correct Answer: A B C D

Explanation:

.....

.....

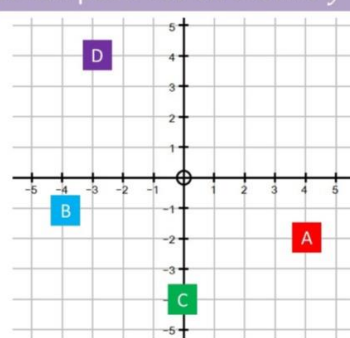
.....

.....

.....

.....

Which point lies on the line $y = 4$?



A

B

C

D

Correct Answer: A B C D

Explanation:

.....

.....

.....

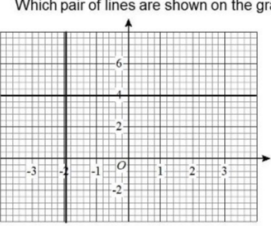
.....

.....

.....

AQA
Realising potential

Which pair of lines are shown on the graph?



A $x = 4$ and $y = -2$

B $x = -2$ and $y = 2$

C $x = -2$ and $y = 4$

D $x = 2$ and $y = -4$

Copyright © AQA and its licensors. All rights reserved.

Correct Answer: A B C D

Explanation:

.....

.....

.....

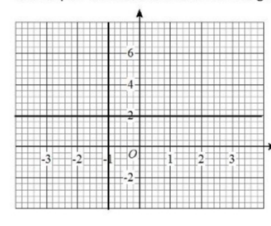
.....

.....

.....

AQA
Realising potential

Which pair of lines are shown on the graph?



A $x = 2$ and $y = -1$

B $x = -1$ and $y = 2$

C $x = -1$ and $y = 1$

D $x = 1$ and $y = -2$

Copyright © AQA and its licensors. All rights reserved.

Correct Answer: A B C D

Explanation:

.....

.....

.....

.....

.....

.....

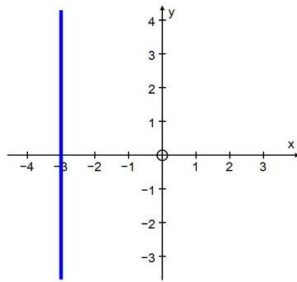
What is the equation of the line?

a) $y = -3x$

b) $x = -3y$

c) $y = -3$

d) $x = -3$



Designed using:
Autograph

Correct Answer: A B C D

Explanation:

.....

.....

.....

.....

.....

.....