



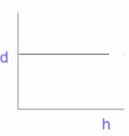
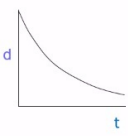
New Maths GCSE: R10 - Proportion Graphs


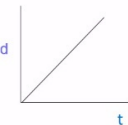
Name:

Date:

d is directly proportional to t

Which of the following graphs could illustrate this?

A  **B** 

C  **D** 

Correct Answer: A B C D

Explanation:

.....

.....

.....

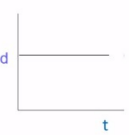
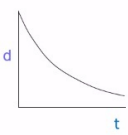
.....


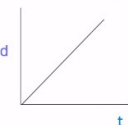
.....

.....

d is inversely proportional to t

Which of the following graphs could illustrate this?

A  **B** 

C  **D** 

Correct Answer: A B C D

Explanation:

.....

.....

.....

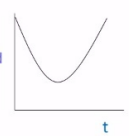
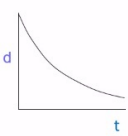
.....


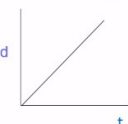
.....

.....

d is directly proportional to the square of t

Which of the following graphs could illustrate this?

A  **B** 

C  **D** 

Correct Answer: A B C D

Explanation:

.....

.....

.....

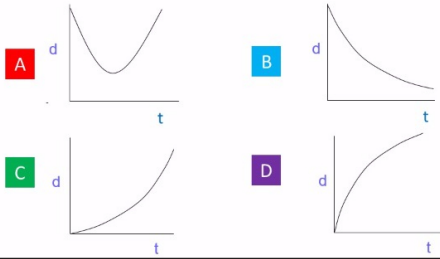
.....

.....

.....

d is directly proportional to the square root of t

Which of the following graphs could illustrate this?



Correct Answer: A B C D

Explanation:

.....

.....

.....

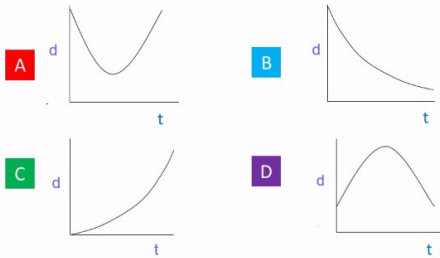
.....

.....

.....

d is inversely proportional to the square of t

Which of the following graphs could illustrate this?



Correct Answer: A B C D

Explanation:

.....

.....

.....

.....

.....

.....