




# New Maths GCSE: R1 - Currency Conversions

Name:.....

Date:.....

**£1 = \$1.57**



How much is **£5** worth in **\$**?

**A** \$6.57      **B** \$3.18

**C** \$5.57      **D** \$7.85

Correct Answer: A B C D

Explanation:

.....

.....

.....

.....

.....

.....

**\$1 = €0.8**



How much is **\$21** worth in **€**?

**A** €16.08      **B** €168

**C** €16.80      **D** €26.25

Correct Answer: A B C D

Explanation:

.....

.....

.....

.....

.....

.....

**\$1 = €0.8**



How much is **€92** worth in **\$**?

**A** \$115      **B** \$736

**C** \$73.06      **D** \$73.60

Correct Answer: A B C D

Explanation:

.....


.....

.....

.....

.....

.....



**£1 = \$1.57**

How much is **\$20** worth in **£**?

**A** £12.74      **B** £31.40

**C** £18.43      **D** £11.40

Correct Answer: A B C D

Explanation:

.....

.....

.....

.....

.....



**€1 = ¥147.61**

How much is **€19** worth in **¥**?

**A** ¥2793      **B** ¥7.77

**C** ¥166.61      **D** ¥2804.59

Correct Answer: A B C D

Explanation:


.....

.....

.....

.....

.....



**£1 = \$1.57**

How much is **£38** worth in **\$**?

**A** \$38.57      **B** \$59.66

**C** \$57.00      **D** \$24.20

Correct Answer: A B C D

Explanation:

.....

.....

.....

.....

.....



**\$1 = €0.8**

How much is **\$300** worth in **€**?

**A** €375      **B** €240

**C** €300.80      **D** €299.20

Correct Answer: A B C D

Explanation:


.....

.....

.....

.....

.....

**€1 = ¥147.61** 

How much is **¥100** worth in **\$**?

**A** \$0.68      **B** \$47.61  
**C** \$14761      **D** \$67.75

Correct Answer: A B C D

Explanation:

.....

.....

.....

.....

.....

**\$1 = €0.8** 

How much is **€25** worth in **\$**?

**A** \$3.13      **B** \$25.8  
**C** \$31.25      **D** \$20

Correct Answer: A B C D

Explanation:


.....

.....

.....

.....

.....

**£1 = \$1.57** 

How much is **\$69** worth in **£**?

**A** £67.43      **B** £39.33  
**C** £108.33      **D** £43.95

Correct Answer: A B C D

Explanation:


.....

.....

.....

.....

.....

**\$1 = €0.81**  
**€1 = £0.79** 

How much is **\$90** worth in **£**?

**A** £87.78      **B** £92.28  
**C** £140.65      **D** £57.59

Correct Answer: A B C D

Explanation:

.....

.....

.....

.....

.....

$\$1 = \text{€}0.81$   
 $\text{€}1 = \text{£}0.79$



How much is **£100** worth in **\\$**?

**A** \$97.53      **B** \$156.27  
**C** \$102.53      **D** \$63.99

Correct Answer: A B C D

Explanation:

.....  
.....  
.....  
.....  
.....  
.....