



New Maths GCSE: N2 - Mental Arithmetic

Name:.....

Date:.....

40 + 7

A) 407
B) 110
C) 47
D) 740

Correct Answer: A B C D

Explanation:

.....
.....
.....
.....
.....

84 + 37

A) 1111
B) 111
C) 121
D) 112

Correct Answer: A B C D

Explanation:

.....
.....
.....
.....
.....

8 + 6 - 2 =

A¹² B¹³ C⁷⁰ D²

Question by Chloe Stewart

Correct Answer: A B C D

Explanation:

.....
.....
.....
.....
.....

What number is 200 less than forty thousand?

a) 40 200 b) 39 200

c) 38 000 d) 39 800

Correct Answer: A B C D

Explanation:

.....

.....

.....

.....

.....

.....

Arithmetic

An equation is shown.

$$3 \times 7 = ____ + 7$$


What number makes the number sentence true?

3

14

21

28



Correct Answer: A B C D

Explanation:

.....

.....

.....

.....

.....

.....

Arithmetic

Malik has 64 marbles.

He puts an equal number of marbles into each of 4 jars.


How many marbles are in each jar?

14

15

16

18



Correct Answer: A B C D

Explanation:

.....

.....

.....

.....

.....

.....

Arithmetic

An equation is shown.

$$12 ____ 5 = 17 + 43$$


Which symbol makes the equation true?

A. +

B. -

C. ×

D. ÷



Correct Answer: A B C D

Explanation:

.....

.....

.....

.....


.....

.....

Arithmetic

There are 35 students going on a class trip. The students ride in vans. There are 7 students riding in each van. How many vans are needed to take all the students?

A. 4
B. 5
C. 6
D. 7



Correct Answer: A B C D

Explanation:

.....

.....

.....


.....

.....

.....

What is $26 + 52 - 20$?

A) 58
B) 59
C) 60
D) 61



Correct Answer: A B C D

Explanation:

.....

.....

.....

.....

.....


.....

Arithmetic

Subtract.

$6,905 - 37$

A) 3,205
B) 6,868
C) 6,932
D) 6,968



Correct Answer: A B C D

Explanation:

.....

.....

.....

.....

.....

.....