






Exit Ticket M1 - Linear Sequences

Name:

Date:





AQA
Assessing progress

Here is a sequence of patterns.

Pattern 1 Pattern 2 Pattern 3

Which of these is Pattern 4?

Copyright © AQA and licensors. All rights reserved.

Correct Answer: A B C D

Explanation:

.....

.....

.....

.....

.....

.....

Diagnostic Questions

What is the n th term of this sequence?

2, 7, 12, 17, ...

A $5n - 2$

B $5n + 2$

C $2n + 5$

D $5n - 3$

Correct Answer: A B C D

Explanation:

.....

.....

.....

.....

.....

.....

CAMBRIDGE

Brighter Thinking

The n th term of a sequence is $4n - 3$

What is the 30th term in the sequence?

A 117

B 30

C 120

D 86

© Cambridge University Press

Correct Answer: A B C D

Explanation:

.....

.....

.....

.....

.....

.....