

# Statistics 2

## Revision Notes

June 2016



# Statistics 2

<b>1</b>	<b>The Binomial distribution</b>	<b>5</b>
	Factorials.....	5
	Combinations .....	5
	Properties of ${}^n C_r$ .....	5
	Binomial Theorem .....	6
	Binomial coefficients .....	6
	Binomial coefficients and combinations .....	6
	Binomial distribution $B(n, p)$ .....	6
	Conditions for a Binomial Distribution.....	6
	Binomial distribution.....	7
	Cumulative binomial probability tables .....	8
	Mean and variance of the binomial distribution.....	9
<b>2</b>	<b>The Poisson distribution</b>	<b>10</b>
	Conditions for a Poisson distribution.....	10
	Poisson distribution.....	11
	Mean and variance of the Poisson distribution.....	12
	The Poisson as an approximation to the binomial .....	13
	Binomial $B(n, p)$ for small $p$ .....	13
	Selecting the appropriate distribution .....	14
<b>3</b>	<b>Continuous random variables</b>	<b>15</b>
	Probability density functions .....	15
	Conditions .....	15
	Cumulative probability density function .....	16
	Expected mean and variance.....	19
	Frequency, discrete and continuous probability distributions .....	19
	Mode, median & quartiles for a continuous random variable .....	20
	Mode .....	20
	Median .....	21
	Quartiles.....	21
<b>4</b>	<b>Continuous uniform (rectangular) distribution</b>	<b>22</b>
	Definition .....	22
	Median .....	22
	Mean and Variance .....	22

<b>5</b>	<b>Normal Approximations</b>	<b>23</b>
	The normal approximation to the binomial distribution.....	23
	Conditions for approximation .....	23
	Continuity correction .....	23
	The normal approximation to the Poisson distribution.....	24
	Conditions for approximation .....	24
	Continuity correction .....	24
<b>6</b>	<b>Populations and sampling</b>	<b>25</b>
	Words and their meanings.....	25
	Advantages and disadvantages of taking a census .....	26
	Advantages and disadvantages of sampling.....	26
	Sampling distributions .....	27
<b>7</b>	<b>Hypothesis tests</b>	<b>28</b>
	Null and alternative hypotheses, $H_0$ and $H_1$ .....	28
	Hypotheses and significance level.....	28
	Critical regions and significance levels .....	29
	Poisson and Binomial .....	29
	One-tail and two-tail tests.....	30
	Worked examples (binomial, one-tail test) .....	30
	Worked example (binomial test, two-tail critical region) .....	32
	Worked example (Poisson) .....	33
	Worked example (Poisson, critical region) .....	33
	Hypothesis testing using approximations. ....	34
<b>8</b>	<b>Context questions and answers</b>	<b>36</b>
	Accuracy.....	36
	General vocabulary.....	36
	Skew .....	37
	Binomial and Poisson distributions .....	38
	Approximations to Poisson and Binomial .....	39
	Sampling.....	40
<b>9</b>	<b>Appendix</b>	<b>42</b>
	Mean and variance of $B(n, p)$ .....	42
	Proof of formulae .....	42
	Mean and variance for a continuous uniform distribution.....	43
	Proof of formulae .....	43

Normal approximation to the Binomial .....	44
Integral of $e^{(-0.5x^2)}$ .....	46
Poisson probabilities from first principles .....	47
Preliminary result .....	47
Deriving the Poisson probabilities .....	47
Index .....	49



# 1 The Binomial distribution

## Factorials

$n$  objects in a row can be arranged in  $n!$  ways,  $n$  factorial ways.

$$n! = n(n-1)(n-2)(n-3) \times \dots \times 4 \times 3 \times 2 \times 1$$

Note that  $0!$  is defined to be 1. This fits in with formulae for combinations.

---

## Combinations

The number of ways we can choose  $r$  objects from a total of  $n$  objects, where the order does not matter, is called the *number of combinations* of  $r$  objects from  $n$  and is written as

$${}^n C_r = \frac{n(n-1)(n-2)\dots \text{ up to } r \text{ numbers}}{r!} = \frac{n(n-1)(n-2)\dots (n-r+1)}{r!}$$

$$\text{or } {}^n C_r = \frac{n!}{(n-r)! r!}.$$

We can think of this as  $n$  choose  $r$ .

*Example:* Find the number of hands of 4 cards which can be dealt from a pack of 10.

*Solution:* In a hand of cards the order does not matter, so this is just the number of combinations of 4 from 10, or 10 choose 4

$${}^{10} C_4 = \frac{10 \times 9 \times 8 \times 7}{4!} = 210$$

notice 4 numbers on top of the fraction

## Properties of ${}^n C_r$

1.  ${}^n C_0 = {}^n C_n = 1$

2.  ${}^n C_r = {}^n C_{n-r}$  The number of ways of choosing  $r$  is the same as the number of ways of rejecting  $n-r$ .

---

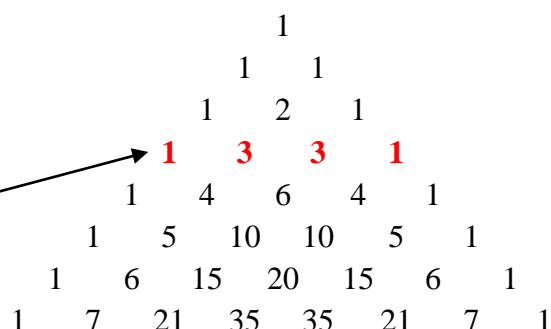
## Binomial Theorem

### Binomial coefficients

We can show that

$$(p + q)^3 = 1p^3 + 3p^2q + 3pq^2 + 1q^3.$$

The numbers 1, 3, 3, 1 are called the binomial coefficients and are the numbers in the 'third' row of Pascal's Triangle.



To write down the expansion of  $(p + q)^6$

We write down the terms in a logical order

then use the numbers in the '6<sup>th</sup>' row of the triangle

$p^6$	$p^5q$	$p^4q^2$	$p^3q^3$	$p^2q^4$	$pq^5$	$q^6$
<b>1</b>	<b>6</b>	<b>15</b>	<b>20</b>	<b>15</b>	<b>6</b>	<b>1</b>

$$\text{to give } (p + q)^6 = 1p^6 + 6p^5q + 15p^4q^2 + 20p^3q^3 + 15p^2q^4 + 6pq^5 + 1q^6.$$

### Binomial coefficients and combinations

${}^nC_r$  is often written  $\binom{n}{r}$ , and gives the numbers in the 'nth row' of Pascal's Triangle..

1	4	6	4	1
---	---	---	---	---

and we have  ${}^4C_0 = \binom{4}{0} = 1$      ${}^4C_1 = \binom{4}{1} = 4$      ${}^4C_2 = \binom{4}{2} = 6$      ${}^4C_3 = \binom{4}{3} = 4$      ${}^4C_4 = \binom{4}{4} = 1$

The binomial coefficients  $\binom{n}{r}$  are equal to the number of combinations  ${}^nC_r$

$$\Rightarrow \binom{n}{r} = {}^nC_r = \frac{n!}{(n-r)!r!}$$


---

## Binomial distribution $B(n, p)$

### Conditions for a Binomial Distribution

- 1) A single trial has exactly two possible outcomes – *success* and *failure*.
- 2) This trial is repeated a *fixed number*,  $n$ , times.
- 3) The  $n$  trials are *independent* of each other.
- 4) The *probability* of success,  $p$ , *remains the same* for each trial.

The probability of success in a single trial is usually taken as  $p$  and the probability of failure as  $q$ . Note that  $p + q = 1$ .



*Example:* 10 dice are rolled. Find the probability that there are 4 sixes.

*Solution:* If  $X$  is the number of sixes then  $X \sim B(10, \frac{1}{6})$

We could have 6,6,6,6,x,x,x,x,x, in that order with probability  $(\frac{1}{6})^4 (\frac{5}{6})^6$  × is 'not 6'  
 or 6, x,x,x,6, 6,x, x,6,x, or 6,6,x,x,6,x,x,x,6,x, or ..... all with probability  $(\frac{1}{6})^4 (\frac{5}{6})^6$

The 4 sixes could appear on the 10 dice in a total of  ${}^{10}C_4$  ways, each way having the same probability, giving

$$P(X = 4) = {}^{10}C_4 \times (\frac{1}{6})^4 (\frac{5}{6})^6 = 0.54265875851 = 0.543 \text{ to 3 s.F.} \quad \text{using calculator}$$

In general, for  $X \sim B(n, p)$

the probability of  $r$  successes is

$$P(X = r) = {}^nC_r \times p^r q^{n-r}, \text{ where } q = 1 - p.$$

## Binomial distribution

The binomial *distribution/table*  $X \sim B(n, p)$  is shown below.

$x$	0	1	2	...	$r$	...	$n$
$P(X = x)$	${}^nC_0 q^n$	${}^nC_1 p q^{n-1}$	${}^nC_2 p^2 q^{n-2}$	...	${}^nC_r p^r q^{n-r}$	...	${}^nC_n p^n$

**N.B.** The term *probability distribution* means

the set of all possible outcomes (in this case the values of  $x = 0, 1, 2, \dots, n$ )

together with their probabilities, or it means a *probability table*.

*Example:* A game of chance has probability of winning 0.73 and losing 0.27. Find the probability of winning more than 7 games in 10 games.

*Solution:* The number of successes is a random variable  $X \sim B(10, 0.73)$ , assuming independence of trials.

$$\begin{aligned} P(X > 7) &= P(X = 8 \text{ or } X = 9 \text{ or } X = 10) \\ &= P(X = 8) + P(X = 9) + P(X = 10) \\ &= {}^{10}C_8 \times 0.73^8 \times 0.27^2 + {}^{10}C_9 \times 0.73^9 \times 0.27^1 + 0.73^{10} \\ &= 0.34709235895 = 0.347 \text{ to 3 s.F.} \quad \text{using calculator} \end{aligned}$$

$$P(\text{more than 7 wins in 10 games}) = 0.347$$

---

## Cumulative binomial probability tables

*Example:* For  $X \sim B(30, 0.35)$ , find the probability that  $7 < X \leq 12$ .

*Solution:* A moment's thought shows that we need  $P(X = 8, 9, 10, 11 \text{ or } 12)$

$$= P(X \leq 12) - P(X \leq 7) = 0.7802 - 0.1238, \quad \text{using tables for } n = 30, p = 0.35$$

$$= 0.6564 \text{ to 4 D.P.} \quad \text{4 D.P. as we are using tables}$$

*Example:* A bag contains a large number of red and white discs, of which 85% are red. 20 discs are taken from the bag; find the probability that the number of red discs lies between 12 and 17 inclusive.

*Solution:* As there is a *large* number of discs in the bag, we can assume that the probability of a red disc remains the same for each trial,  $p = 0.85$ .

Let  $X$  be the number of red discs  $\Rightarrow X \sim B(20, 0.85)$

We now want  $P(12 \leq X \leq 17)$ .

At first glance this looks simple until we realise that the tables stop at probabilities of 0.5.

We need to consider the number of white discs,  $Y \sim B(20, 0.15)$ , where  $0.15 = 1 - 0.85$ ,

For  $12 \leq X \leq 17$  we have  $X = 12, 13, 14, 15, 16 \text{ or } 17$  it is worth writing out the numbers  
for which values  $Y = 8, 7, 6, 5, 4 \text{ or } 3$  since  $X + Y = 20$

$$\begin{aligned} \Rightarrow P(12 \leq X < 17) &= P(3 \leq Y \leq 8) \text{ for } Y \sim B(20, 0.15) \\ &= P(Y \leq 8) - P(Y \leq 2) = 0.9987 - 0.4049 \quad \text{from tables} \\ &= 0.5938 \text{ to 4 D.P.} \end{aligned}$$

## Mean and variance of the binomial distribution.

If  $X \sim B(n, p)$  then

the expected mean is  $E[X] = \mu = np$ ,

the expected variance is  $\text{Var}[X] = \sigma^2 = npq = np(1-p)$ .

This means that if the set of  $n$  trials were to be repeated a very large number of times and the number of successes recorded each time,  $x_1, x_2, x_3, x_4 \dots \dots$

then the mean of  $x_1, x_2, x_3, x_4 \dots \dots$  would be  $\mu = np$

and the variance of  $x_1, x_2, x_3, x_4 \dots \dots$  would be  $\sigma^2 = npq$

These formulae are proved in the appendix.

*Example:* A coin is spun 100 times. Find the expected mean and variance of the number of heads.

*Solution:*  $X \sim B(100, \frac{1}{2})$

$$\Rightarrow \mu = np = 100 \times \frac{1}{2} = 50$$

$$\text{and } \sigma^2 = np(1-p) = 100 \times \frac{1}{2} \times \frac{1}{2} = 25$$

$$\Rightarrow \sigma = \sqrt{25} = 5$$

$$\mu - 2\sigma = 50 - 10 = 40,$$

$$\mu + 2\sigma = 50 + 10 = 60$$

So we would expect that the probability that the number of heads lies between 40 and 60 inclusive (within 2 standard deviations of the mean) is about 0.95.

*Example:* It is believed that 35% of people like fish and chips. A survey is conducted to verify this. Find the minimum number of people who should be surveyed if the expected number of people who like fish and chips is to exceed 60.

*Solution:* If  $X$  is the number of people who like fish and chips in a sample of size  $n$ , then  $X \sim B(n, 0.35)$ .

The expected mean,  $E[x] = \mu = np = 0.35n$

The expected number who like fish and chips exceeds 60

$$\Rightarrow 0.35n > 60$$

$$\Rightarrow n > \frac{60}{0.35} = 171.4285714$$

$$\Rightarrow n = 172, \text{ since the expected mean has to exceed } 60.$$

## 2 The Poisson distribution

### Conditions for a Poisson distribution

Events must occur

- 1) *singly* – two events cannot occur simultaneously
- 2) *uniformly* – events occur at a constant rate
- 3) *independently & randomly* – the occurrence of one event does not influence another

*Examples:*

- a) scintillations on a geiger counter placed near a radio-active source

*singly* – in a very short time interval the probability of one scintillation is small and the probability of two is negligible.

*uniformly* – over a ‘longer’ period of time we expect the scintillations to occur at a constant rate

*independently* – one scintillation does not affect another.

- b) distribution of chocolate chips in a chocolate chip ice cream

*singly* – in a very small piece of ice cream the probability of one chocolate chip is small and the probability of two is negligible.

*uniformly* – in ‘larger’ equal size pieces of ice cream, we expect the number of chocolate chips to be roughly constant (provided that the mixture has been well mixed).

*independently* – the presence of one chocolate chip does not affect the presence of another.

- c) defects in the production of glass rods

*singly* – in a very small length of glass rod the probability of one defect is small and the probability of two is negligible.

*uniformly* – in ‘larger’ equal length sections of glass rod of the same size, we expect the number of defects to be roughly constant (provided that the molten glass has been well mixed).

*independently* – the presence of one defect does not affect the presence of another.

---

## Poisson distribution

In a Poisson distribution with mean  $\lambda$  in an interval of some particular length, the probability of  $r$  occurrences in an interval of the same length is

$$P(X = r) = \frac{\lambda^r e^{-\lambda}}{r!} \quad \text{For a proof of these probabilities see the appendix}$$

The Poisson *distribution (table)* of  $X \sim P_0(\lambda)$  is shown below.

$x$	0	1	2	...	$r$	...
$P(X = x)$	$e^{-\lambda}$	$\lambda e^{-\lambda}$	$\frac{\lambda^2 e^{-\lambda}}{2!}$	...	$\frac{\lambda^r e^{-\lambda}}{r!}$	...

As before, the term *probability distribution* means

the set of all possible outcomes (in this case the values of  $x = 0, 1, 2, \dots, n$ )

together with their probabilities, or it means a *probability table*.

Notice that in a Poisson distribution,  $x$  can take any positive or zero integral value, no matter how large. In practice, the probabilities of the 'larger' values will be very, very small.

Finding probabilities for the Poisson distribution is very similar to finding probabilities for the Binomial –

you just use  $\frac{\lambda^r e^{-\lambda}}{r!}$  instead of  ${}^n C_r \times p^r q^{n-r}$ ,

and cumulative tables for Poisson are used in a similar way to the Binomial.

*Example:* Cars pass a particular point at a rate of 5 cars per minute.

- Find the probability that exactly 4 cars pass the point in a minute.
- Find the probability that between at least 3 but fewer than 8 cars pass in a particular minute.
- Find the probability that more than 8 cars pass in 2 minutes.
- Find the probability that more than 3 cars pass in each of two separate minutes.

*Solution:* Let  $X$  be the number of cars passing in a minute, then  $X \sim P_0(5)$

(a)  $X \sim P_0(5)$

$$\Rightarrow P(X = 4) = \frac{5^4 \times e^{-5}}{4!} = 0.175467369768 = 0.175 \text{ to 3 S.F.} \quad \text{using calculator}$$

or  $P(X = 4) = P(X \leq 4) - P(X \leq 3) = 0.4405 - 0.2650 = 0.1755 \text{ to 4 D.P.} \quad \text{using tables}$

(b)  $P(\text{at least 3 but fewer than 8}) = P(3 \leq X < 8)$

$$= P(X \leq 7) - P(X \leq 2) = 0.8666 - 0.1247 = 0.7419 \text{ to 4 D.P.} \quad \text{using tables}$$

- (c) We know that the Poisson distribution is uniform, so if a *mean* of **5** cars pass each minute, it means that a *mean* of **10** cars pass in a **2** minute period.

Thus, if  $Y$  is the number of cars passing in two minutes

$Y \sim P_o(10)$ , and we need

$$P(Y > 8) = 1 - P(Y \leq 8) = 1 - 0.3328 = 0.6672 \quad \text{to 4 D.P.} \quad \text{using tables}$$

- (d) For probability of more than 3 in one 1 minute period, we have  $X \sim P_o(5)$

$$\Rightarrow P(X > 3) = 1 - P(X \leq 3) = 1 - 0.2650 = 0.7350 \quad \text{from tables}$$

$\Rightarrow$  probability of this happening in two separate minutes

$$\text{is } 0.7350^2 = 0.540225 = 0.540 \quad \text{to 3 S.F.} \quad \text{using calculator}$$

*Notice* the difference in the parts (c) and (d). Make sure that you read every question carefully!!

---

## Mean and variance of the Poisson distribution.

If  $X \sim P_o(\lambda)$  then it can be shown that

the expected mean is  $E[X] = \mu = \lambda$

and the expected variance is  $\text{Var}[X] = \sigma^2 = \lambda$ .

This means that if the set of  $n$  trials were to be repeated a very large number of times and the number of occurrences recorded each time,  $x_1, x_2, x_3, x_4 \dots \dots$

then the mean of  $x_1, x_2, x_3, x_4 \dots \dots$  would be  $\mu = \lambda$

and the variance of  $x_1, x_2, x_3, x_4 \dots \dots$  would be  $\sigma^2 = \lambda$

**Note** that the *mean is equal to the variance* in a Poisson distribution.

*Example:* In producing rolls of cloth there are on average 4 flaws in every 10 metres of cloth.

- (a) Find the mean number of flaws in a 30 metre length.
- (b) Find the probability of fewer than 3 flaws in a 6 metre length.
- (c) Find the variance of the number of flaws in a 15 metre length.

*Solution:* Assuming a Poisson distribution – flaws in the cloth occur singly, independently, uniformly and randomly.

- (a) If the mean number of flaws in 10 metres is 4,  
then the mean number of flaws in 30 metre lengths is  $3 \times 4 = 12$ .

- (b) If there are 4 flaws on average in a 10 metre length there will be  $\frac{6}{10} \times 4 = 2.4$  flaws on average in a 6 metre length.

If  $X$  is the number of flaws in a 6 metre length then  $X \sim P_o(2.4)$ .

$$P(X < 3) = P(X = 0) + P(X = 1) + P(X = 2)$$

$$= e^{-2.4} + 2.4 \times e^{-2.4} + \frac{2.4^2 \times e^{-2.4}}{2!}$$

$$= (1 + 2.4 + 2.4 \times 1.2) e^{-2.4}$$

$$= 0.569708746658 = 0.570 \quad \text{to 3 S.F.}$$

using calculator

- (c) If the mean number of flaws in 10 metre lengths is 4, then the mean number of flaws in 15 metre lengths will be

$$\lambda = \frac{15}{10} \times 4 = 6$$

Since, in a Poisson distribution, the variance equals the mean  
the variance in 15 metre lengths is 6.

## The Poisson as an approximation to the binomial

### Binomial $B(n, p)$ for small $p$ or $q$

If in the Binomial distribution  $X \sim B(n, p)$   $p$  is 'small' and  $n$  is 'large', then we can approximate by a Poisson distribution with mean  $\lambda = np$ ,  $X' \sim P_o(np)$ .

And if  $p$  is close to 1 then  $q$  will be small, and  $Y \sim B(n, q)$ , where  $Y = n - X$ , which can be approximated by a Poisson distribution  $Y' \sim P_o(nq)$

Notice that when  $p$  is 'small' and  $n$  is 'large',  
the expected variance of  $B(n, p)$  is  $npq \approx np$  since  $q = 1 - p \approx 1$   
and so expected mean  $\approx$  the variance.

In a Poisson distribution, the expected mean = the variance, so the approximation is suitable.

In practice we use this approximation when  $p$  (or  $q$ ) is small and  $np \leq 10$ ,  
and when  $np > 10$  we use the Normal approximation (see later).

*Example:* If the probability of hitting the bull in a game of darts is  $\frac{1}{20}$ , find the probability of hitting at least 3 bulls in 50 throws using

- (a) the Binomial distribution
- (b) the Poisson approximation to the Binomial.

*Solution:*  $P(\text{at least three bulls}) = 1 - P(0, 1 \text{ or } 2) = 1 - P(\leq 2)$ .

- (a) For  $X \sim B(50, 0.05)$  the cumulative binomial tables give

$$P(X \leq 2) = 0.5405$$

$$\Rightarrow P(\text{at least three bulls}) = 1 - 0.5405 = 0.4595 \quad \text{to 4 D.P.} \quad \text{using tables}$$

- (b)  $X \sim B(50, 0.05)$  the expected mean  $\lambda = np$

$$\Rightarrow \lambda = 50 \times 0.05 = 2.5 \quad (< 10)$$

We use the approximation  $Y \sim P_o(2.5)$ .

The cumulative Poisson tables for  $\lambda = 1$  give

$$P(Y \leq 2) = 0.5438$$

$$P(\text{at least three bulls}) = 1 - 0.5438 = 0.4562 \quad \text{to 4 D.P.} \quad \text{using tables}$$

Not surprisingly the answers to parts (a) and (b) are different but not very different.

---

## Selecting the appropriate distribution

Sometimes you will need to use a mixture of distributions to solve one problem.

*Example:* On average I make 7 typing errors on a page (and that is on a good day!).

- (a) Find the probability that I make more than 10 mistakes on a page.
- (b) In typing 5 pages find the probability that I make more than 10 mistakes on exactly 3 pages.

*Solution:*

- (a) Assuming single, uniform and independent/random we can use the Poisson distribution  $P_o(7)$  and from the cumulative Poisson tables, taking  $X$  as the number of typing errors

$$X \sim P_o(7) \Rightarrow P(X \leq 10) = 0.9015$$

$$\Rightarrow P(X > 10) = 1 - P(X \leq 10) = 1 - 0.9015 = 0.0985 \quad \text{to 4 D.P. (using tables)}$$

- (b) From (a) we know that the probability of one page with more than 10 errors is 0.0985 and we take  $Y$  as the number of pages with more than 10 errors. Thus for 5 pages

$$Y \sim B(5, 0.0985)$$

$$\Rightarrow P(3 \text{ pages with more than 10 errors}) = {}^5C_3 \times (0.0985)^3 \times (0.9015)^2$$

$$= 0.00777 \quad \text{to 3 S.F.} \quad \text{using calculator}$$

---



### 3 Continuous random variables

#### Probability density functions

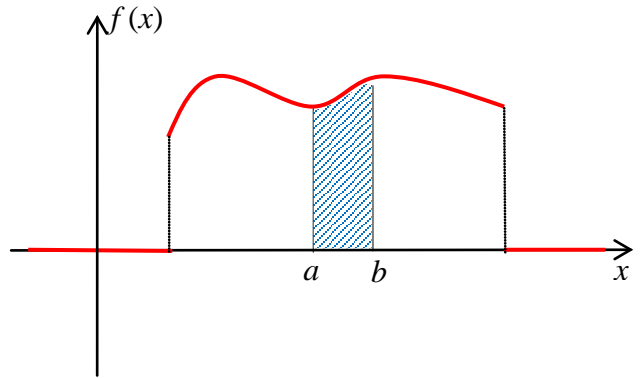
For a continuous random variable we use a *probability density function* instead of a probability distribution for discrete values.

#### Conditions

A continuous random variable,  $X$ , has probability density function  $f(x)$ , as shown

where

1. total area is 1  $\Rightarrow \int f(x)dx = 1$
2. the curve never goes below the  $x$ -axis  
 $\Leftrightarrow f(x) \geq 0$  for all values of  $x$
3. probability that  $X$  lies between  $a$  and  $b$  is the area from  $a$  to  $b$   
 $\Rightarrow P(a < X < b) = \int_a^b f(x) dx.$
4. Outside the interval shown,  $f(x) = 0$  and this **must** be shown on any sketch – see red lines.
5. Notice that  $P(X < b) = P(X \leq b)$  as no extra area is added.
6.  $P(X = b)$  **always equals 0** (as there is no area) but this does **not** mean that  $X$  can never equal  $b$ .



*Example:*  $X$  is a random variable with probability density function

$$\begin{aligned} f(x) &= kx(4 - x^2) && \text{for } 0 \leq x \leq 2 \\ f(x) &= 0 && \text{for all other values of } x. \end{aligned}$$

- (a) Find the value of  $k$ .
- (b) Find the probability that  $\frac{1}{2} < x \leq 1$ .
- (c) Sketch the probability density function.

*Solution:* (a) The total area between 0 and 2 must be 1

$$\Rightarrow \int_0^2 kx(4 - x^2) = 1$$

$$\Rightarrow k \left[ 2x^2 - \frac{1}{4}x^4 \right]_0^2 = 1$$

$$\Rightarrow k \times [8 - 4] = 1$$

$$\Rightarrow k = \frac{1}{4}$$

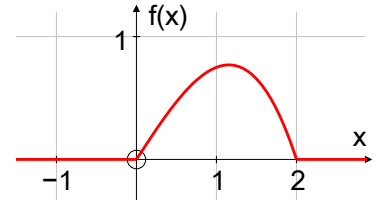
(b) The probability that  $\frac{1}{2} < x \leq 1$  is the area between  $\frac{1}{2}$  and 1

$$= \int_{0.5}^1 \frac{1}{4}x(4 - x^2) dx = \frac{1}{4} \left[ 2x^2 - \frac{x^4}{4} \right]_{0.5}^1$$

$$= \frac{1}{4} \left[ \left( 2 - \frac{1}{4} \right) - \left( \frac{1}{2} - \frac{1}{64} \right) \right] = \frac{81}{256} = 0.316$$

to 3 S.F. using calculator

(c) Note that  $f(x)$  is zero outside the interval  $[0, 2]$  and this must be shown on your sketch to gain full marks in the exam.



## Cumulative probability density function

This is like cumulative frequency;

the cumulative probability density function  $F(X) = P(x < X)$  or  $P(x \leq X)$

Note that there is no difference between the two expressions for a continuous distribution.

So for a probability density function  $f(x)$

$$F(X) = P(x < X) = \int_{-\infty}^X f(x) dx$$

$$\Rightarrow f(x) = \frac{d(F(x))}{dx}$$

Notice that for a cumulative probability density function  $F(X)$ ,  $0 \leq F(X) \leq 1$ .

For the 'smallest' value of  $x$ ,  $F(x) = 0$ , and

for the 'largest' value of  $x$ ,  $F(x) = 1$ .

*Example:* The random variable  $X$  has probability density function

$$f(x) = \frac{x}{8} \quad \text{for } 0 \leq x \leq 4,$$

$$f(x) = 0 \quad \text{otherwise.}$$

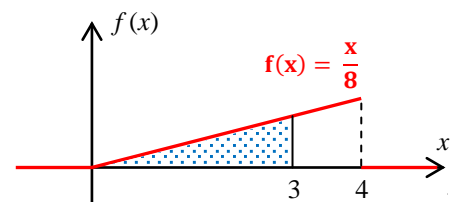
Find the cumulative probability that  $X \leq 3$ , i.e. find  $F(3)$ .

*Solution:* We want  $F(3) = P(x \leq 3)$

$$= \int_0^3 \frac{x}{8} dx = \left[ \frac{x^2}{16} \right]_0^3 = \frac{9}{16}$$

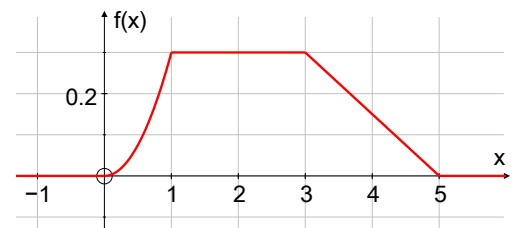
Notice that we could have drawn a sketch and found the area of the triangle

$$P(x \leq 3) = \frac{1}{2} \times 3 \times \frac{3}{8} = \frac{9}{16}$$



*Example:* A random variable  $X$  has a probability density function

$$f(x) = \begin{cases} \frac{3}{10}x^2 & 0 \leq x < 1 \\ \frac{3}{10} & 1 \leq x < 3 \\ \frac{3}{4} - \frac{3}{20}x & 3 \leq x < 5 \\ 0 & \text{otherwise} \end{cases}$$



- (a) Find  $F(x)$ .  
 (b) Sketch the graph of  $F(x)$ .

*Solution:*

(a)  $F(x) = \int f(x) dx$

$0 \leq x < 1$

$$F(x) = \int \frac{3}{10}x^2 dx = \frac{1}{10}x^3 + c$$

$$F(\text{smallest value}) = 0$$

$$\Rightarrow F(0) = 0 \quad \Rightarrow c = 0$$

$$\Rightarrow F(x) = \frac{1}{10}x^3$$

$1 \leq x < 3$

$$F(x) = \int \frac{3}{10} dx = \frac{3}{10}x + c'$$

Finding  $c'$  is more complicated here.

The interval  $[0, 1)$  ends with  $F(1) = \frac{1}{10} \times 1^3 = \frac{1}{10}$ ,

and so the interval  $[1, 3)$  must start with  $F(1) = \frac{1}{10}$

$$\Rightarrow F(1) = \frac{3}{10} \times 1 + c' = \frac{1}{10} \quad \Rightarrow c' = \frac{-1}{5}$$

$$\Rightarrow F(x) = \frac{3}{10}x - \frac{1}{5}$$

$3 \leq x < 5$

$$F(x) = \int \left( \frac{3}{4} - \frac{3}{20}x \right) dx = \frac{3}{4}x - \frac{3}{40}x^2 + c''$$

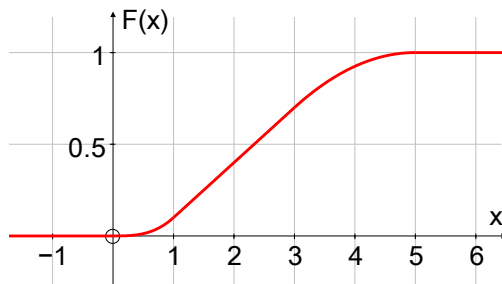
$$F(\text{largest value}) = 1$$

$$\Rightarrow F(5) = 1 \quad \Rightarrow \frac{3}{4} \times 5 - \frac{3}{40} \times 5^2 + c'' = 1 \quad \Rightarrow c'' = \frac{-7}{8}$$

$$\Rightarrow F(x) = \frac{3}{4}x - \frac{3}{40}x^2 - \frac{7}{8}$$

$$\Rightarrow F(x) = \begin{cases} 0 & x < 0 \\ \frac{1}{10}x^3 & 0 \leq x < 1 \\ \frac{3}{10}x - \frac{1}{5} & 1 \leq x < 3 \\ \frac{3}{4}x - \frac{3}{40}x^2 - \frac{7}{8} & 3 \leq x < 5 \\ 1 & x \geq 5 \end{cases}$$

(b)



*Example:* A dart is thrown at a dartboard of radius 25 cm. Let  $X$  be the distance from the centre to the point where the dart lands.

Assuming that the dart is equally likely to hit any point of the board find

- (a) the cumulative probability density function for  $X$ .  
 (b) the probability density function for  $X$ .

*Solution:*

$$\begin{aligned} (a) \quad F(x) &= P(X < x) = P(\text{the dart lands a distance of less than } x \text{ from the centre}) \\ &= \frac{\text{area of circle of radius } x}{\text{total area of the board}} \\ &= \frac{\pi x^2}{\pi 25^2} = \frac{x^2}{625}. \end{aligned}$$

$$\Rightarrow \begin{aligned} F(x) &= 0 & x < 0 \\ F(x) &= \frac{x^2}{625} & 0 \leq x \leq 25 \\ F(x) &= 1 & x > 25 \end{aligned}$$

$$(b) \quad f(x) = \frac{d(F(x))}{dx} = \frac{d\left(\frac{x^2}{625}\right)}{dx} = \frac{2x}{625}$$

$$\Rightarrow \begin{aligned} f(x) &= \frac{2x}{625} & 0 \leq x \leq 25 \\ f(x) &= 0 & \text{otherwise} \end{aligned}$$

## Expected mean and variance

### Frequency, discrete and continuous probability distributions

To change from a frequency distribution to a discrete probability distribution think of each

probability  $p_i$  as  $\frac{f_i}{N}$ ;

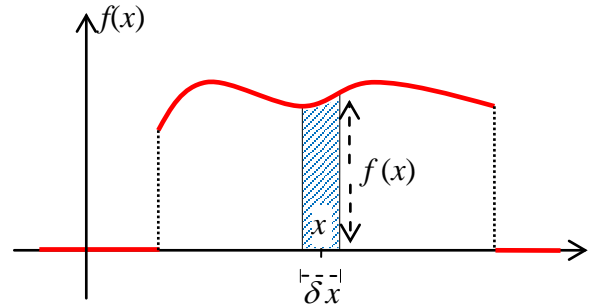
and to change from a discrete probability distribution think of the probability of  $x$  as the area of a narrow strip around  $x$ .

$$\Rightarrow p_i \approx f(x) \delta x$$

then the formula for mean and variance etc are 'the same'.

$$\mu = \int_{-\infty}^{\infty} x f(x) dx$$

$$\sigma^2 = \int_{-\infty}^{\infty} (x - \mu)^2 f(x) dx = \int_{-\infty}^{\infty} x^2 f(x) dx - \mu^2$$



Frequency distribution

$x_1, x_2, \dots, x_n$

$f_1, f_2, \dots, f_n$

$$\sum f_i = N$$

$$m = \frac{1}{N} \sum x_i f_i$$

$$s^2 = \frac{1}{N} \sum x_i^2 f_i - m^2$$

$$= \frac{1}{N} \sum (x_i - m)^2$$

Discrete probability distribution

$x_1, x_2, \dots, x_n$

$p_1, p_2, \dots, p_n$

$$\sum p_i = 1$$

$$\mu = \sum x_i p_i$$

$$\sigma^2 = \sum x_i^2 p_i - \mu^2$$

$$= \sum (x_i - \mu)^2 p_i$$

Continuous probability distribution

$-\infty < x < \infty$

$f(x)$

$$\int_{-\infty}^{\infty} f(x) dx = 1$$

$$\mu = \int_{-\infty}^{\infty} x f(x) dx$$

$$\sigma^2 = \int_{-\infty}^{\infty} x^2 f(x) dx - \mu^2$$

$$= \int_{-\infty}^{\infty} (x - \mu)^2 f(x) dx$$

## Mode, median & quartiles for a continuous random variable

### Mode

The *mode* is the 'most popular' and so will be at the greatest value of  $f(x)$  in the interval.

It is best to sketch a graph, using calculus to find the stationary points if necessary.

Remember that the mode might be at one end of the interval, not in the middle.

*Example:* Find the mode for a random variable with probability density function

$$f(x) = \frac{3}{40}(x^2 - 2x + 2) \quad \text{for } 0 \leq x \leq 4,$$

$$f(x) = 0 \quad \text{otherwise}$$

*Solution:*  $\frac{df}{dx} = \frac{3}{40}(2x - 2) = 0$  when  $x = 1$ .

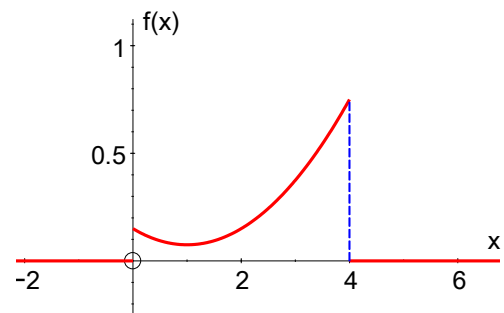
$\Rightarrow \frac{d^2f}{dx^2} = \frac{6}{40}$ , positive for all values of  $x \Rightarrow$  **minimum** when  $x = 1$

We now look at the whole graph in the interval

$$f(0) = \frac{6}{40}, \quad f(1) = \frac{3}{40}, \quad f(4) = \frac{30}{40}$$

$\Rightarrow$  graph has the largest value when  $x = 4$

$\Rightarrow$  mode is  $x = 4$ .



## Median

The median is the middle value and so the probability of being less than the median is  $\frac{1}{2}$  ;

so find  $M$  such that  $P(X < M) = \frac{1}{2}$ .

$$\Rightarrow \int_{-\infty}^M f(x) dx = \frac{1}{2}.$$

*Example:* Find the median for a random variable with probability density function

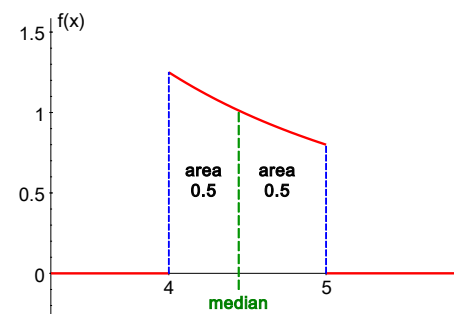
$$f(x) = \frac{20}{x^2} \quad \text{for } 4 \leq x \leq 5,$$

$$f(x) = 0 \quad \text{otherwise.}$$

*Solution:* The median  $M$  is given by  $\int_4^M \frac{20}{x^2} dx = \frac{1}{2}$

$$\Rightarrow \left[ -\frac{20}{x} \right]_4^M = \frac{1}{2} \quad \Rightarrow -\frac{20}{M} + 5 = \frac{1}{2}$$

$$\Rightarrow M = 4 \frac{4}{9}$$



## Quartiles

Quartiles are found in the same way as the median.

$$P(X < Q_1) = \frac{1}{4} \Rightarrow \int_{-\infty}^{Q_1} f(x) dx = \frac{1}{4}.$$

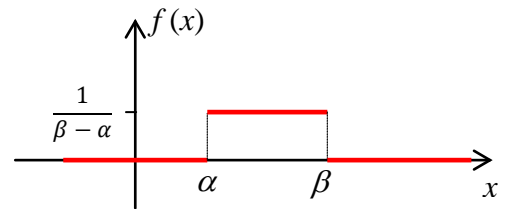
$$P(X < Q_3) = \frac{3}{4} \Rightarrow \int_{-\infty}^{Q_3} f(x) dx = \frac{3}{4}.$$

## 4 Continuous uniform (rectangular) distribution

### Definition

A continuous uniform distribution has **constant** probability density over a fixed interval.

Thus  $f(x) = \frac{1}{\beta - \alpha}$  is the continuous uniform p.d.f. over the interval  $[\alpha, \beta]$  and has a rectangular shape.



### Median

By symmetry the median is  $\frac{\alpha + \beta}{2}$

### Mean and Variance

The expected mean is  $E[X] = \mu = \frac{\alpha + \beta}{2}$ , which is the same as the median.

and the expected variance is  $\text{Var}[X] = \sigma^2 = \frac{(\beta - \alpha)^2}{12}$ .

These formulae are proved in the appendix

---



## 5 Normal Approximations

### The normal approximation to the binomial distribution

#### Conditions for approximation

For a binomial distribution  $B(n, p)$  we know that the mean is  $\mu = np$  and the variance is  $\sigma^2 = npq$ .

If  $p$  is 'near'  $\frac{1}{2}$  and **if  $n$  is large**,  $np > 10$ , then the normal distribution  $N(np, npq)$  can be used as an approximation to the binomial.

This is usually used when using the binomial would give awkward or tedious arithmetic.

For a proof of the Normal Approximation to the Binomial distribution see the appendix.

#### Continuity correction

A continuity correction **must** always be used when approximating the binomial with the normal (this means that 47 must be taken as 46.5 or 47.5 depending on the sense of the question).

*Example:* Find the probability of more than 20 sixes in 90 rolls of a fair die.

*Solution:* The exact distribution is binomial  $X \sim B(90, \frac{1}{6})$ , where  $X$  is the number of sixes; but finding the exact probability would involve much tedious arithmetic.

Note that  $n$  is large,  $np = 15 > 10$  so we can use the normal  $N(np, npq)$  as an approximation.

$$\mu = np = 90 \times \frac{1}{6} = 15$$

$$\sigma^2 = npq = 90 \times \frac{1}{6} \times \frac{5}{6} = 12 \frac{1}{2}$$

$$\Rightarrow \mu = 15 \text{ and } \sigma = \sqrt{12 \cdot 5} = 3.53553$$

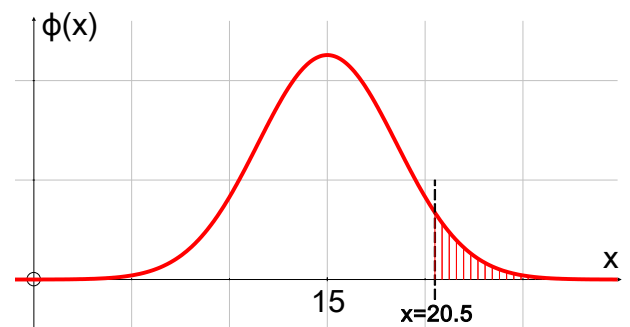
So we use  $Y \sim N(15, \sqrt{12 \cdot 5}^2)$ , where  $Y$  is the number of sixes

To find  $P(\text{more than 20 sixes})$  we must include 21 but not 20 so, using a continuity correction, we find the area to the right of 20.5,

$$\Rightarrow P(X > 20) = P(Y > 20.5)$$

$$= 1 - \Phi\left(\frac{20.5 - 15}{3.53553}\right) = 1 - \Phi(1.5556)$$

$$= 1 - \Phi(1.56) = 1 - 0.9406 = 0.0594 \quad \text{to 4 D.P.} \quad \text{using tables}$$



## The normal approximation to the Poisson distribution

### Conditions for approximation

For a Poisson distribution  $P_o(\lambda)$  we know that the mean is  $\mu = \lambda$  and the variance is  $\sigma^2 = \lambda$  and

if  $n$  is large and  $\lambda > 10$  then the normal distribution  $N(\lambda, \sqrt{\lambda})$  can be used as an approximation to the Poisson distribution  $P_o(\lambda)$ .

This is usually used when using the Poisson would give awkward or tedious arithmetic.

### Continuity correction

As with the normal approximation to the binomial a continuity correction **must** always be used when approximating the Poisson with the normal.

*Example:* Cars arrive at a motorway filling station at a rate of 18 every quarter of an hour. Find the probability that at least 23 cars arrive in a quarter of an hour period.

*Solution:*

The exact distribution is Poisson

$X \sim P_o(18)$ , where  $X$  is the number of cars arriving in a  $\frac{1}{4}$  hour period;

but finding the exact probability would involve much tedious arithmetic.

Note that  $n$  is large,  $\lambda = 18 > 10$  so we can use the normal  $Y \sim N(18, 18)$ , where  $Y$  is the number of cars arriving in a  $\frac{1}{4}$  hour period, as an approximation.

$$\Rightarrow \mu = 18 \text{ and } \sigma = \sqrt{18} = 4.2426$$

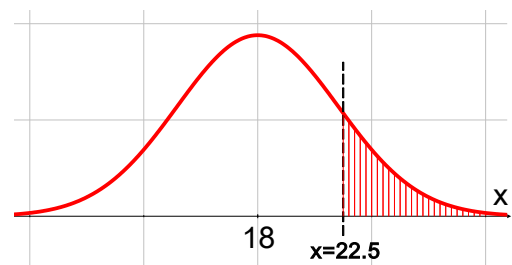
To find  $P(\text{at least 23 cars})$  we must include 23 but not 22 so, using a continuity correction,

we find the area to the right of 22.5,

$$\Rightarrow P(X \geq 23) = P(Y > 22.5)$$

$$= 1 - \Phi\left(\frac{22.5 - 18}{4.2426}\right) = 1 - \Phi(1.06)$$

$$= 1 - 0.8554 = 0.1446 \quad \text{to 4 D.P.} \quad \text{using tables}$$



## 6 Populations and sampling

### Words and their meanings

*Population* A collection of *all* items.

*Finite population* A population is one in which **each** individual member can be given a number (a population might be so large that it is difficult or impossible to give each member a number – e.g. grains of sand on the beach).

*Infinite population*

A population is one in which **each** individual member **cannot** be given a number.

*Census*

An investigation in which every member of the population is evaluated.

*Sampling unit*

A single member of the population which could be included in a sample .

*Sampling frame*

A **list** of **all** sampling units, by name or number, from which samples are to be drawn (usually the whole population but not necessarily).

*Sample*

A selection of sampling units from the sampling frame.

*Simple random sample*

A simple random sample of size  $n$ , is one taken so that every possible sample of size  $n$  has an equal chance of being selected.

The members of the sample are independent random variables,  $X_1, X_2, \dots, X_n$ , and each  $X_i$  has the same distribution as the population.

*Sample survey*

An investigation using a sample.

*Statistic*

A quantity calculated only from the data in the sample, using no *unknown* parameters (for example,  $\mu$  and  $\sigma$ ).

*Sampling distribution of a statistic*

This is the set of all possible values of the statistic together with their individual probabilities; this is sometimes better described by giving the relevant probability density function.

## Advantages and disadvantages of taking a census

### *Advantages*

- Every member of the population is used.
- It is unbiased.
- It gives an accurate answer.

### *Disadvantages*

- It takes a long time.
- It is costly.
- It is often difficult to ensure that the whole population is surveyed.

## Advantages and disadvantages of sampling

### *Advantages*

- Sample will be representative if population large and well mixed.
- Usually cheaper.
- Essential if testing involves destruction (life of a light bulb, etc.).
- Data usually more easily available.

### *Disadvantages:*

- Uncertainty, due to the natural variation – two samples are unlikely to give the same result.
- Uncertainty due to **bias** prevents the sample from giving a representative picture of the population and can occur through:

*sampling from an incomplete sampling frame* – e.g. using a telephone directory for people living in Bangkok (or any large city)

influence of *subjective choice* where supposedly random selection is affected by personal preferences - e.g. interviewing only people without (fierce) dogs

*non-response* where questionnaires about a particular mobile phone service is not answered by many who do not use that service

*substituting convenient sampling units* when those required are not readily available – e.g. visiting neighbours when sampling unit is out!

**NOTE:** Bias cannot be removed by increasing the size of the sample.

**NOTE:** when answering questions on these definitions you may be asked to put your answer in context.

### *Examples:*

The sampling frame is a list of *all amplifiers* and their *serial numbers*.

A sampling unit is one *amplifier*.

The test statistic is the *number voting for Mr. Smith*.

A sample is a random selection of *pupils from the school*.

A census is an investigation in which the *lengths of all rods manufactured are recorded*.

## Sampling distributions

To find the *sampling distribution* of the \*\*\*\*\*

We need all possible values of \*\*\*\*\* , together with their probabilities

Write down all possible samples together with their probabilities

Calculate the value of \*\*\*\*\* for each sample

The sampling distribution of \*\*\*\*\* is a list of all possible values of \*\*\*\*\* together with their probabilities.

*Example:* A large bag contains £1 and £2 coins in the ratio 3 : 1.

A random sample of three coins is taken and their values  $X_1$ ,  $X_2$  and  $X_3$  are recorded.

Find the sampling distribution for the mean.

*Solution:* We must first find **each** sample, its mean and probability

Sample	Mean	Probability
(1, 1, 1)	1	$(\frac{3}{4})^3 = \frac{27}{64}$
(1, 1, 2), (1, 2, 1), (2, 1, 1)	$1\frac{1}{3}$	$3 \times (\frac{3}{4})^2 \times (\frac{1}{4}) = \frac{27}{64}$
(1, 2, 2), (2, 1, 2), (2, 2, 1)	$1\frac{2}{3}$	$3 \times (\frac{3}{4}) \times (\frac{1}{4})^2 = \frac{9}{64}$
(2, 2, 2)	2	$(\frac{1}{4})^3 = \frac{1}{64}$

and so the sampling distribution (or probability table) of the mean is

Mean	1	$1\frac{1}{3}$	$1\frac{2}{3}$	2
Probability	$\frac{27}{64}$	$\frac{27}{64}$	$\frac{9}{64}$	$\frac{1}{64}$

OR, you may be able to use a standard probability distribution

*Example:* A disease is present in a 23% of a population. A random sample of 30 people is taken and the number with the disease,  $D$ , is recorded. What is the sampling distribution of  $D$ ?

*Solution:* The possible outcomes (values of  $D$ ) are

$D$	0	1	...	$r$	...	30
with probabilities	$0.77^{30}$	${}^{30}C_1 \cdot 0.77^{29} \times 0.23$	...	${}^{30}C_r \times 0.77^{30-r} \times 0.23^r$	...	$0.23^{30}$

which we recognise as the Binomial distribution,

so the sampling distribution of  $D$  is  $D \sim B(30, 0.23)$

## 7 Hypothesis tests

*Null hypothesis,  $H_0$*

The hypothesis which is assumed to be correct unless shown otherwise.

*Alternative hypothesis,  $H_1$*

This is the conclusion that should be made if  $H_0$  is rejected

*Hypothesis test*

A mathematical procedure to examine a value of a population parameter proposed by the null hypothesis,  $H_0$ , compared to the alternative hypothesis,  $H_1$ .

*Test statistic*

This is the statistic (calculated from the sample) which is tested (in cumulative probability tables, or with the normal distribution etc.) as the last part of the significance test.

*Critical region*

The range of values which would lead you to reject the null hypothesis,  $H_0$

*Significance level*

The **actual** significance level is the probability of rejecting  $H_0$  when it is in fact true.

### Null and alternative hypotheses, $H_0$ and $H_1$

Both null and alternative hypotheses **must** be stated in symbols only.

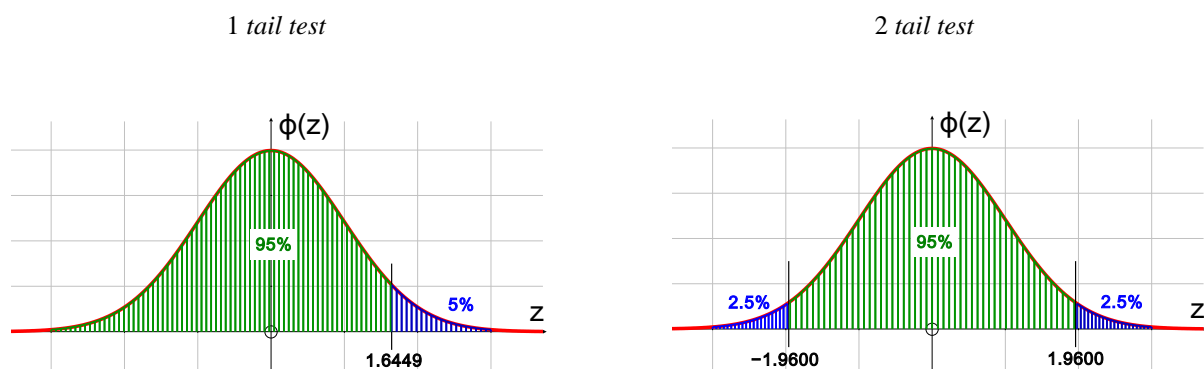
The null hypothesis,  $H_0$ , is the 'working hypothesis', i.e. what you assume to be true for the purpose of the test.

The alternative hypothesis,  $H_1$ , is what you conclude if you reject the null hypothesis: it also determines whether you use a one-tail or a two-tail test.

Your conclusion **must** be stated in full – both in statistical language **and in the context of the question**.

### Hypotheses and significance level

From your observed result (test statistic) you decide whether to reject or not to reject the null hypothesis,  $H_0$ .



From the null hypothesis,  $H_0$ , we could have a result *anywhere* on the graph – including the small (blue) shaded areas.

If the observed result (test statistic) lies in a small (blue) shaded area, we say that

The test statistic is *significant* at 5%, or that we reject  $H_0$ . Thus  $H_0$  could actually be true but we still reject it.

Thus, the *significance level*, 5%, is

the probability that we reject  $H_0$  when it is in fact true,  
or the probability of incorrectly rejecting  $H_0$ .

When we reject the null hypothesis,  $H_0$ , we use the alternative hypothesis to write the conclusion.

## Critical regions and significance levels

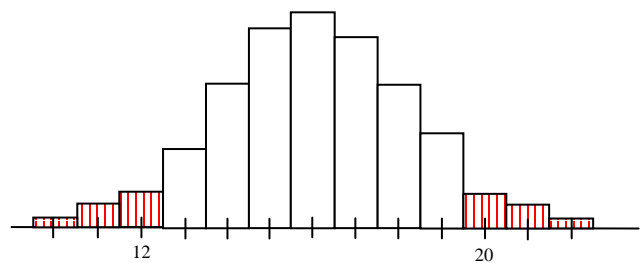
### Poisson and Binomial

The Poisson and Binomial distributions are discrete, and we look at probability histograms.

In the diagram, the critical region (shown by the shaded areas) is  $X \leq 12$  or  $X \geq 20$ .

We include the whole bar around  $X = 12$ , and around  $X = 20$ .

So  $P(X \leq 12)$  is the area to the left of 12.5,  
and  $P(X \geq 20)$  is the area to the right of 19.5.



If  $P(X \leq 12) = 0.0234$  and  $P(X \geq 20) = 0.0217$ , then

*the actual significance level* is  $0.0234 + 0.0217 = 0.0451 = 4.51\%$

Thus the probability of incorrectly rejecting  $H_0$  is 0.0451,

Or, the probability of rejecting  $H_0$  when it is actually true is 0.0451.

## One-tail and two-tail tests

The alternative hypothesis,  $H_1$ , will indicate whether you should use a one-tail or a two-tail test.

For example:

$$H_0: a = b$$

$$H_1: a > b$$

You reject  $H_0$  **only** if  $a$  is significantly bigger than  $b$ .

Thus you are **only** looking at **one end** of the population and a *one-tail test* is suitable.

$$H_0: a = b$$

$$H_1: a \neq b$$

You reject  $H_0$  **either**  $a$  if is significantly bigger than  $b$  **or** if  $a$  is significantly less than  $b$ .

Thus you are looking at **both ends** of the population and a *two-tail test* is suitable.

The points above are best illustrated by worked examples. Note that we always find the probability of the observed result **or worse**: this enables us to see easily whether the observed result lies in the critical region or not.

## Worked examples (binomial, one-tail test)

*Example:* A tetrahedral die (one with four faces! – each equally likely) is rolled 40 times and 6 ‘ones’ are observed. Is there any evidence at the 10% level that the probability of a score of 1 is less than a quarter?

*Notice* that the expected mean is 10 ( $= 40 \times \frac{1}{4}$ ), and we are really asking if the observed result (test statistic) 6 is ‘surprisingly low’.

*Solution:*  $H_0: p = 0.25$

$$H_1: p < 0.25.$$

From  $H_1$  we see that a one-tail test is required, at 10% significance level.

If  $X$  is number of ‘ones’ then assuming binomial  $X \sim B(40, 0.25)$ , from  $H_0$ , and using the cumulative binomial tables

The test statistic (observed value) is  $X = 6$

$$P(X \leq 6 \text{ ‘ones’ in 40 rolls}) = 0.0962 = 9.62\% \quad \text{from tables}$$

Since  $9.62\% < 10\%$  the test statistic (observed result) lies in the critical region.

We reject  $H_0$  and conclude that

there is evidence to show that the probability of a score of 1 is lower than  $\frac{1}{4}$ .

---



*Example:* The probability that a footballer scores from a penalty is 0.8. In twenty penalties he scores only 13 times. Is there any evidence at the 5% level that the footballer is losing his form?

*Solution:*  $H_0: p = 0.8$   
 $H_1: p < 0.8$

If  $X$  is the number of scores from 20 penalties, then  $X \sim B(20, 0.8)$  – from  $H_0$

The cumulative binomial tables do not deal with  $p > 0.5$  so we must ‘turn the problem round’ and consider  $Y$ , the number of misses in 20 penalties, where  $Y \sim B(20, 0.2)$ .

Observed value is  $X = 13$

We consider the values  $X \leq 13$

$\Rightarrow$	$X =$	13	12	11	10	...
$\Rightarrow$	$Y =$	7	8	9	10	...
$\Rightarrow$	$Y \geq$	7				

Using the cumulative binomial tables,  $Y \sim B(20, 0.2)$

$$\begin{aligned} P(X \leq 13) &= P(Y \geq 7) \\ &= 1 - P(Y \leq 6) = 1 - 0.9133 = 0.0867 = 8.67\% \end{aligned}$$

8.67% > 5% (significance level)

$\Rightarrow$  the test statistic (observed result) 7 is not significant (does not lie in the critical region),

Do not reject  $H_0$ .

Conclude that there is evidence that the *player has not lost his form*, or that there is evidence that the *probability of scoring from a penalty is not less than 0.8*.

---

## Worked example (binomial test, two-tail critical region)

*Example:* A tetrahedral die is manufactured with numbers 1, 2, 3 and 4 on its faces. The manufacturer claims that the die is fair.

All dice are tested by rolling 30 times and recording the number of times a 'four' is scored.

- (a) Using a 5% significance level, find the critical region for a two-tailed test that the probability of a 'four' is  $\frac{1}{4}$ .  
Find critical values which give a probability which is *closest* to 0.025.
- (b) Find the **actual** significance level for this test.
- (c) Explain how a die could pass the manufacturer's test when it is in fact biased.

*Solution:*

(a)  $H_0: p = 0.25.$

$H_1: p \neq 0.25$

the die is not fair if there are *too many* or *too few* 'fours'

From  $H_1$  we can see that a two-tailed test is needed, significance level 2.5% at each end.

Let  $X$  be the number of '4's in 30 rolls. From  $H_0$  we have a binomial distribution,  $X \sim B(30, 0.25)$ .

We shall reject the hypothesis if the observed result lies in either half of the critical region each half having a significance level of 2.5%;

For a two tail test, find the values of  $X$  which give a probability closest to 2.5% at each end.

Using cumulative binomial tables for  $X \sim B(30, 0.25)$ :

for the lower critical value

from tables

$$P(X \leq 2) = 0.0106 \quad (2.5\% - 1.06\% = 1.44\%)$$

$$P(X \leq 3) = 0.0374 \quad (3.74\% - 2.5\% = 1.24\%)$$

$X \leq 3$  gives the value closest to 2.5%, so  $X = 3$  is lower critical value

and for the higher critical value

from tables

$$P(X \geq 13) = 1 - P(X \leq 12) = 1 - 0.9784 = 0.0216 \quad (2.5\% - 2.16\% = 0.34\%)$$

$$P(X \geq 12) = 1 - P(X \leq 11) = 1 - 0.9493 = 5.07\% \quad (5.07\% - 2.5\% = 2.57\%)$$

$X \geq 13$  gives the value closest to 2.5%, so  $X = 13$  is higher critical value

Thus the critical region is  $X \leq 3$  **or**  $X \geq 13$ .

(b) The **actual** significance level is  $0.0374 + 0.0216 = 0.0590 = 5.90\%$ . to 3 s.f.

(c) The die could still be biased in favour of, or against, one of the other numbers.

## Worked example (Poisson)

*Example:* Cars usually arrive at a motorway filling station at a rate of 3 per minute. On a Tuesday morning cars are observed to arrive at the filling station at a rate of 5 per minute. Is there any evidence at the 10% level that this is an unusually busy morning?

*Solution:*  $H_0: \lambda = 3$

$H_1: \lambda > 3$

unusually busy would mean that  $\lambda$  would increase

From  $H_1$  we see that a one-tail test is needed, significance level 10%.

It seems sensible to assume that the numbers of cars arriving per minute is independent, uniform and single so a Poisson distribution is suitable.

Let  $X$  be the number of cars arriving per minute, then from  $H_0$ ,  $X \sim P_0(3)$

The test statistic (observed value) is  $X = 5$

$P(X \geq 5) = 1 - P(X \leq 4) = 1 - 0.8153 = 0.1847 = 18.47\% > 10\%$  using tables

which is not significant at the 10% level. Do not reject  $H_0$ .

Conclude that there is evidence that *Tuesday morning is not unusually busy*,

or there is evidence that *cars are not arriving at a rate greater than 3 cars per minute*.

## Worked example (Poisson, critical region)

*Example:* Over a long period in the production of glass rods the mean number of flaws per 5 metres length is 4. A length of 10 metres is to be examined. Find the critical region to show that the machine is producing too many flaws at the 5% level.

Find the lowest value which gives a probability of less than 5%.

*Solution:*

$H_0: \lambda = 8$

flaws occur uniformly, so if mean per 5 metres is 4, then mean per 10 metres is 8

$H_1: \lambda > 8$

machine producing too many flaws would mean that  $\lambda$  would increase

We can see from  $H_1$  that we need a one-tail test, significance level 5%.

For a one tail test, find the first value of  $X$  for which the probability is less than 5%

It seems sensible to assume that the number of flaws per 10 metre lengths is independent, uniform and single so a Poisson distribution is suitable, and using  $H_0$

$X \sim P_0(8)$

where  $X$  is the number of flaws in a 10 metre length

$P(X \geq 13) = 1 - P(X \leq 12) = 1 - 0.9362 = 0.0638 = 6.38\% > 5\%$  from tables

$P(X \geq 14) = 1 - P(X \leq 13) = 1 - 0.9658 = 0.0342 = 3.42\% < 5\%$

$\Rightarrow X = 14$  is the smallest value for which the probability is less than 5%

$\Rightarrow$  the critical region is  $X \geq 14$ .

## Hypothesis testing using approximations.

*Example:* With current drug treatment, 9% of cases of a certain disease result in total recovery. A new treatment is tried out on a random sample of 100 patients, and it is found that 16 cases result in total recovery. Does this indicate that the new treatment is better at a 5% level of significance?

*Solution:* Let  $X$  be the number of cases resulting in total recovery.

$H_0: p = 0.09$  new treatment has same recovery rate as the current treatment

$H_1: p > 0.09$  new treatment is better than the current treatment

$X \sim B(100, 0.09)$ , which is not in the tables and is awkward arithmetic, so we use an approximation.

$\lambda$  or  $\mu = np = 100 \times 0.09 = 9 < 10$ ,

**$n$  large and  $p$  small**  $\Rightarrow$  we should use the Poisson approximation  $Y \sim P_0(9)$

The test statistic is  $X = 16$ .

We want  $P(X \geq 16) \approx P(Y \geq 16)$

$= 1 - P(Y \leq 15) = 1 - 0.9780 = 0.0220 < 5\%$  from tables

$\Rightarrow$  this result is significant at 5%

$\Rightarrow$  Reject  $H_0$ .

Conclude that there is some evidence that the *proportion of cases of total recovery has increased* from 0.09 under the *new treatment*.

*Example:* With current drug treatment, 20% of cases of a certain disease result in total recovery. A new treatment is tried out on a random sample of 100 patients, and it is found that 26 cases result in total recovery. Does this indicate that the new treatment is better at a 5% level of significance?

*Solution:* Let  $X$  be the number of cases resulting in total recovery.

$H_0: p = 0.2$

$H_1: p > 0.2$

$X \sim B(100, 0.2)$ , which is not in the tables and is awkward arithmetic,.

$\mu = np = 100 \times 0.2 = 20 > 10$ ,  **$n$  large and  $p$  is 'near' 0.5**

so we use a normal approximation.

$\sigma^2 = np(1-p) = 100 \times 0.2 \times 0.8 = 16$

Use the approximation  $Y \sim N(20, 4^2)$

The test statistic is  $X = 26$ .

We want  $P(X \geq 26) \approx P(Y \geq 25.5)$  **you must use a continuity correction**

$$= P\left(Z \geq \frac{25.5-20}{4}\right) = 1 - P(Z \geq 1.375) \quad (\text{use } Z = 1.38)$$

$$= 1 - 0.9162 = 0.0838 > 5\%$$

$\Rightarrow$  the result is **not** significant at 5%

$\Rightarrow$  Do not reject  $H_0$ .

Conclude that there is evidence that the *proportion of cases of total recovery* has *not increased* from 0.2 under the *new treatment*,

or conclude that there is evidence that the *new treatment* is *not better*.

---

## 8 Context questions and answers

### Accuracy

You are required to *give your answers to an appropriate degree of accuracy*.

There is no hard and fast rule for this, but the following guidelines should never let you down.

1. When using a calculator, give 3 S.F. *unless* finding  $S_{xx}$ ,  $S_{xy}$  etc. in which case you can give more figures – you should use *all* figures when finding the PMCC or the regression line coefficients.
  2. Sometimes it is appropriate to give a mean to 1 or 2 D.P. rather than 3 S.F.
  3. When using the tables and doing simple calculations (which do not *need* a calculator), you should give 4 D.P.
- 

### General vocabulary

You must include the **context** in your answers, where appropriate. Definitions alone are **not** enough.

#### Question 1

Explain what you understand by the statistic  $Y$ .

#### Answer

A statistic is a *calculation* from **only** the values in the *sample*,  $X_1, X_2, \dots, X_n$  that does not contain any *unknown parameters*.

---

#### Question 2

A random sample is taken of the heights of 20 people living in a small town. The mean height, 163 cm, is calculated. Why can the number 163 be considered as a statistic?

#### Answer

163 is the **mean height** of the **20 people** in the sample, and can be calculated **only** using the heights in the sample.

---

#### Question 3

The number of hurricanes in a two month period follows a Poisson distribution.

Based on the null hypothesis that the mean number of hurricanes in two months is 7, the critical values, at 5% significance level, are 2 and 12. The number of hurricanes,  $n$ , in a two month period is then recorded

What is the test statistic, and what is meant by the critical region.

#### Answer

The test statistic is  $n$ , the *number of hurricanes* in a *two month period*, and the critical region,  $X \leq 2$  or  $X \geq 12$ , is the *range of values* of  $n$ , the *number of hurricanes* in a two month period, which would lead to the *rejection* of  $H_0$ .

---

#### Question 4

Explain what you understand by

- (a) a population,
- (b) a statistic.

A researcher took a sample of 100 voters from a certain town and asked them who they would vote for in an election. The proportion who said they would vote for Dr Smith was 35%.

- (c) State the population and the statistic in this case.
- (d) Explain what you understand by the sampling distribution of this statistic.

Answer

- (a) A population is a *collection of all items*
  - (b) A *calculation only* from the *sample* which contains no *unknown quantities/parameters*.
  - (c) The population is '*voters in the town*'. The statistic is '*percentage/proportion voting for Dr Smith*'.
  - (d) *List of all possible samples* (of size 100) of those *voting for Dr Smith* together with the *probability of each sample*. In this case the sampling distribution is  $B(100, 0.35)$
- 

## Skew

#### Question 1

In a sample of the lengths of 40 worms, the lower quartile was 8 cm, the median was 16 cm and the upper quartile was 27 cm. The length of the shortest worm was 5 cm, and the longest was 34 cm. Describe the skewness of the sample. Give a reason for your answer.

Answer

$$Q_1 = 8, Q_2 = 16 \text{ and } Q_3 = 27, \Rightarrow Q_3 - Q_2 = 11 > Q_2 - Q_1 = 8 \Rightarrow \text{positive skew.}$$

---

#### Question 2

A sample of the weights of apples picked from one tree had mean 103 g, median 105 g and mode 106 g. Describe the skewness of the sample. Give a reason for your answer.

Answer

$$\text{Mean} = 103 < \text{median} = 105 < \text{mode} = 106 \Rightarrow \text{negative skew.}$$

---

## Binomial and Poisson distributions

### Question 1

A company claims that a quarter of the bolts sent to them are faulty. To test this claim the number of faulty bolts in a random sample of 50 is recorded. Give two reasons why a binomial distribution may be a suitable model for the number of faulty bolts in the sample

Answer

Two from      There are exactly 2 outcomes, *faulty bolts* or not *faulty*.  
The probability of a *faulty bolt* is constant  
Choices of *bolts* are independent.  
There is a fixed number of trials, *50 bolts selected*.

---

### Question 2

State two conditions under which a Poisson distribution is a suitable model for the number of misprints on a page.

Answer

*Misprints occur randomly / independently, singly and at a constant rate*      any two of the 3

---

### Question 3

An estate agent sells houses at a mean rate of 7 per week.

Suggest a suitable model to represent the number of properties sold in a randomly chosen week. Give two reasons to support your model.

Answer

Poisson,  $P_0(7)$ . *Sales of houses occur independently/randomly, singly, at a constant rate.*

---

### Question 4

A call centre agent handles telephone calls at a rate of 18 per hour.

(a) Give two reasons to support the use of a Poisson distribution as a suitable model for the number of calls per hour handled by the agent.

Answer

*Calls occur singly*      any two of the 3  
*Calls occur at a constant rate*  
*Calls occur independently or randomly.*

---

---



### Question 5

The number of daisies in each of several equal size squares was counted. The mean number of daisies per square was 36.9 and the variance was 37.3. Explain why these figures support the choice of a Poisson distribution as a model.

Answer

For a *Poisson* model,  $Mean = Variance$  ; for these data  $36.9 \approx 37.3 \Rightarrow$  Poisson

---

## Approximations to Poisson and Binomial

### Question 1

Over a long period it is known that 2% of articles produced are defective. A sample of 200 articles is taken. What distribution describes this situation, and what is a suitable approximation to estimate the probability that there are exactly 5 defective articles.

Answer

Binomial distribution  $X \sim B(200, 0.02)$  describes this situation.

$n = 200$  is *large*,  $p = 0.02$  is *small* so use the Poisson approximation  $Y \sim P_o(np) \Leftrightarrow Po(4)$ .

---

### Question 2

- (a) State the condition under which the normal distribution may be used as an approximation to the Poisson distribution.
- (b) Explain why a continuity correction must be incorporated when using the normal distribution as an approximation to the Poisson distribution.

Answer

(a)  $\lambda > 10$  or *large* (use of  $\mu$  instead of  $\lambda$  is OK).

(b) The *Poisson* distribution is *discrete* and the *normal* distribution is *continuous*.

---

### Question 3

Write down the conditions under which the Poisson distribution may be used as an approximation to the Binomial distribution.

Answer

If  $X \sim B(n,p)$  and

$n$  is *large*,  $n >$  about 50

$p$  is *small*,  $p < 0.2$ , **or**  $q = 1 - p$  is **small**

but I would not worry too much about the 0.2 and the 50.

then  $X$  can be approximated by  $P_o(np)$ , **or**  $P_o(nq)$

---

Question 4

Write down two conditions for  $X \sim B(n, p)$  to be approximated by a normal distribution

$$Y \sim N(\mu, \sigma^2).$$

Answer

If  $X \sim B(n, p)$  and

$n$  is large or  $n > 10$                       or  $np > 5$  or  $nq > 5$

$p$  is close to 0.5                              or  $nq > 5$  and  $np > 5$

then  $X \sim B(n, p)$  can be approximated by  $Y \sim N(np, npq)$ .

---

## Sampling

Question 1

Explain what you understand by

- (a) a sampling unit.
- (b) a sampling frame.
- (c) a sampling distribution.

Answer

- (a) *Individual member or element of the population or sampling frame.*
  - (b) *A list by name or number of all sampling units or all the population.*
  - (c) *All possible samples are chosen from a population; the values of a statistic together with the associated probabilities is a sampling distribution.*
- 

Question 2

Before introducing a new rule, the secretary of a golf club decided to find out how members might react to this rule.

- (a) Explain why the secretary decided to take a random sample of club members rather than ask all the members.
- (b) Suggest a suitable sampling frame.
- (c) Identify the sampling units.

Answer

- (a) Saves time / cheaper / easier or  
*a census/asking all members takes a long time or is expensive or difficult to carry out*
  - (b) *List, register or database of all club members/golfers*
  - (c) *Club member(s)*
-

*Question 3*

A bag has a large number of discs numbered 1, 2 or 3. One third of the discs have the number 1, half of the discs have the number 2 and one sixth of the discs have the number 3. Samples of size 3 are taken from the bag. What is meant by the sampling distribution of the median,  $M$ ?

*Answer*

Find all possible samples, with their probabilities, of three discs and calculate their medians. Then give all possible values of the median, 1 or 2 or 3, together with their probabilities.

---

*Question 4*

11% of pupils in a large school are left handed. Samples of size 20 pupils are taken. Describe the sampling distribution of the number of left handed pupils.

*Answer*

To find the sampling distribution of the number of left handed pupils, we take all possible values of the number of left handed pupils, 0, 1, 2, 3, ..., 20 in a sample, and calculate their probabilities.

This is the binomial distribution,  $P(X = r) = {}^{20}C_r (1 - 0.11)^{20-r} \times 0.11^r$ , which can be summarised as  $B(20, 0.11)$

So the sampling distribution of the number of left handed people is  $B(20, 0.11)$ .

---

## 9 Appendix

### Mean and variance of $B(n, p)$

#### Proof of formulae

For a *single trial* with probabilities of success,  $p$ , and failure,  $q$ , and  $p + q = 1$

number of success	probability		
$y$	$p$	$yp$	$y^2p$
$0$	$q$	$0$	$0$
$1$	$p$	$p$	$p$

$$E[Y] = \sum yp = p$$

$$\text{Var}[Y] = E[Y^2] - (E[Y])^2 = p - p^2 = p(1 - p) = pq$$

For  $n$  independent single trials,  $X_1, X_2, X_3, \dots, X_n$ ,

$$E[X_i] = p$$

$$\text{Var}[X_i] = pq, \quad \text{for } i = 1, 2, 3, \dots, n$$

Defined  $X = X_1 + X_2 + X_3 + \dots + X_n$ ,

then  $X \sim B(n, p)$

$$\mu = E[X] = E[X_1 + X_2 + X_3 + \dots + X_n] = E[X_1] + E[X_2] + E[X_3] + \dots + E[X_n] = np$$

$$\begin{aligned} \sigma^2 &= \text{Var}[X] = \text{Var}[X_1 + X_2 + X_3 + \dots + X_n] \\ &= \text{Var}[X_1] + \text{Var}[X_2] + \text{Var}[X_3] + \dots + \text{Var}[X_n] = npq \quad \dots \mathbf{I} \end{aligned}$$

Thus for  $X \sim B(n, p)$

$$\mu = E[X] = np$$

$$\sigma^2 = \text{Var}[X] = npq = np(1 - p).$$

Note that the result **I** requires all  $X_i$  to be independent – see S3.

## Mean and variance for a continuous uniform distribution

### Proof of formulae

(a) Expected mean

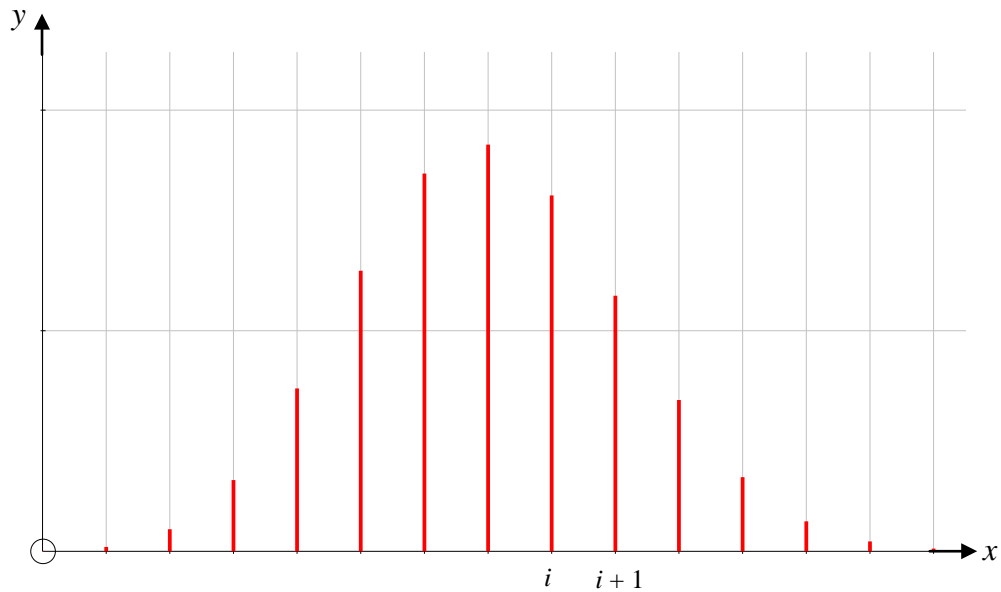
$$\begin{aligned} E[X] &= \int x f(x) dx = \int_{\alpha}^{\beta} x \frac{1}{\beta - \alpha} dx = \left[ \frac{x^2}{2(\beta - \alpha)} \right]_{\alpha}^{\beta} \\ &= \frac{\beta^2 - \alpha^2}{2(\beta - \alpha)} = \frac{(\beta - \alpha)(\beta + \alpha)}{2(\beta - \alpha)} = \frac{(\beta + \alpha)}{2} \end{aligned}$$

or by symmetry.

(b) Expected variance

$$\begin{aligned} \text{Var}[X] &= \int x^2 f(x) dx - \mu^2 = \int_{\alpha}^{\beta} x^2 \frac{1}{\beta - \alpha} dx - \left( \frac{\beta + \alpha}{2} \right)^2 \\ &= \left[ \frac{x^3}{3(\beta - \alpha)} \right]_{\alpha}^{\beta} - \left( \frac{\beta + \alpha}{2} \right)^2 = \frac{\beta^3 - \alpha^3}{3(\beta - \alpha)} - \left( \frac{\beta + \alpha}{2} \right)^2 \\ &= \frac{(\beta - \alpha)(\beta^2 + \alpha\beta + \alpha^2)}{3(\beta - \alpha)} - \frac{(\beta^2 + 2\alpha\beta + \alpha^2)}{4} \\ &= \frac{(\beta^2 - 2\alpha\beta + \alpha^2)}{12} = \frac{(\beta - \alpha)^2}{12} \end{aligned}$$

## Normal approximation to the Binomial



Let  $X \sim B(n, p)$ , shown in the above graph.

Successive values of  $x$  are  $i, i+1 \Rightarrow \delta x = 1$ .

Let corresponding values of  $y$  be  $y_i$  and  $y_{i+1}$

$$\Rightarrow y_i = {}^n C_i p^i q^{n-i} = \frac{n!}{(n-i)!(i)!} p^i q^{n-i}$$

$$\begin{aligned} \text{and } y_{i+1} &= {}^n C_{i+1} p^{i+1} q^{n-i-1} = \frac{n!}{(n-i-1)!(i+1)!} p^{i+1} q^{n-i-1} \\ &= \frac{n!}{(n-i)!(i)!} p^i q^{n-i} \times \frac{n-i}{i+1} \times \frac{p}{q} \\ &= y_i \times \frac{n-i}{i+1} \times \frac{p}{q} \end{aligned}$$

and so the difference in successive values of  $y$  is  $\delta y = y_{i+1} - y_i$

$$\Rightarrow \delta y = y_i \left( \frac{n-i}{i+1} \times \frac{p}{q} - 1 \right)$$

We shall be allowing  $n$  to become infinitely large, so we change the variables to keep the graph on the page.

$$\text{Let } X = \frac{x-np}{\sqrt{npq}} = \frac{i-np}{\sqrt{npq}}$$

$\Rightarrow \bar{X} = 0$ , and the variance of  $X$  is 1

$$\Rightarrow i = np + X\sqrt{npq}$$

and since  $\delta x = 1$ ,  $\delta X = \frac{1}{\sqrt{npq}}$ .

To keep the area as 1, let  $Y_i = y_i \sqrt{npq}$

$$\begin{aligned}
 \Rightarrow \delta Y &= \delta y \sqrt{npq} = y_i \left( \frac{n-i}{i+1} \times \frac{p}{q} - 1 \right) \sqrt{npq} \\
 &= y_i \left( \frac{np-ip-qi-q}{(i+1)q} \right) \sqrt{npq} \\
 &= y_i \left( \frac{np-i-q}{(i+1)q} \right) \sqrt{npq} && \text{since } p+q=1 \\
 &= y_i \left( \frac{np-np-X\sqrt{npq}-q}{(np+X\sqrt{npq}+1)q} \right) \sqrt{npq} && \text{since } i=np+X\sqrt{npq} \\
 &= y_i \left( \frac{-npqX-q\sqrt{npq}}{(np+X\sqrt{npq}+1)q} \right) \\
 &\cong y_i \left( \frac{-npqX}{(np)q} \right) && \text{when } n \text{ is large} \\
 \Rightarrow \delta Y &\cong \frac{Y_i}{\sqrt{npq}} (-X) && \text{since } Y_i = y_i \sqrt{npq} \\
 \Rightarrow \delta Y &\cong -XY \delta X && \text{since } \delta X = \frac{1}{\sqrt{npq}}
 \end{aligned}$$

Let  $\delta X \rightarrow 0$

$$\begin{aligned}
 \Rightarrow \frac{dY}{dX} &= -XY \\
 \Rightarrow \int \frac{1}{Y} dY &= \int -X dX \\
 \Rightarrow \ln Y &= -\frac{1}{2}X^2 + \ln A \\
 \Rightarrow Y &= A e^{-\frac{1}{2}X^2}
 \end{aligned}$$

Because the area under the binomial histogram was 1, the area under the curve is also 1 (the transformations ensured that the area did not change)

$$\Rightarrow \int_{-\infty}^{\infty} A e^{-\frac{1}{2}X^2} dX = 1$$

We can show, see next page, that

$$\begin{aligned}
 \int_{-\infty}^{\infty} e^{-\frac{1}{2}X^2} dX &= \sqrt{2\pi} \quad \Rightarrow \quad A = \frac{1}{\sqrt{2\pi}} \\
 \Rightarrow Y &= \frac{1}{\sqrt{2\pi}} e^{-\frac{1}{2}X^2}, \text{ which is the equation of the normal distribution } N(0, 1^2).
 \end{aligned}$$

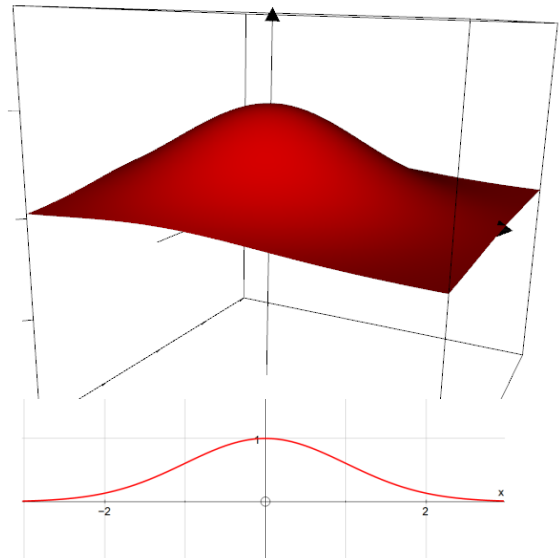
## Integral of $e^{-0.5x^2}$

The surface

$z = e^{-0.5(x^2+y^2)}$ , in Cartesian coordinates can also be written as

$z = e^{-0.5r^2}$  in cylindrical polar coordinates (use polar coordinates in the  $xy$ -plane and then move up  $z$ ).

This surface can be thought of as the curve  $y = e^{-0.5x^2}$  rotated through  $2\pi$  about the  $z$ -axis.



To find the volume, we take a small region in the  $xy$ -plane, or in the  $r\theta$ -plane, multiply its area by  $z$  to find the volume of a vertical 'pillar', and then do a double summation to find the total volume.

In the  $xy$ -plane

area of rectangle is  $\delta x \times \delta y$

$\Rightarrow$  volume of pillar is  $z \delta x \delta y$

$\Rightarrow$  total volume is  $\sum_x \sum_y z \delta x \delta y$

$$\begin{aligned} &\rightarrow \int_{-\infty}^{\infty} \int_{-\infty}^{\infty} e^{-0.5(x^2+y^2)} dx dy \\ &= \int_{-\infty}^{\infty} e^{-0.5x^2} dx \int_{-\infty}^{\infty} e^{-0.5y^2} dy \\ &= \left( \int_{-\infty}^{\infty} e^{-0.5x^2} dx \right)^2 \end{aligned}$$

$$\Rightarrow \left( \int_{-\infty}^{\infty} e^{-0.5x^2} dx \right)^2 = 2\pi$$

$$\Rightarrow \int_{-\infty}^{\infty} e^{-0.5x^2} dx = \sqrt{2\pi}$$

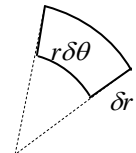
In the  $r\theta$ -plane

area of element is approx  $r \delta\theta \delta r$

$\Rightarrow$  volume of pillar is  $z r \delta\theta \delta r$

$\Rightarrow$  total volume is  $\sum_r \sum_{\theta} z r \delta\theta \delta r$

$$\begin{aligned} &\rightarrow \int_0^{\infty} \int_0^{2\pi} r e^{-0.5r^2} dr d\theta \\ &= \int_0^{\infty} r e^{-0.5r^2} dr \int_0^{2\pi} d\theta \\ &= [-e^{-0.5r^2}]_0^{\infty} \times [\theta]_0^{2\pi} \\ &= 2\pi \end{aligned}$$





# Poisson probabilities from first principles

## Preliminary result

In the Poisson distribution events must occur *uniformly* (or *at a constant rate*), *singly, randomly and independently*.

In a Poisson distribution let  $\mu$  be the mean number of occurrences in an interval of length 1, then in an interval of length  $t$  the mean number of occurrences will be  $\mu t$ .

Divide the interval of length  $t$  into  $n$  very small intervals, each of length  $\delta t$ , then  $t = n \delta t$ .

As events occur singly, the chance of one event occurring in an interval  $\delta t$  is small, and the chance of two events is negligible.

We can approximate this situation by saying that the probability of one event in an interval  $\delta t$  is  $p$ , and the probability of more than one event is 0. Thus the probability of 0 events in an interval  $\delta t$  is  $1 - p$ .

Now we have a binomial distribution  $B(n, p)$  which gives the probabilities (approximately) of  $i$  events in an interval of  $t = n \delta t$ , where  $i = 0, 1, 2, \dots, n$ .

The mean in an interval of  $t$ , considered as  $B(n, p)$  is  $np$ , and, considered as a Poisson distribution the mean is  $\mu t$ .

$$\Rightarrow np \cong \mu t, \text{ and together with } t = n \delta t,$$

$$\Rightarrow p \cong \mu \delta t.$$

In the following we take

$$P(1 \text{ event in an interval } \delta t) = \mu \delta t \text{ and } P(0 \text{ events in an interval } \delta t) = (1 - \mu \delta t).$$

We discount the possibility of more than 1 event in an interval  $\delta t$ .

## Deriving the Poisson probabilities

Let  $p_i(t)$  = probability of  $i$  events in an interval of length  $t$ .

$$\text{Then } p_0(\delta t) = 1 - \mu \delta t, \quad p_1(\delta t) = \mu \delta t$$

$$\text{and } p_0(t + \delta t) = P(0 \text{ event in } t \text{ and } 0 \text{ events in } \delta t)$$

$$= p_0(t) \times p_0(\delta t)$$

since events are independent

$$\Rightarrow p_0(t + \delta t) = p_0(t) \times (1 - \mu \delta t)$$

$$\Rightarrow \frac{p_0(t + \delta t) - p_0(t)}{\delta t} = -\mu p_0(t)$$

$$\text{as } \delta t \rightarrow 0, \quad \frac{dp_0}{dt} = -\mu p_0$$

$$\Rightarrow \int \frac{1}{p_0} dp_0 = \int -\mu dt \quad \Rightarrow p_0(t) = Ae^{-\mu t}$$

$$\text{But } p_0(0) = 1 \Rightarrow A = 1$$

since the probability of 0 events in an interval of length 0 is 1

$$\Rightarrow p_0(t) = e^{-\mu t}$$

Now  $p_1(t + \delta t) = P(\{1 \text{ event in } t \text{ and } 0 \text{ events in } \delta t\} \text{ or } \{0 \text{ events in } t \text{ and } 1 \text{ event in } \delta t\})$   
 $= p_1(t) \times p_0(\delta t) + p_0(t) \times p_1(\delta t)$  since events are independent

$\Rightarrow p_1(t + \delta t) = p_1(t) \times (1 - \mu \delta t) + e^{-\mu t} \times \mu \delta t$

$\Rightarrow \frac{p_1(t+\delta t)-p_1(t)}{\delta t} = -\mu p_1(t) + \mu e^{-\mu t}$

as  $\delta t \rightarrow 0$ ,  $\frac{dp_1}{dt} = -\mu p_1 + \mu e^{-\mu t}$

$\Rightarrow \frac{dp_1}{dt} + \mu p_1 = \mu e^{-\mu t}$  integrating factor is  $e^{\int \mu dt} = e^{\mu t}$

$\Rightarrow \frac{d}{dt}(e^{\mu t} p_1) = \mu$

$\Rightarrow p_1(t) = \mu t e^{-\mu t} + c e^{-\mu t}$

$\Rightarrow p_1(t) = \mu t e^{-\mu t}$  since the probability of 1 event in an interval of length 0 is 0

Moving up  $p_2(t + \delta t) = P(\{2 \text{ events in } t \text{ and } 0 \text{ events in } \delta t\} \text{ or } \{1 \text{ event in } t \text{ and } 1 \text{ event in } \delta t\})$

Note that our model does not allow more than 1 event in an interval  $\delta t$ .

$\Rightarrow p_2(t + \delta t) = p_2(t) \times p_0(\delta t) + p_1(t) \times p_1(\delta t)$  since events are independent

$\Rightarrow p_2(t + \delta t) = p_2(t) \times (1 - \mu \delta t) + \mu t e^{-\mu t} \times \mu \delta t$

$\Rightarrow \frac{p_2(t+\delta t)-p_2(t)}{\delta t} = -\mu p_2(t) + \mu^2 t e^{-\mu t}$

as  $\delta t \rightarrow 0$ ,  $\frac{dp_2}{dt} = -\mu p_2 + \mu^2 t e^{-\mu t}$

$\Rightarrow \frac{dp_2}{dt} + \mu p_2 = \mu^2 t e^{-\mu t}$  integrating factor is  $e^{\int \mu dt} = e^{\mu t}$

$\Rightarrow \frac{d}{dt}(e^{\mu t} p_2) = \mu^2 t$

$\Rightarrow p_2(t) = \frac{\mu^2 t^2 e^{-\mu t}}{2} + c e^{-\mu t}$

$\Rightarrow p_2(t) = \frac{\mu^2 t^2 e^{-\mu t}}{2}$  since the probability of 2 events in an interval of length 0 is 0

Continuing in the same way we get

$$p_3(t) = \frac{\mu^3 t^3 e^{-\mu t}}{3!}, \text{ etc.}$$

Notice that  $\mu t$  is the mean number of occurrences in an interval of length  $t$ . If we write  $\lambda = \mu t$

we have  $p_0 = e^{-\lambda}$ ,  $p_1 = \lambda e^{-\lambda}$ ,  $p_2 = \frac{\lambda^2 e^{-\lambda}}{2!}$ ,  $p_3 = \frac{\lambda^3 e^{-\lambda}}{3!}$ , ...,  $p_r = \frac{\lambda^r e^{-\lambda}}{r!}$ ,

which are the Poisson probabilities for an interval with mean number of occurrences  $\lambda$ .

Note that the proof can be formalised by using proof by induction.

# Index

- accuracy, 36
- binomial distribution, 6, 14, 23
  - mean, 9
  - normal approximation, 23
  - normal approximation, proof, 44
  - poisson approximation, 13
  - probabilities, 7
  - proof for  $np$  and  $npq$ , 42
  - variance, 9
- binomial theorem, 6
  - binomial coefficients, 6
- census, 25
- combinations, 5
  - ${}^n C_r$ , 6
  - properties, 5
- continuity correction
  - normal approx to binomial, 23
  - normal approx to poisson, 24
- continuous uniform distribution, 22
  - mean, 22
  - median, 22
  - proof of formulae for mean and variance, 43
  - variance, 22
- critical region, 28, 32, 33
- factorials, 5
- hypothesis test, 28
  - alternative hypothesis, 28
  - binomial, critical region, 32
  - binomial, two-tail, 32
  - null hypothesis, 28
  - one-tail, 30
  - poisson, critical region, 33
  - poisson, one tail, 33
  - two-tail, 30
  - using normal approximation, 34
- pascal's triangle, 6
- poisson distribution, 10
  - conditions, 10
  - mean, 12
  - normal approximation, 24
  - probabilities, 11
  - probabilities from first principles, 47
  - variance, 12
- population, 25
  - finite, 25
- probability density function
  - conditions, 15
  - mean, 19
  - median, 20
  - mode, 20
  - quartiles, 20
  - variance, 19
- sample, 25
  - advantages, 26
  - disadvantages, 26
  - simple random, 25
- sampling distribution, 25
  - worked example, 27
- sampling frame, 25
- sampling unit, 25
- significance level, 28
  - actual level, 29
  - binomial, 29
  - meaning, 28
  - poission, 29
- statistic, 25
  - test statistic, 28